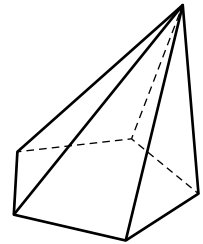
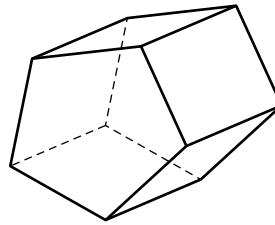
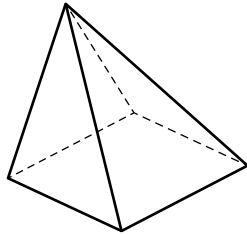


Name: \_\_\_\_\_

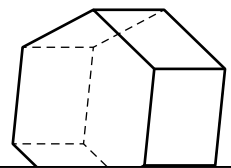
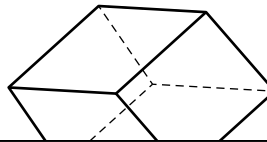
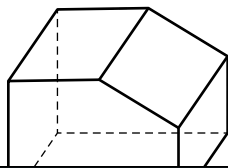
# Faces, Edges, and Vertices

Circle each 3D shape that matches the number of faces, edges, and vertices.

- a.** 5 faces  
8 edges  
5 vertices

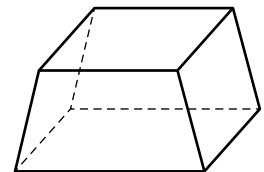
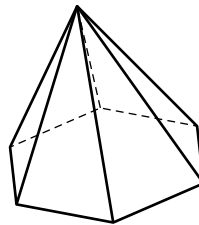
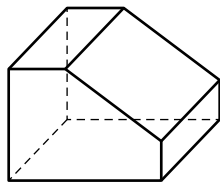


- b.** 6 faces  
12 edges

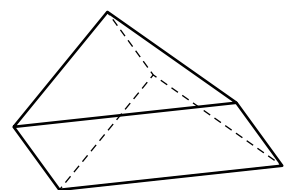
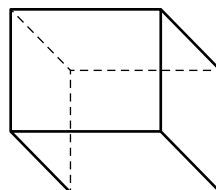
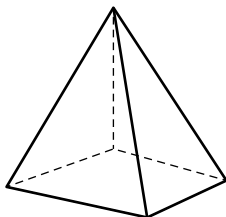


**Preview**  
Please log in to download  
the printable version of this worksheet.

- d.** 7 faces  
15 edges  
10 vertices



- e.** 5 faces  
9 edges  
6 vertices



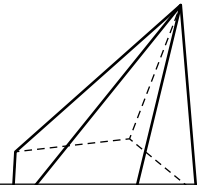
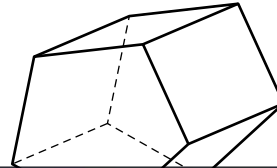
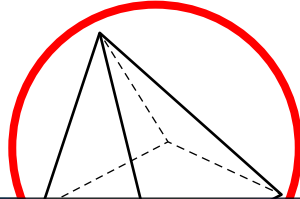
# ANSWER KEY

## Faces, Edges, and Vertices

Circle each 3D shape that matches the number of faces, edges, and vertices.

a. 5 faces

8 edges



# Preview

Please log in to download  
the printable version of this worksheet.



9 edges

6 vertices

