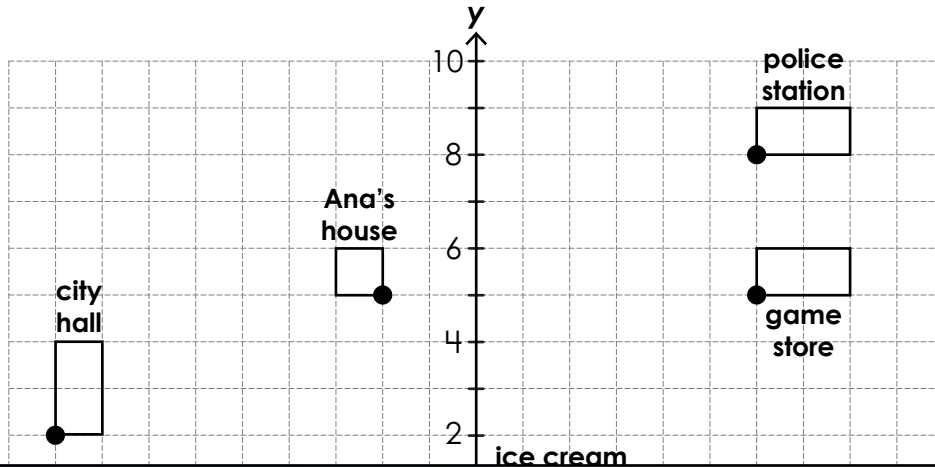


Name: _____

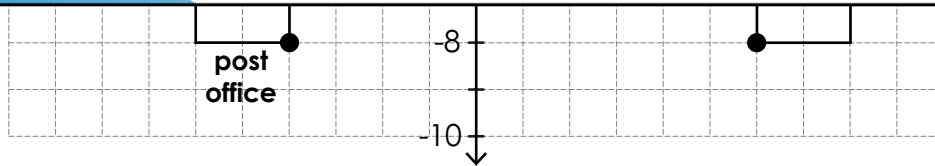
Coordinate Grid City Map

Ana drew places in her city on a rough coordinate grid. She plotted the buildings' main entrances as ordered pairs that can be used to identify them.



Preview

Please log in to download the printable version of this worksheet.



Give the coordinates of each building.

Ana's house _____ police station _____ post office _____

Which building is located at each coordinate?

(-9,-2) _____ (6,5) _____ (6,-8) _____

Which two buildings' coordinates are reflected across the y-axis?

Give the distance between the main entrances of the buildings in units.

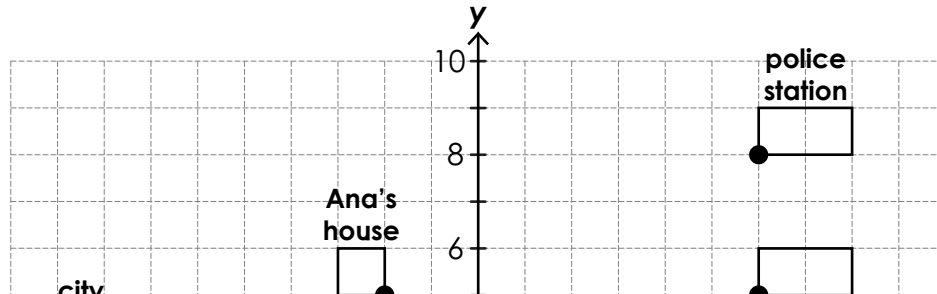
Ana's house & game store _____ game store & school _____

pizza place & City Hall _____ school & post office _____

ANSWER KEY

Coordinate Grid City Map

Ana drew places in her city on a rough coordinate grid. She plotted the buildings' main entrances as ordered pairs that can be used to identify them.



Preview

Please log in to download
the printable version of this worksheet.



Ana's house & game store **8 units**

game store & school **13 units**

pizza place & City Hall **4 units**

school & post office **10 units**