

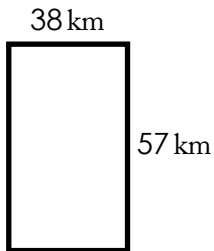
Name: _____

Perimeter

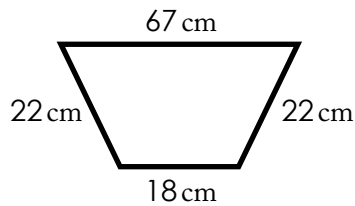
Perimeter is the distance around a polygon.

Find the perimeter of each polygon by adding the length of the sides.

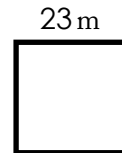
a. Rectangle



b. Trapezoid



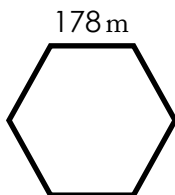
c. Square



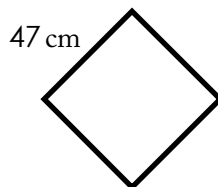
Preview

Please log in to download the printable version of this worksheet.

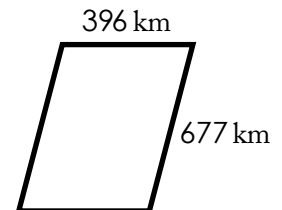
g. Hexagon (All sides are the same length)



h. Square / Diamond



i. Parallelogram



Bonus: Six of the shapes above are quadrilaterals. Do you know which ones they are? Shade in the six quadrilaterals.

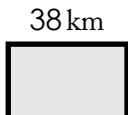
ANSWER KEY

Perimeter

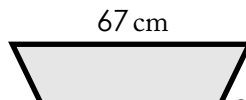
Perimeter is the distance around a polygon.

Find the perimeter of each polygon by adding the length of the sides.

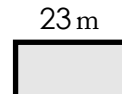
a. Rectangle



b. Trapezoid



c. Square



d.



g.

1,068 m

188 cm

2,146 km

Bonus: Six of the shapes above are quadrilaterals.

Do you know which ones they are? Shade in the six quadrilaterals.