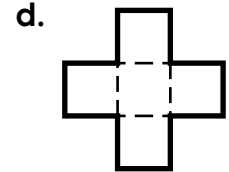
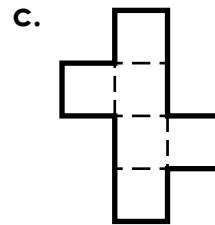
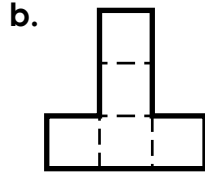
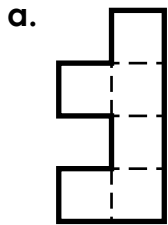


Name: _____

Nets

1. Which figure forms a net for a cube?


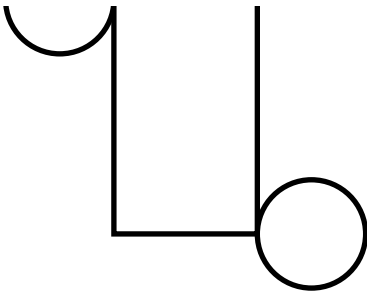


2. Which figure forms a net for a rectangular pyramid?

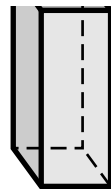


~ PREVIEW ~

Please log in or register to download the printable version of this worksheet.



sphere



rectangle
prism

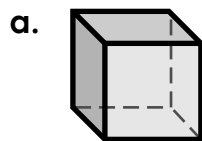
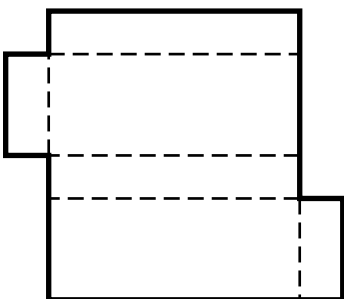


cone

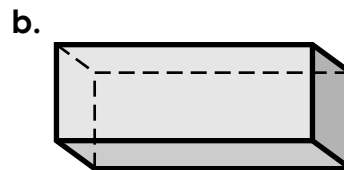


cylinder

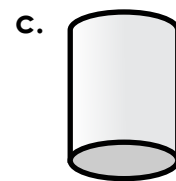
4. Which solid shape is made by the net pictured below?



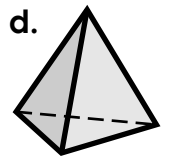
cube



rectangular
prism



cylinder



triangular
pyramid

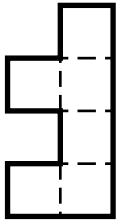
ANSWER KEY

Nets

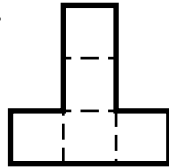
1. Which figure forms a net for a cube?



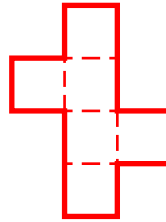
a.



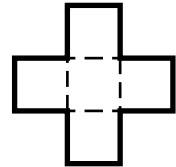
b.



c.



d.


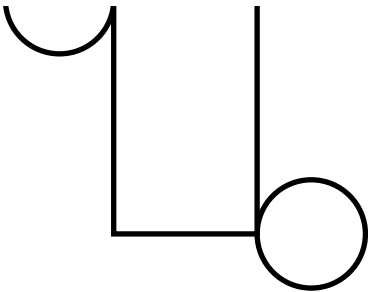


2. Which figure forms a net for a rectangular pyramid?

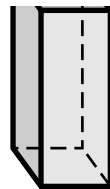


PREVIEW

Please log in or register to download the printable version of this worksheet.



sphere



rectangle
prism

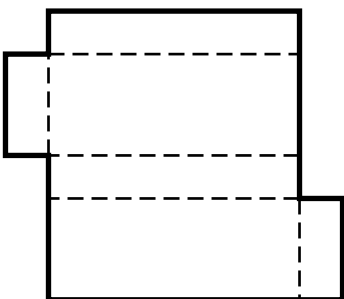


cone

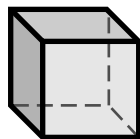


cylinder

4. Which solid shape is made by the net pictured below?




a.



cube

b.



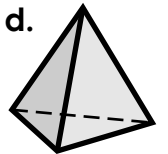
rectangular
prism

c.



cylinder

d.



triangular
pyramid