

Name: _____

Coordinate Grid Reflections

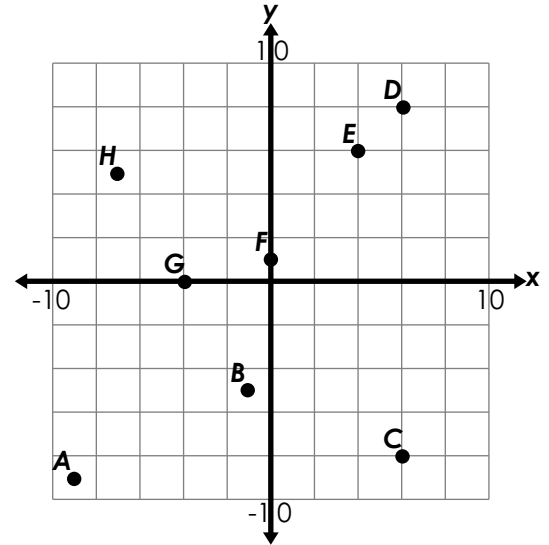
Give the coordinates for the following points.

1. A _____ 2. H _____

Tell which point is the reflection across the y-axis.

3. (-6, -8) _____ 4. (4, 0) _____

Tell which point is the reflection across the x-axis.



Preview

Please log in to download the printable version of this worksheet.

11. (12, -2) after reflection across the y-axis _____

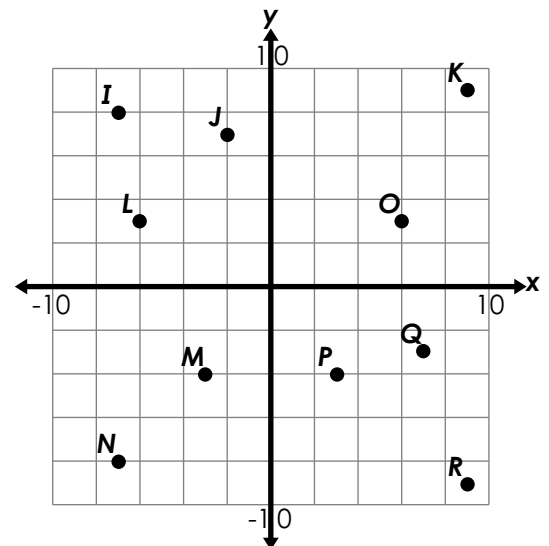
Give the coordinates for the following points, then circle the axis they are reflected across.

12. R _____ K _____ x y

13. M _____ P _____ x y

14. O _____ L _____ x y

15. N _____ I _____ x y



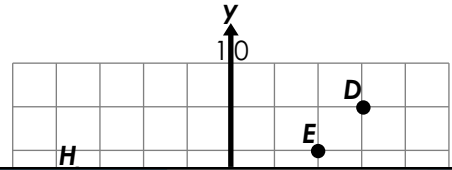
ANSWER KEY

Coordinate Grid Reflections

Give the coordinates for the following points.

1. A $(-9, -9)$

2. H $(-7, 5)$



Preview

Please log in to download the printable version of this worksheet.



13. M $(-3, -4)$

P $(3, -4)$

x y

14. O $(6, 3)$

L $(-6, 3)$

x y

15. N $(-7, -8)$

I $(-7, 8)$

x y

