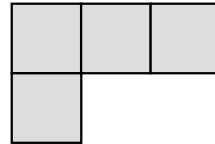


Name: _____


Area

Area is the number of **square units** that will fit inside a figure.


The area of this figure is **4 square units**.



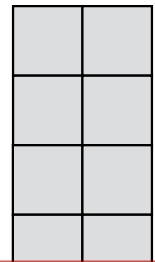
①



②



③




~ PREVIEW ~

Please log in or register to download the printable version of this worksheet.



Area = _____

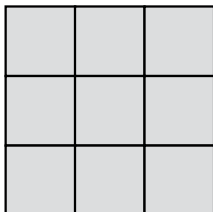


Area = _____



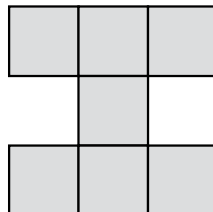
Area = _____

⑦



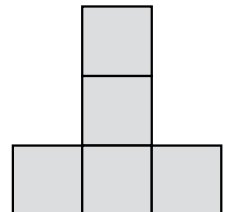
Area = _____

⑧



Area = _____

⑨



Area = _____

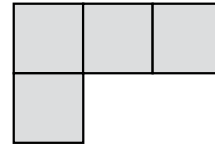
ANSWER KEY

Name: _____


Area

Area is the number of **square units** that will fit inside a figure.

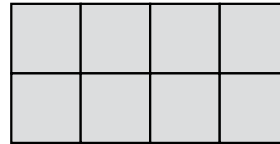
The area of this figure is **4 square units**.



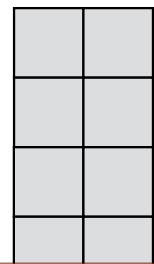
①



②



③




~ PREVIEW ~


Please log in or register to download the printable version of this worksheet.



Area = 7 square units

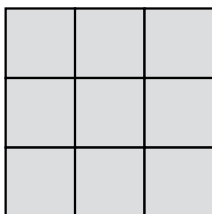


Area = 12 square units



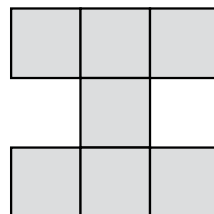
Area = 5 square units

⑦



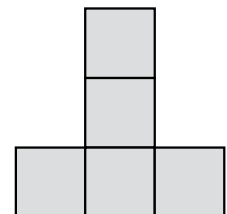
Area = 9 square units

⑧



Area = 7 square units

⑨



Area = 5 square units