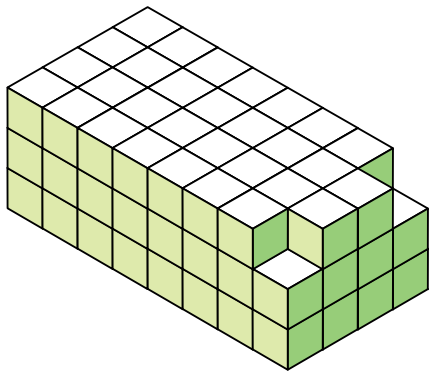


1.

Fractional Volume Cubes


How many whole and $\frac{1}{2}$ cubic units fit in the shape?



2.

Fractional Volume Cubes

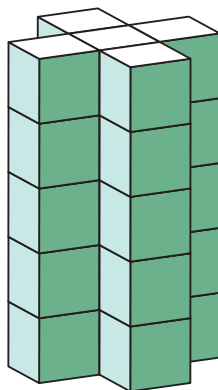
How many whole and $\frac{1}{4}$ cubic units fit in the shape?



Preview

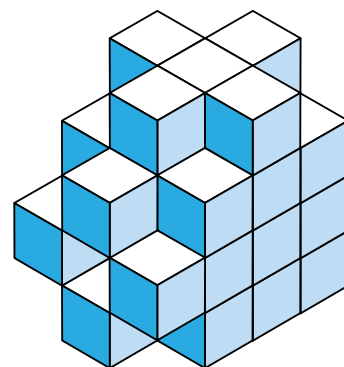
Please log in to download the printable version of this worksheet.

How many whole and $\frac{1}{5}$ cubic units fit in the shape?



Remember to calculate how many fractional cubic units fit inside a whole cubic unit.

How many whole and $\frac{1}{3}$ cubic units fit in the shape?




Remember to calculate how many fractional cubic units fit inside a whole cubic unit.

5.

Fractional Volume Cubes

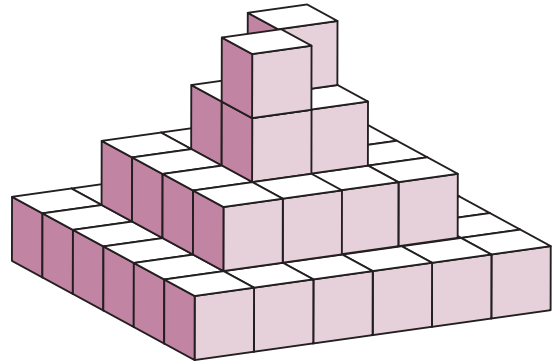
How many whole and $\frac{1}{7}$ cubic units fit in the shape?



6.

Fractional Volume Cubes

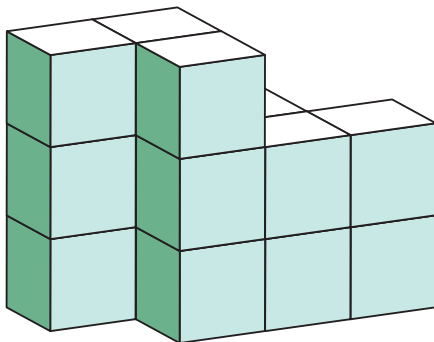
How many whole and $\frac{1}{8}$ cubic units fit in the shape?



Preview

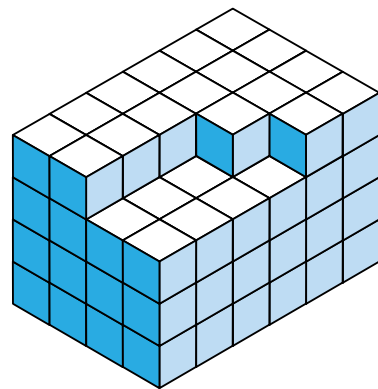
Please log in to download
the printable version of this worksheet.

How many whole and $\frac{1}{2}$ cubic units fit in the shape?



Remember to calculate how many fractional cubic units fit inside a whole cubic unit.

How many whole and $\frac{1}{4}$ cubic units fit in the shape?




Remember to calculate how many fractional cubic units fit inside a whole cubic unit.

9.

Fractional Volume Cubes


How many whole and $\frac{1}{2}$ cubic units fit in the shape?



10.

Fractional Volume Cubes

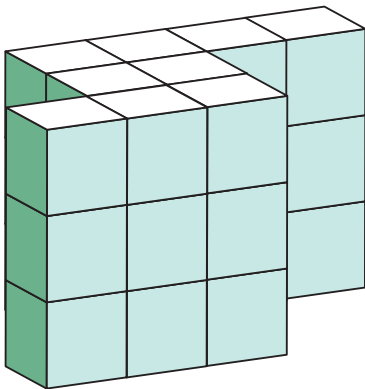
How many whole and $\frac{1}{5}$ cubic units fit in the shape?



Preview

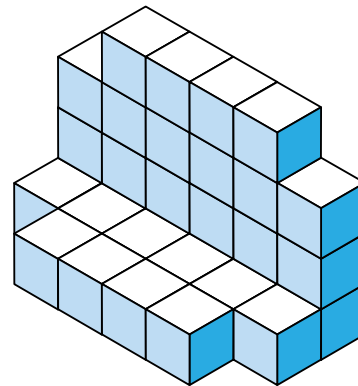
Please log in to download
the printable version of this worksheet.

How many whole and $\frac{1}{7}$ cubic units fit in the shape?



Remember to calculate how many fractional cubic units fit inside a whole cubic unit.

How many whole and $\frac{1}{3}$ cubic units fit in the shape?

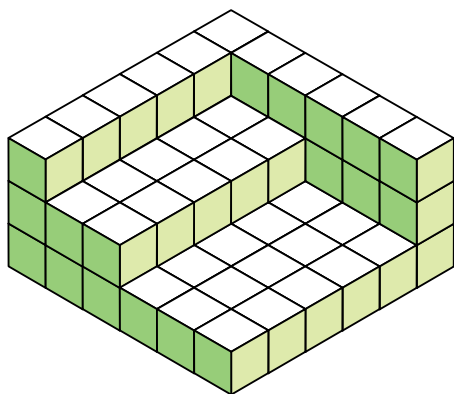


Remember to calculate how many fractional cubic units fit inside a whole cubic unit.

13.

Fractional Volume Cubes

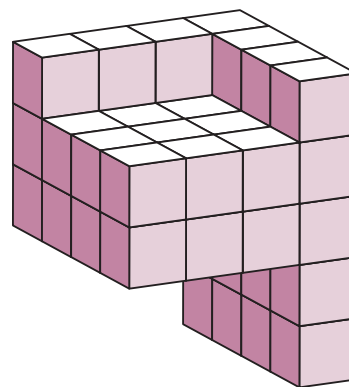
How many whole and $\frac{1}{6}$ cubic units fit in the shape?



14.

Fractional Volume Cubes

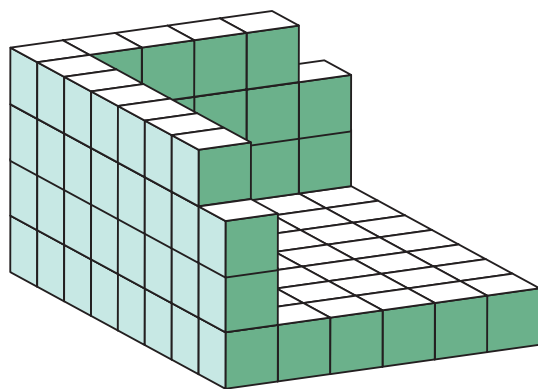
How many whole and $\frac{1}{4}$ cubic units fit in the shape?



Preview

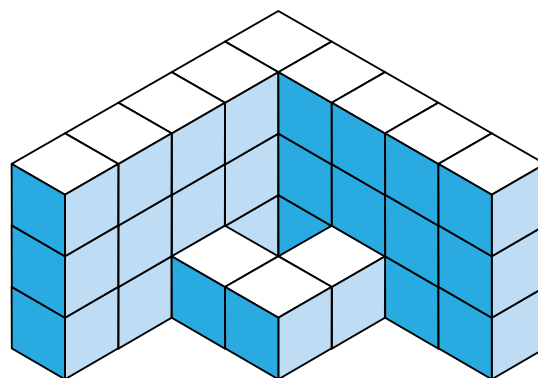
Please log in to download the printable version of this worksheet.

How many whole and $\frac{1}{2}$ cubic units fit in the shape?



Remember to calculate how many fractional cubic units fit inside a whole cubic unit.

How many whole and $\frac{1}{10}$ cubic units fit in the shape?




Remember to calculate how many fractional cubic units fit inside a whole cubic unit.

17.

Fractional Volume Cubes

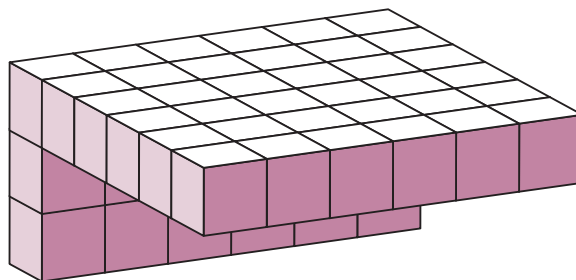
How many whole and $\frac{1}{4}$ cubic units fit in the shape?



18.

Fractional Volume Cubes

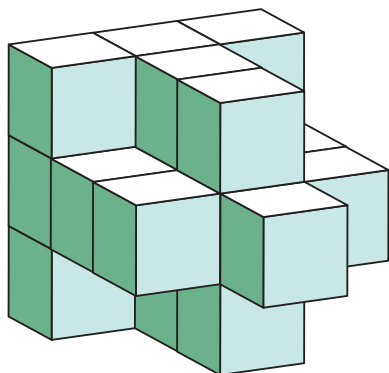
How many whole and $\frac{1}{5}$ cubic units fit in the shape?



Preview

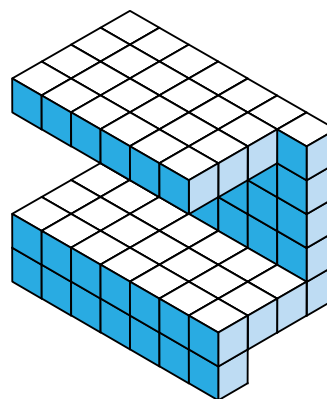
Please log in to download the printable version of this worksheet.

How many whole and $\frac{1}{2}$ cubic units fit in the shape?



Remember to calculate how many fractional cubic units fit inside a whole cubic unit.

How many whole and $\frac{1}{3}$ cubic units fit in the shape?




Remember to calculate how many fractional cubic units fit inside a whole cubic unit.

21.


Fractional Volume Cubes

How many whole and $\frac{1}{2}$ cubic units fit in the shape?

**22.**

Fractional Volume Cubes


How many whole and $\frac{1}{8}$ cubic units fit in the shape?



Preview

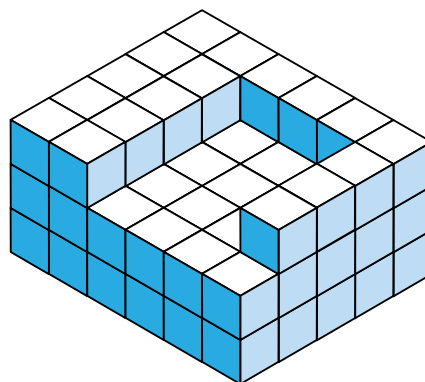
Please log in to download
the printable version of this worksheet.

How many whole and $\frac{1}{6}$ cubic units fit in the shape?



Remember to calculate how many fractional cubic units fit inside a whole cubic unit.

How many whole and $\frac{1}{3}$ cubic units fit in the shape?

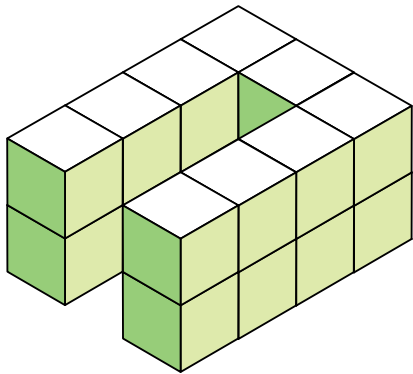


Remember to calculate how many fractional cubic units fit inside a whole cubic unit.

25.

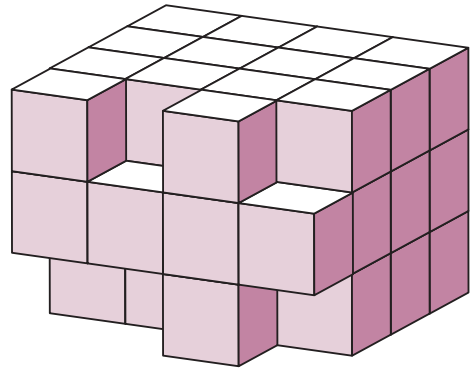
Fractional Volume Cubes

How many whole and $\frac{1}{2}$ cubic units fit in the shape?

**26.**

Fractional Volume Cubes


How many whole and $\frac{1}{5}$ cubic units fit in the shape?



Preview

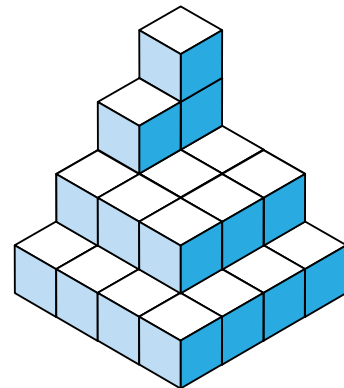
Please log in to download
the printable version of this worksheet.

How many whole and $\frac{1}{2}$ cubic units fit in the shape?



Remember to calculate how many fractional cubic units fit inside a whole cubic unit.

How many whole and $\frac{1}{10}$ cubic units fit in the shape?

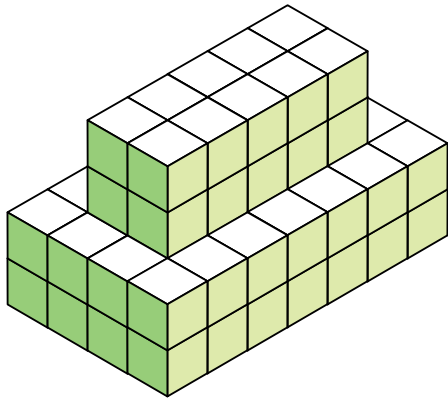


Remember to calculate how many fractional cubic units fit inside a whole cubic unit.

29.


Fractional Volume Cubes

How many whole and $\frac{1}{4}$ cubic units fit in the shape?

**30.**

Fractional Volume Cubes

How many whole and $\frac{1}{3}$ cubic units fit in the shape?



Preview

Please log in to download
the printable version of this worksheet.



Name: _____

Task Cards: Fractional Volume Cubes

1. _____ whole cubic units _____ $\frac{1}{2}$ cubic units

2. _____ whole cubic units _____ $\frac{1}{4}$ cubic units

3. _____ whole cubic units _____ $\frac{1}{5}$ cubic units

4. _____ whole cubic units _____ $\frac{1}{3}$ cubic units

5. _____ whole cubic units _____ 1 cubic unit



Preview

Please log in to download
the printable version of this worksheet.

9. _____ whole cubic units _____ $\frac{1}{2}$ cubic units

10. _____ whole cubic units _____ $\frac{1}{5}$ cubic units

11. _____ whole cubic units _____ $\frac{1}{7}$ cubic units

12. _____ whole cubic units _____ $\frac{1}{3}$ cubic units

13. _____ whole cubic units _____ $\frac{1}{6}$ cubic units

14. _____ whole cubic units _____ $\frac{1}{4}$ cubic units

15. _____ whole cubic units _____ $\frac{1}{2}$ cubic units

Name: _____

Task Cards: Fractional Volume Cubes

16. _____ whole cubic units _____ $\frac{1}{10}$ cubic units

17. _____ whole cubic units _____ $\frac{1}{4}$ cubic units

18. _____ whole cubic units _____ $\frac{1}{5}$ cubic units

19. _____ whole cubic units _____ $\frac{1}{2}$ cubic units

20. _____ whole cubic units _____ 1 cubic unit



Preview

Please log in to download
the printable version of this worksheet.

24. _____ whole cubic units _____ $\frac{1}{3}$ cubic units

25. _____ whole cubic units _____ $\frac{1}{9}$ cubic units

26. _____ whole cubic units _____ $\frac{1}{5}$ cubic units

27. _____ whole cubic units _____ $\frac{1}{2}$ cubic units

28. _____ whole cubic units _____ $\frac{1}{10}$ cubic units

29. _____ whole cubic units _____ $\frac{1}{4}$ cubic units

30. _____ whole cubic units _____ $\frac{1}{3}$ cubic units

ANSWER KEY

Task Cards: Fractional Volume Cubes

1. 94 whole cubic units 752 $\frac{1}{2}$ cubic units
2. 66 whole cubic units 4,224 $\frac{1}{4}$ cubic units



13. 88 whole cubic units 1,056 $\frac{1}{6}$ cubic units
14. 47 whole cubic units 3,008 $\frac{1}{4}$ cubic units
15. 85 whole cubic units 680 $\frac{1}{2}$ cubic units

ANSWER KEY

Task Cards: Fractional Volume Cubes

16. 30 whole cubic units 30,000 $\frac{1}{10}$ cubic units

17. 16 whole cubic units 1,024 $\frac{1}{4}$ cubic units

Preview

Please log in to download
the printable version of this worksheet.



28. 20 whole cubic units 20,000 $\frac{1}{10}$ cubic units

29. 76 whole cubic units 4,864 $\frac{1}{4}$ cubic units

30. 50 whole cubic units 1,350 $\frac{1}{3}$ cubic units