

Name: \_\_\_\_\_

# Drawing Angles

Use a protractor to draw an angle with the measurements shown.

$$\angle DEF = 50^\circ$$

$$\angle RST = 95^\circ$$

$$\angle LMN = 120^\circ$$



**~ PREVIEW ~**

Please log in or register to download the printable version of this worksheet.

$$\angle UVW = 15^\circ$$

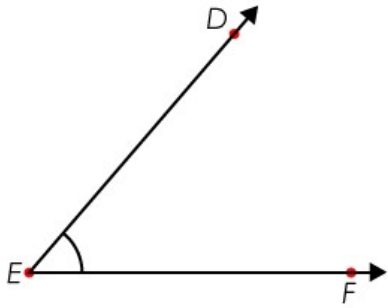
$$\angle GHI = 145^\circ$$

Name: \_\_\_\_\_

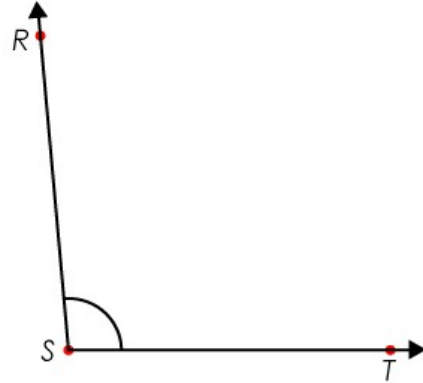
# Drawing Angles - **ANSWER KEY**

Use a protractor to draw an angle with the measurements shown..


$\angle DEF = 50^\circ$



$\angle RST = 95^\circ$



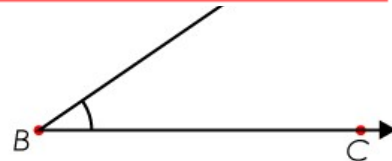
$\angle LMN = 120^\circ$



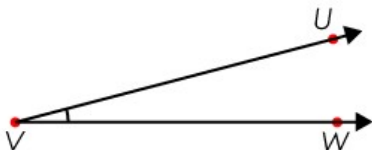


## ~ PREVIEW ~

Please log in or register to download the printable version of this worksheet.



$\angle UVW = 15^\circ$



$\angle GHI = 145^\circ$

