

Name: _____

Drawing Angles

Use a protractor to draw an angle with the measurements shown.

$$\angle DEF = 50^\circ$$

$$\angle RST = 95^\circ$$



Preview

Please log in to download
the printable version of this worksheet.

$$\angle UVW = 15^\circ$$

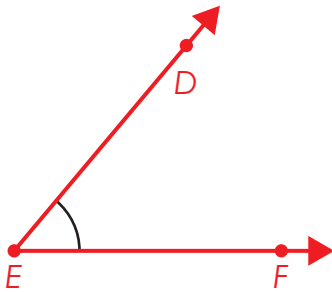
$$\angle GHI = 145^\circ$$

ANSWER KEY

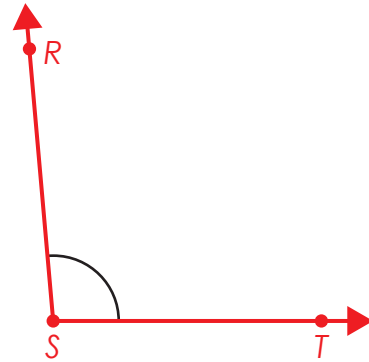
Drawing Angles

Use a protractor to draw an angle with the measurements shown.

$\angle DEF = 50^\circ$



$\angle RST = 95^\circ$




Preview

Please log in to download the printable version of this worksheet.



$\angle UVW = 15^\circ$



$\angle GHI = 145^\circ$

