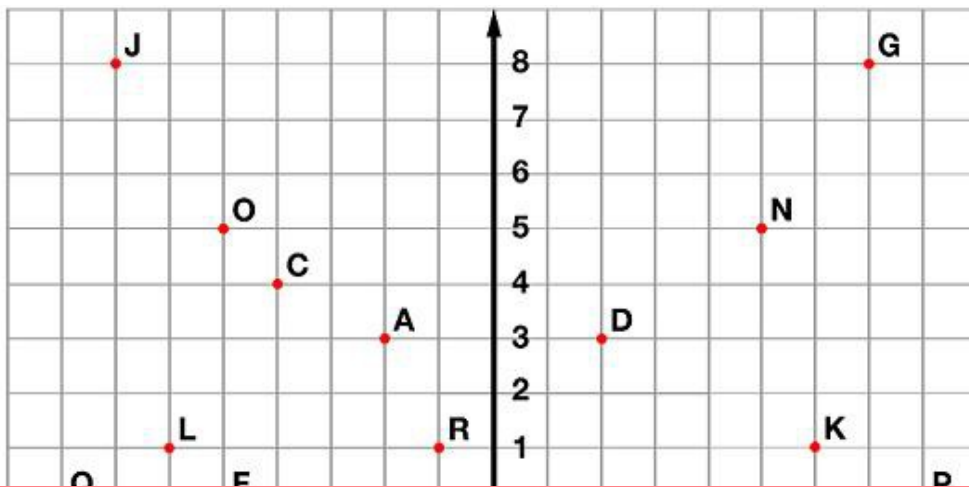
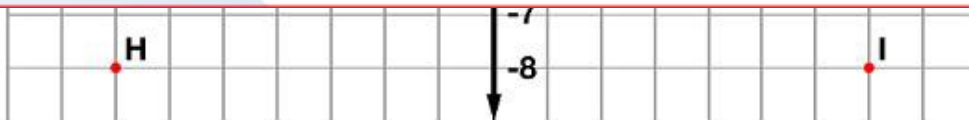


# Ordered Pairs



## Preview

Please log in to download  
the printable version of this worksheet.



Tell what point is located at each ordered pair.

- |                     |                    |                    |
|---------------------|--------------------|--------------------|
| 1. $(3, -2)$ _____  | 2. $(2, 3)$ _____  | 3. $(-5, 5)$ _____ |
| 4. $(-7, -8)$ _____ | 5. $(-4, 4)$ _____ | 6. $(-5, 0)$ _____ |

Write the ordered pair for each given point.

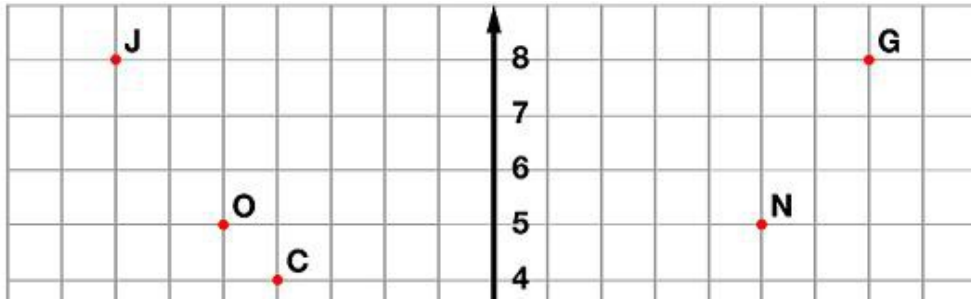
- |             |             |             |
|-------------|-------------|-------------|
| 7. E _____  | 8. M _____  | 9. P _____  |
| 10. G _____ | 11. Q _____ | 12. N _____ |

Plot the following points on the coordinate grid.

- |                  |                 |                |
|------------------|-----------------|----------------|
| 13. S $(-6, -3)$ | 14. T $(2, -4)$ | 15. U $(5, 8)$ |
|------------------|-----------------|----------------|

# ANSWER KEY

## Ordered Pairs



# Preview

Please log in to download  
the printable version of this worksheet.



Te  
1.  
4.  
W  
7.  
10

Plot the following points on the coordinate grid.

13. S (-6,-3)

14. T (2,-4)

15. U (5,8)