
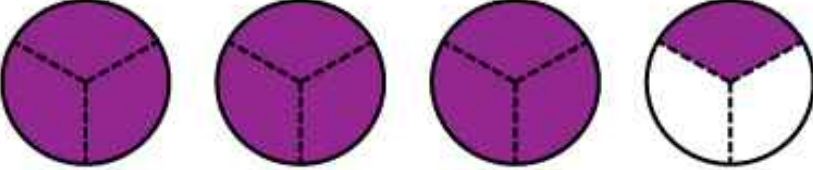


Name: \_\_\_\_\_

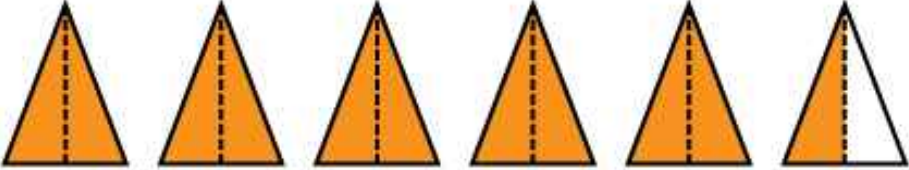
# Mixed Numbers

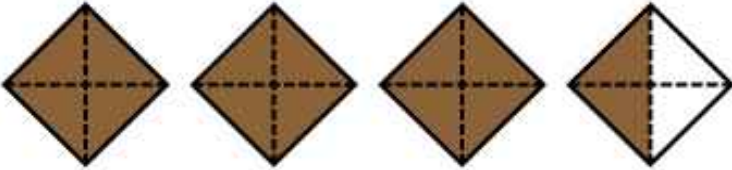
Write a mixed number to show what part of each illustration is shaded.


a.  \_\_\_\_\_

b.  \_\_\_\_\_

c.  \_\_\_\_\_

d.  \_\_\_\_\_

e.  \_\_\_\_\_

f.  \_\_\_\_\_

## **ANSWER KEY**

a. 2  $\frac{1}{4}$

b. 3  $\frac{1}{3}$

c. 4  $\frac{3}{5}$

d. 5  $\frac{1}{2}$

e. 3  $\frac{1}{2}$

f. 4  $\frac{4}{5}$