
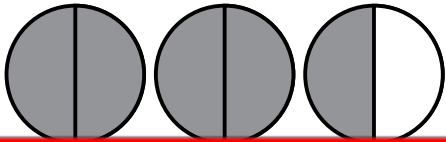


Name: _____


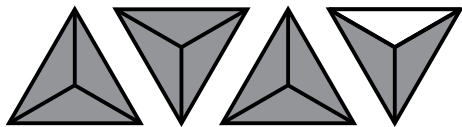
Mixed Numbers and Improper Fractions

Write the mixed number and improper fraction for the shaded area of each picture.



~ PREVIEW ~

Please log in or register to download the printable version of this worksheet.


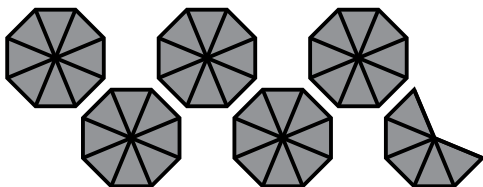


Mixed Number

Improper Fraction

Mixed Number

Improper Fraction



Mixed Number

Improper Fraction

Mixed Number

Improper Fraction

Writ



~ **PREVIEW** ~

Please log in or register to download
the printable version of this worksheet.