


Name: _____

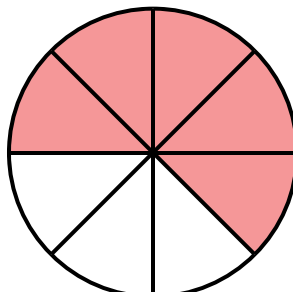
Fractions of Shapes

Tell what fraction of each shape is shaded.


a.



b.



c.



d.



e.

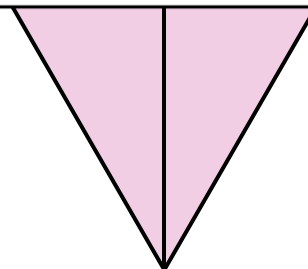
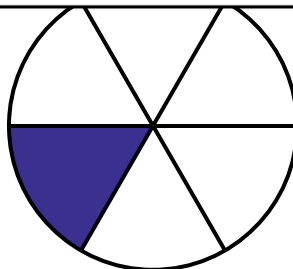
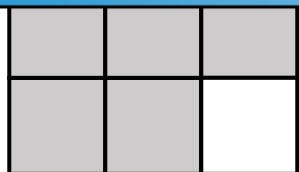


f.

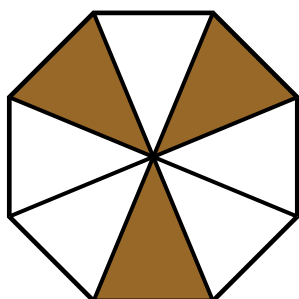


Preview

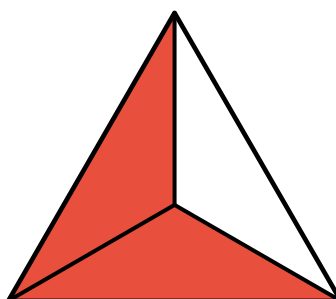
Please log in to download
the printable version of this worksheet.



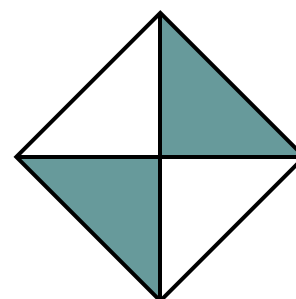
j.



k.



l.



ANSWER KEY

Fractions of Shapes

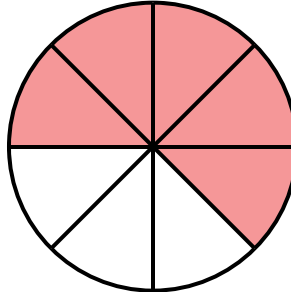
Tell what fraction of each shape is shaded.

a.




$$\frac{3}{4}$$

b.



$$\frac{5}{8}$$

c.



$$\frac{1}{4}$$

d.




$$\frac{5}{6}$$

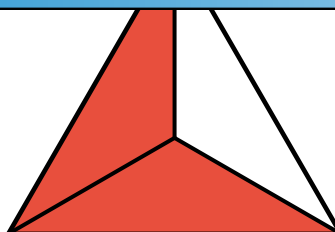
g.

$$\frac{2}{2}$$

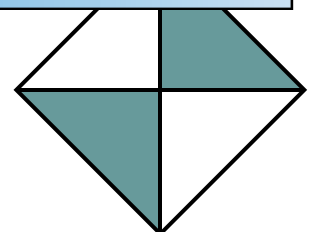
j.



$$\frac{3}{6}$$



$$\frac{2}{3}$$



$$\frac{2}{4}$$