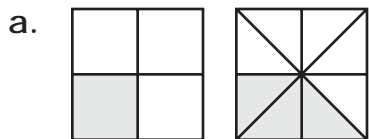


Name: _____

Comparing Fractions

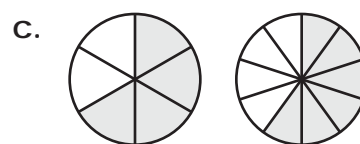
Fill in the circle with <, > or = for each pair of fractions.



$$\frac{1}{4} < \frac{3}{8}$$



$$\frac{4}{6} > \frac{2}{3}$$



$$\frac{4}{6} < \frac{6}{10}$$




$$\frac{2}{3} > \frac{1}{5}$$



$$\frac{3}{4} < \frac{7}{8}$$



$$\frac{3}{8} < \frac{4}{10}$$

g.  **PREVIEW** Please log in or register to download the printable version of this worksheet. $\frac{5}{8} < \frac{1}{2}$



$$\frac{1}{2} < \frac{2}{3}$$



$$\frac{6}{8} > \frac{3}{4}$$



$$\frac{4}{5} < \frac{4}{6}$$



$$\frac{4}{8} = \frac{2}{4}$$



$$\frac{1}{3} < \frac{3}{10}$$

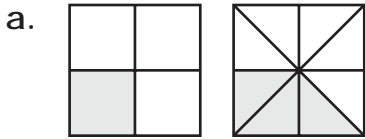


$$\frac{8}{10} < \frac{5}{6}$$

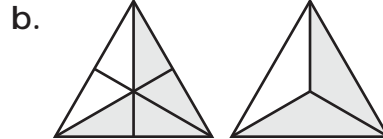
ANSWER KEY

Comparing Fractions

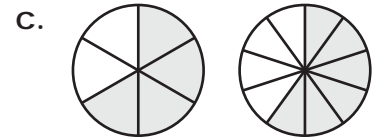
Fill in the circle with $<$, $>$ or $=$ for each pair of fractions.



$$\frac{1}{4} < \frac{3}{8}$$



$$\frac{4}{6} = \frac{2}{3}$$



$$\frac{4}{6} > \frac{6}{10}$$

d. $\frac{2}{3} > \frac{1}{5}$

e. $\frac{3}{4} < \frac{7}{8}$

f. $\frac{3}{8} < \frac{4}{10}$

g. $\frac{5}{8} < \frac{1}{2}$



PREVIEW

Please log in or register to download the printable version of this worksheet.

j. $\frac{1}{2} < \frac{2}{3}$

k. $\frac{6}{8} = \frac{3}{4}$

l. $\frac{4}{5} > \frac{4}{6}$

m. $\frac{4}{8} = \frac{2}{4}$

n. $\frac{1}{3} > \frac{3}{10}$

o. $\frac{8}{10} < \frac{5}{6}$