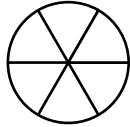
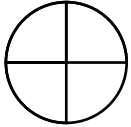


Name: _____

Comparing Fractions

a. Color and compare.



$$\frac{3}{4}$$



$$\frac{5}{6}$$

b. Write any fraction that is less than $\frac{1}{8}$.

answer: _____

c. Olivia and Hudson each have an apple. Olivia cuts hers into halves and eats one piece. Hudson cuts

d. Color and compare.

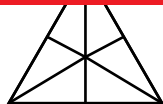
$$\frac{1}{2}$$

$$\frac{1}{2}$$



Preview

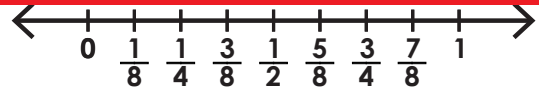
Please log in to download the printable version of this worksheet.



$$\frac{2}{3}$$



$$\frac{4}{6}$$



$$\frac{3}{4}$$



$$\frac{3}{8}$$

g. Sal and Jen ordered pizzas that were the same size. Sal ate $\frac{3}{8}$ of his pizza. Jen ate $\frac{1}{4}$ of her pizza. Who ate more pizza?

answer: _____

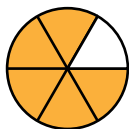
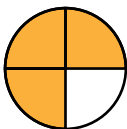
i. Write any fraction that is greater than $\frac{1}{2}$.

answer: _____

ANSWER KEY

Comparing Fractions

a. Color and compare.



$$\frac{3}{4}$$



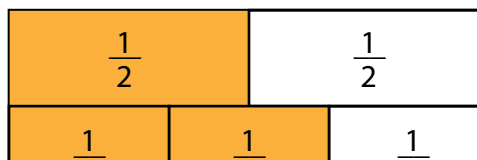
$$\frac{5}{6}$$

b. Write any fraction that is less than $\frac{1}{8}$.

answer: Answers may vary.

c. Olivia and Hudson each have an apple. Olivia cuts hers into halves and eats one piece. Hudson cuts his into quarters and eats two pieces. Who ate more of their

d. Color and compare.



Preview

Please log in to download the printable version of this worksheet.

