


Name: _____

Producers and Consumers

A **producer** is a living thing that makes its own food from sunlight, air, and soil. Green plants are producers who make food in their leaves.

A **consumer** is a living thing that cannot make its own food. Consumers get their energy by eating food. All animals are consumers.



Tell whether each living thing below is a *producer* or *consumer*.

a. pine tree - _____

b. eagle - _____

c. chipmunk - _____

d. wasp - _____

e. grass - _____

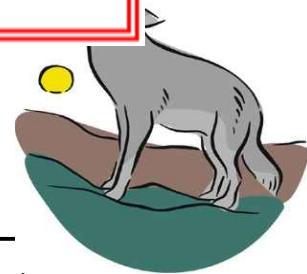
g. cow - _____



A **herbivore** is a consumer that eats only plants.

A **carnivore** is a consumer that eats only animals.

An **omnivore** is a consumer that eats both plants and animals.



Tell whether each consumer listed below is a *carnivore*, *herbivore*, or *omnivore*.

i. bear - _____

j. bison - _____

k. wolf - _____

l. human - _____

m. beaver - _____

n. tiger - _____

o. horse - _____

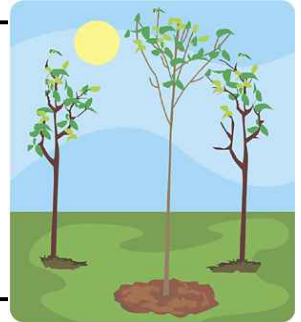
p. raccoon - _____

Name: _____

Producers and Consumers

A **producer** is a living thing that makes its own food from sunlight, air, and soil. Green plants are producers who make food in their leaves.

A **consumer** is a living thing that cannot make its own food. Consumers get their energy by eating food. All animals are consumers.



Tell whether each living thing below is a *producer* or *consumer*.

a. pine tree - **producer**

b. eagle - **consumer**

c. chipmunk - **consumer**

d. wasp - **consumer**

e. grass -

g. cow -



A **herbivore** is a consumer that eats only plants.

A **carnivore** is a consumer that eats only animals.

An **omnivore** is a consumer that eats both plants and animals.



Tell whether each consumer listed below is a *carnivore*, *herbivore*, or *omnivore*.

i. bear - **omnivore**

j. bison - **herbivore**

k. wolf - **carnivore**

l. human - **omnivore**

m. beaver - **herbivore**

n. tiger - **carnivore**

o. horse - **herbivore**

p. raccoon - **omnivore**