

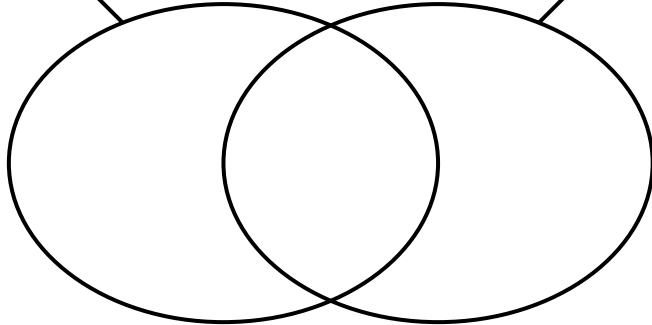
Name: _____

Factors on Venns

Place the numbers in the correct positions on the Venn diagrams.

Factors of 21

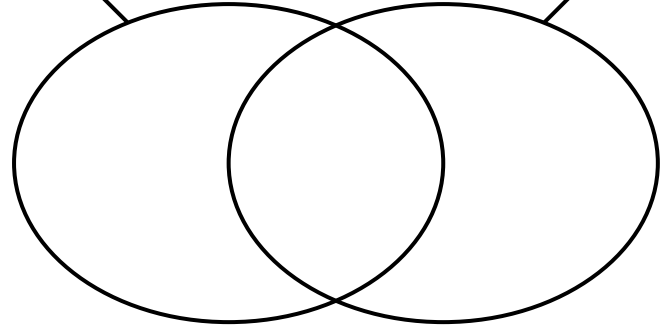
Factors of 24



1 2 3 4 6

Factors of 16

Factors of 20



1 2 4 5



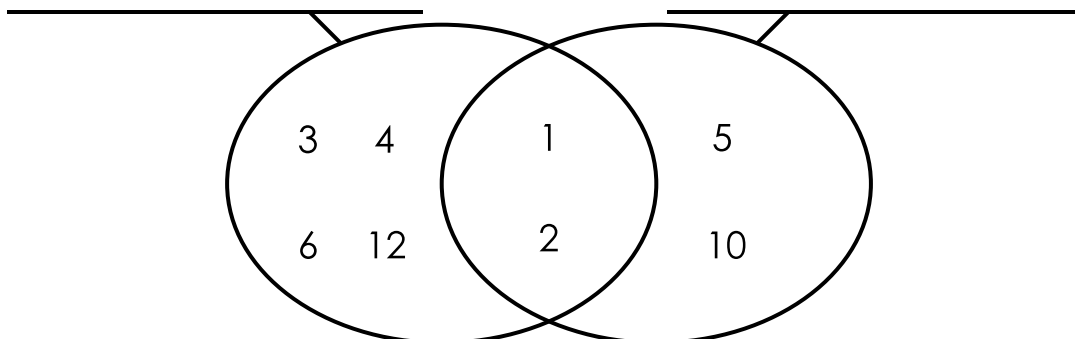
Preview

Please log in to download
the printable version of this worksheet.

1 3 7 21 49

1 2 3 5
6 9 15 18

Write labels for the right and left sections of the Venn diagram.



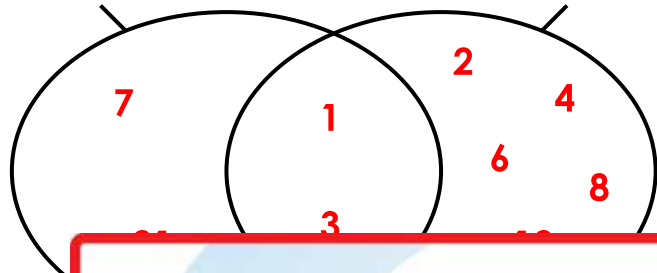
ANSWER KEY

Factors on Venns

Place the numbers in the correct positions on the Venn diagrams.

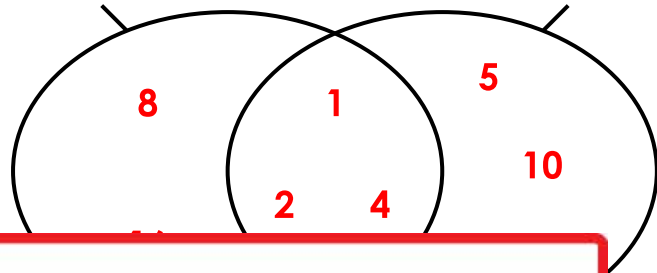
Factors of 21

Factors of 24



Factors of 16

Factors of 20



Preview

Please log in to download the printable version of this worksheet.

