


Your name: _____

Elapsed Time

Nearest Minute




Complete the table by filling in the elapsed times.

Start Time	End Time	Elapsed Time
6:00 A.M.	7:55 A.M.	1 hour and 55 minutes
1:00 P.M.	3:44 P.M.	
 ~ PREVIEW ~ Please log in or register to download the printable version of this worksheet.		
4:35 A.M.	11:25 A.M.	
2:04 P.M.	2:55 P.M.	
5:25 A.M.	6:20 A.M.	
Midnight	2:35 A.M.	
2:58 P.M.	4:37 P.M.	


ANSWER KEY

Elapsed Time

Nearest Minute



Complete the table by filling in the elapsed times.

Start Time	End Time	Elapsed Time	
6:00 A.M.	7:55 A.M.	1 hour and 55 minutes	
1:00 P.M.	3:44 P.M.	<u>2 hours and 44 minutes</u>	
			<u>notes</u>
			<u>notes</u>
4:35 A.M.	11:25 A.M.	<u>6 hours and 50 minutes</u>	
2:04 P.M.	2:55 P.M.	<u>51 minutes</u>	
5:25 A.M.	6:20 A.M.	<u>55 minutes</u>	
Midnight	2:35 A.M.	<u>2 hours and 35 minutes</u>	
2:58 P.M.	4:37 P.M.	<u>1 hour and 39 minutes</u>	