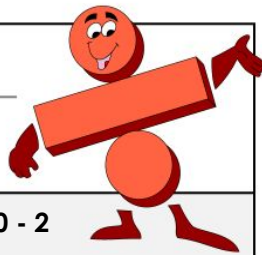


Name: _____

Date: _____



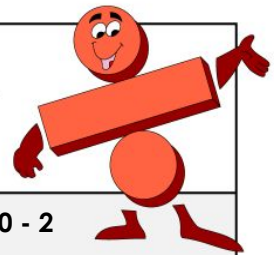
Level: A

Skill: 0 - 2

- | | |
|-------------------------|-------------------------|
| 1. $18 \div 2 =$ _____ | 26. $0 \div 9 =$ _____ |
| 2. $7 \div 1 =$ _____ | 27. $2 \div 1 =$ _____ |
| 3. $0 \div 4 =$ _____ | 28. $22 \div 2 =$ _____ |
| 4. $8 \div 2 =$ _____ | 29. $12 \div 2 =$ _____ |
| 5. $6 \div 1 =$ _____ | 30. $0 \div 3 =$ _____ |
| 6. $4 \div 2 =$ _____ | 31. $5 \div 1 =$ _____ |
| 7. $0 \div 1 =$ _____ | 32. $0 \div 1 =$ _____ |
| 8. $20 \div 2 =$ _____ | 33. $0 \div 4 =$ _____ |
| 9. $12 \div 1 =$ _____ | 34. $10 \div 2 =$ _____ |
| 10. $0 \div 1 =$ _____ | 35. $24 \div 2 =$ _____ |
| 11. $22 \div 2 =$ _____ | 36. $6 \div 1 =$ _____ |
| 12. $3 \div 1 =$ _____ | 37. $0 \div 8 =$ _____ |
| 13. $0 \div 2 =$ _____ | 38. $8 \div 2 =$ _____ |

Name: _____

Date: _____



Level: A

Skill: 0 - 2

- | | |
|-------------------------|-------------------------|
| 1. $18 \div 2 =$ _____ | 26. $0 \div 9 =$ _____ |
| 2. $7 \div 1 =$ _____ | 27. $2 \div 1 =$ _____ |
| 3. $0 \div 4 =$ _____ | 28. $22 \div 2 =$ _____ |
| 4. $8 \div 2 =$ _____ | 29. $12 \div 2 =$ _____ |
| 5. $6 \div 1 =$ _____ | 30. $0 \div 3 =$ _____ |
| 6. $4 \div 2 =$ _____ | 31. $5 \div 1 =$ _____ |
| 7. $0 \div 1 =$ _____ | 32. $0 \div 1 =$ _____ |
| 8. $20 \div 2 =$ _____ | 33. $0 \div 4 =$ _____ |
| 9. $12 \div 1 =$ _____ | 34. $10 \div 2 =$ _____ |
| 10. $0 \div 1 =$ _____ | 35. $24 \div 2 =$ _____ |
| 11. $22 \div 2 =$ _____ | 36. $6 \div 1 =$ _____ |
| 12. $3 \div 1 =$ _____ | 37. $0 \div 8 =$ _____ |
| 13. $0 \div 2 =$ _____ | 38. $8 \div 2 =$ _____ |



~ PREVIEW ~

Please log in or register to download the printable version of this worksheet.

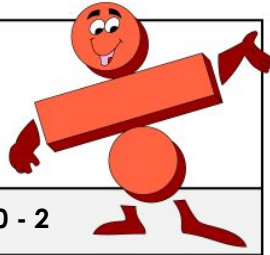
- | | |
|-------------------------|-------------------------|
| 20. $1 \div 1 =$ _____ | 45. $0 \div 1 =$ _____ |
| 21. $0 \div 4 =$ _____ | 46. $0 \div 10 =$ _____ |
| 22. $0 \div 11 =$ _____ | 47. $4 \div 2 =$ _____ |
| 23. $10 \div 2 =$ _____ | 48. $3 \div 1 =$ _____ |
| 24. $2 \div 1 =$ _____ | 49. $12 \div 2 =$ _____ |
| 25. $0 \div 2 =$ _____ | 50. $14 \div 2 =$ _____ |

Time: _____ Score: _____

- | | |
|-------------------------|-------------------------|
| 20. $1 \div 1 =$ _____ | 45. $0 \div 1 =$ _____ |
| 21. $0 \div 4 =$ _____ | 46. $0 \div 10 =$ _____ |
| 22. $0 \div 11 =$ _____ | 47. $4 \div 2 =$ _____ |
| 23. $10 \div 2 =$ _____ | 48. $3 \div 1 =$ _____ |
| 24. $2 \div 1 =$ _____ | 49. $12 \div 2 =$ _____ |
| 25. $0 \div 2 =$ _____ | 50. $14 \div 2 =$ _____ |

Time: _____ Score: _____

ANSWER KEY



Level: A

Skill: 0 - 2

1. $18 \div 2 = 9$

26. $0 \div 9 = 0$



~ PREVIEW ~

Please log in or register to download
the printable version of this worksheet.