

Division with Arrays

Write a division fact shown by each array.

example

○ ○ ○ ○ ○
 ○ ○ ○ ○ ○
 ○ ○ ○ ○ ○

$15 \div 3 = 5$

$15 \div 5 = 3$

a. ● ● ● ●
 ● ● ● ●
 ● ● ● ●

÷ =

b. ★ ★
 ★ ★
 ★ ★
 ★ ★

÷ =



___ ÷ ___ = ___

___ ÷ ___ = ___

___ ÷ ___ = ___

f. X X X X X X X X X X
 X X X X X X X X X X
 X X X X X X X X X X
 X X X X X X X X X X

g. □ □ □ □ □ □ □ □
 □ □ □ □ □ □ □ □
 □ □ □ □ □ □ □ □
 □ □ □ □ □ □ □ □

h. ♥ ♥ ♥ ♥
 ♥ ♥ ♥ ♥
 ♥ ♥ ♥ ♥
 ♥ ♥ ♥ ♥
 ♥ ♥ ♥ ♥
 ♥ ♥ ♥ ♥

___ ÷ ___ = ___


___ ÷ ___ = ___

___ ÷ ___ = ___

Division with Arrays


Write a division fact shown by each array.

example



$$\underline{15 \div 3 = 5}$$

$$\underline{15 \div 5 = 3}$$



$$12 \div 3 = 4 \text{ or}$$

$$12 \div 4 = 3$$



$$8 \div 2 = 4 \text{ or}$$

$$8 \div 4 = 2$$




Preview

Please log in to download the printable version of this worksheet.

$$\underline{24 \div 8 = 3}$$


$$\underline{9 \div 3 = 3}$$

$$\underline{5 \div 5 = 1}$$




$$36 \div 4 = 9 \text{ or}$$

$$36 \div 9 = 4$$



$$28 \div 4 = 7 \text{ or}$$

$$28 \div 7 = 4$$



$$24 \div 4 = 6 \text{ or}$$

$$24 \div 6 = 4$$