

Name: \_\_\_\_\_

**D-31**

Operations

**Multi-Step**

## Daily Word Problem

Sycamore Elementary School has 2 parking lots- one in front of the school and one in the back.

The front lot has 34 parking spaces. The back lot has three times as many spaces as the front lot.


What is the total number of parking spaces at Sycamore



# Preview

Please log in to download  
the printable version of this worksheet.

answer: \_\_\_\_\_



Name: \_\_\_\_\_

**D-32**

Operations with  
Fractions

**Multi-  
Step**

## Daily Word Problem

Kat walked  $\frac{3}{4}$  of a mile each day for 3 days.

What is the total distance she walked over the three days?


Show your work.

Write your answer as a mixed number.



# Preview

Please log in to download  
the printable version of this worksheet.



answer: \_\_\_\_\_

Name: \_\_\_\_\_

**D-33**

Operations with  
Money

**Multi-  
Step**

## Daily Word Problem

Nadia sells earthworms to fishermen.  
She charges 75 cents for a dozen worms.  
Yesterday she sold 48 worms.  
How much money did she make?


*Show your work.*



# Preview

Please log in to download  
the printable version of this worksheet.

answer: \_\_\_\_\_



Name: \_\_\_\_\_

**D-34**

Perimeter

Multi-  
Step

## Daily Word Problem

Delilah is going to install wooden baseboard around a rectangular bedroom.


The length of the bedroom is 24 feet. The width is one-half the length.

How many feet of baseboard does Delilah need?



# Preview

Please log in to download  
the printable version of this worksheet.



answer: \_\_\_\_\_

Name: \_\_\_\_\_

## Daily Word Problem

Rosalie has 112 donut holes and 4 boxes.  
She places an equal number of donut holes into each box.  
How many donut holes are in each box?

Show your work.



# Preview

Please log in to download  
the printable version of this worksheet.



answer: \_\_\_\_\_

Daily Word Problem

# Preview

Please log in to download  
the printable version of this worksheet.

