


Name: _____

Daily Word Problem

Mrs. Simpson asked each of her students to vote for their favorite sport. The graph below shows how students voted.

Favorite Sport	
Sport	Number of Votes
Soccer	




Preview

Please log in to download
the printable version of this worksheet.

On the day of this survey, five students were absent from class. The pictograph shows only the votes of the other students. How many students are in the class?

Show your work.

answer: _____



Name: _____

Daily Word Problem


Elijah works at a zoo. He has 4 pails of fish, with 4 fish in each pail. He feeds 9 fish to the seals. How many fish does he have left?

Show your work.



Preview

Please log in to download the printable version of this worksheet.



answer: _____

Name: _____

Daily Word Problem

This weekend, Harper played her violin for 85 minutes.

On Saturday, she played for 38 minutes.


How many minutes did she play her violin on Sunday?

Show your work.



Preview

Please log in to download
the printable version of this worksheet.



answer: _____

Name: _____

Daily Word Problem


Kay was on the 30th floor of a very tall building.
She went down 13 floors.
Then she went up 5 floors.
What floor was she on?

Show your work.



Preview

Please log in to download
the printable version of this worksheet.



answer: _____

Name: _____

C-30

Repeated Addition
(Basic Multiplication)

**Multi-
Step**

Daily Word Problem

Lionel has 2 dogs. Every day, he gives 3 biscuits to each dog. How many biscuits will he give his dogs on Monday, Tuesday, and Wednesday?

Show your work.



Preview





Please log in to download
the printable version of this worksheet.




answer: _____

Daily Word Problem

Mrs. Simpson asked each of her students to vote for their favorite sport. The graph below shows how students voted.

Favorite Sport	
Sport	Number of Votes
Soccer	
Football	
Baseball	
Hockey	

Key: Each  = 2 students

On the day of this survey, five students were absent from class. The pictograph shows only the votes of the other students. How many students are in the class?

Show your work.

$$13 \times 2 = 26$$

$$26 + 5 = 31$$



Elijah works at a zoo. He has 4 pails of fish, with 4 fish in each pail. He feeds 9 fish to the seals. How many fish does he have left?

Show your work.

$$4 + 4 + 4 + 4 = 16$$

or

$$4 \times 4 = 16$$

$$16 - 9 = 7$$




This weekend, Harper played her violin for 85 minutes. On Saturday, she played for 38 minutes.

How many minutes did she play her violin on Sunday?


Show your work.

$$85 - 38 = 47$$



Preview

Please log in to download the printable version of this worksheet.



answer: 22nd floor

$$6 + 6 + 6 = 18$$

or

$$6 \times 3 = 18$$

answer: 18 biscuits

