

Name: _____

B-26

Addition & Subtraction;
Extra Information

**Single-
Step**

Daily Word Problem


Miss Francis has 20 hens and 4 roosters. Yesterday the hens laid 16 brown eggs and 7 white eggs. How many more brown eggs than white eggs did her hens lay?

Show your work.



Preview

Please log in to download
the printable version of this worksheet.



answer: _____

Name: _____

B-27

Addition &
Subtraction

**Multi-
Step**

Daily Word Problem

Danny and Lola each have a bag of jelly beans.

Danny has 9 jelly beans.

Lola has 4 more jelly beans than Danny.

How many jelly beans do they have altogether?


Show your work.



Preview

Please log in to download
the printable version of this worksheet.

answer: _____



Name: _____

Daily Word Problem

Lucía has a bowl filled with green and red grapes.
There are 15 grapes in the bowl.

7 of them are green grapes.


How many grapes are red grapes?

Show your work.



Preview

Please log in to download
the printable version of this worksheet.



answer: _____

Name: _____

B-29

Addition &
Subtraction

**Multi-
Step**

Daily Word Problem

There were 18 dogs in the park.

10 were brown.

3 were white.

The rest were black.

How many dogs were black?


Show your work



Preview

Please log in to download
the printable version of this worksheet.

answer: _____



Name: _____

B-30

Repeated Addition;
Basic Multiplication

**Multi-
Step**

Daily Word Problem

Mrs. Jung has 5 boxes of markers.

Each box has 6 markers in it.

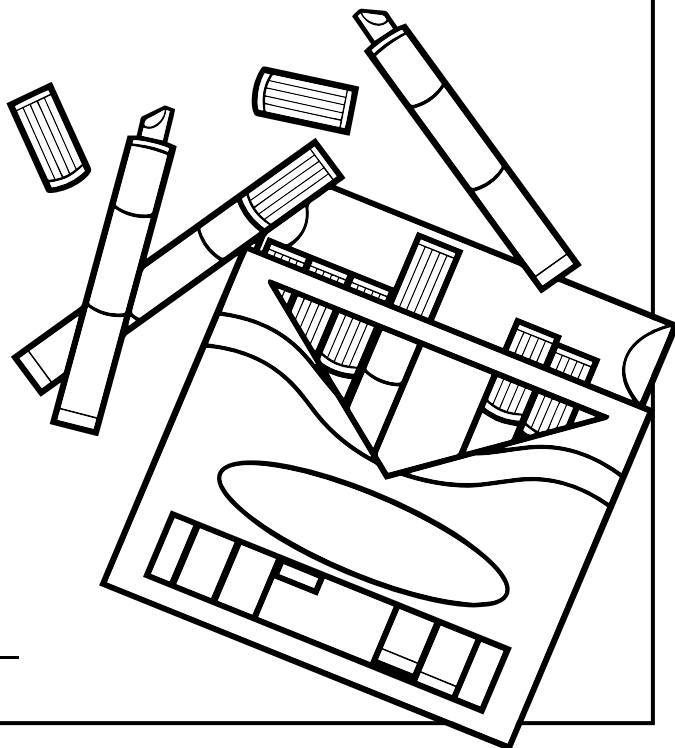
How many markers does Mrs. Jung have in all?

Show your work.



Preview

Please log in to download
the printable version of this worksheet.



answer: _____

Daily Word Problem

Miss Francis has 20 hens and 4 roosters. Yesterday the hens laid 16 brown eggs and 7 white eggs. How many more brown eggs than white eggs did her hens lay?

Show your work.

$$16 - 7 = 9$$



Danny and Lola each have a bag of jelly beans. Danny has 9 jelly beans. Lola has 4 more jelly beans than Danny. How many jelly beans do they have altogether?

Show your work.

$$9 + 4 = 13$$

$$13 + 9 = 22$$



Lucia has a bowl filled with green and red grapes. There are 15 grapes in the bowl. 7 of them are green grapes. How many grapes are red grapes?

Show your work.

$$15 - 7 = 8$$




Preview

Please log in to download the printable version of this worksheet.

$$18 - 13 = 5$$

answer: 5 black dogs



answer: 30 markers

