

Name: _____

B-146

Reading &
Interpreting a Graph

Single-
Step

Daily Word Problem

The graph below shows the pets that students in Mrs. Garcia's class have.




Preview

Please log in to download
the printable version of this worksheet.

How many students have
fish or birds for their pets?

Show your work.



Name: _____

B-147

Adding & Subtracting
3-Digit Numbers

Single-
Step

Daily Word Problem

Kamal went to a football game and a soccer game last week.

There were 934 people at the football game.

There were 753 people at the soccer game.


How many more people were at the football

game than the soccer game?



Preview

Please log in to download
the printable version of this worksheet.



answer: _____

Name: _____

Daily Word Problem

It is 3:35 p.m.

Akira has to go to piano lessons at 4:00 p.m.

She wants to watch a T.V. show that is 30 minutes long.

How much time does

Akira have? _____



Preview

Please log in to download
the printable version of this worksheet.



Name: _____

B-149

Operations with
Money

**Multi-
Step**

Daily Word Problem

Mimi has \$175.

She buys a tablet for \$145 and headphones for \$23.

Does she have enough money to also buy a case that costs \$15?

How much do the tablet and



Preview

Please log in to download
the printable version of this worksheet.



Name: _____

B-150

Repeated Addition
or Multiplication

**Multi-
Step**

Daily Word Problem


The Tigers basketball team won their game.
4 players each scored a 3-point shot.
5 players each scored a 2-point shot.
3 players each scored a 1-point free throw.
How many points did the Tigers score total?



Preview

Please log in to download
the printable version of this worksheet.

answer: _____



Daily Word Problem

Preview

Please log in to download
the printable version of this worksheet.

