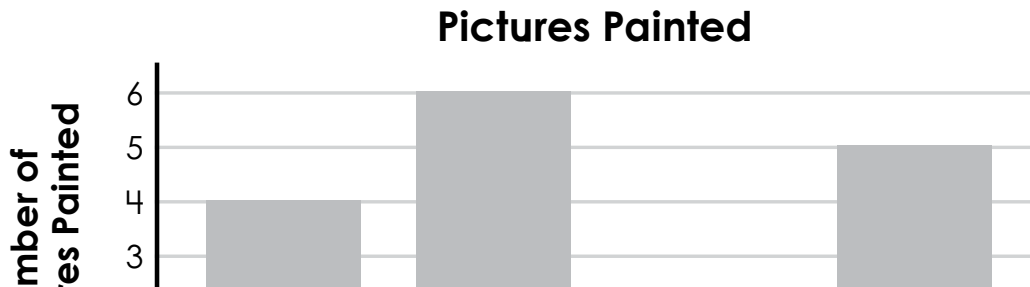


Name: _____

Daily Word Problem

The graph below shows the number of pictures painted by four students.



Preview

Please log in to download
the printable version of this worksheet.

If AJ paints 9 more pictures,
how many will he have?

Show your work.



Name: _____

B-107

Adding & Subtracting
2-Digit Numbers

**Multi-
Step**

Daily Word Problem

Gina has 37 crayons.

Joey has 23 more crayons than Gina.

How many crayons do they have altogether?

Show your work.



Preview

Please log in to download
the printable version of this worksheet.

answer: _____



Name: _____

B-108

Adding & Subtracting
2-Digit Numbers

**Multi-
Step**

Daily Word Problem

Kay has 84 seashells.

Her sister Angel has 26 fewer shells than Kay.

How many seashells do they have altogether?


Show your work.



Preview

Please log in to download
the printable version of this worksheet.

answer: _____



Name: _____

B-109

Adding & Subtracting
2-Digit Numbers

**Single-
Step**

Daily Word Problem

A squirrel is collecting nuts.

It has 89 nuts in a tree and 99 more buried in the garden.


How many nuts does the squirrel have altogether?

Show your work.



Preview

Please log in to download
the printable version of this worksheet.



answer: _____

Name: _____

B-110

Adding & Subtracting
3-Digit Numbers

**Single-
Step**

Daily Word Problem

There are 200 bees in a hive.

There are 120 more bees in the garden.

How many bees are there in all?


Show your work.



Preview

Please log in to download
the printable version of this worksheet.

answer: _____



Daily Word Problem

Preview

Please log in to download
the printable version of this worksheet.

