

Name: _____


Daily Word Problem

Mr. Hugo's class made a picture graph to show how many pets they have.

How many pets are there in all?



Show your work.



answer: _____

Name: _____

Daily Word Problem

Emir is thinking of a number.

He says the number is greater than 115 and less than 117.



answer: _____



Name: _____

Daily Word Problem

Zina has 120 beads.

She uses 8 beads to make a key chain.



Preview

Please log in to download
the printable version of this worksheet.



answer: _____

Name: _____

Daily Word Problem

Chu has 56 stickers.

He gets 9 more stickers.

How many stickers does Chu have in



answer: _____



Name: _____

Daily Word Problem

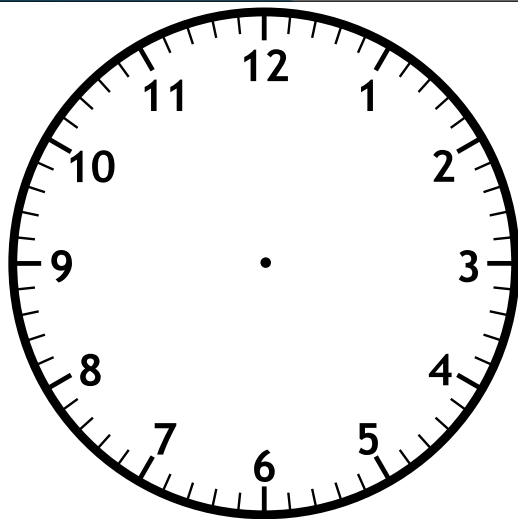
Ina and her mom are driving to Uncle Lee's house.

They leave at 9:00 in the morning. It takes 2 hours to get there.




Preview

Please log in to download the printable version of this worksheet.



answer: _____



Daily Word Problem

Preview

Please log in to download
the printable version of this worksheet.

