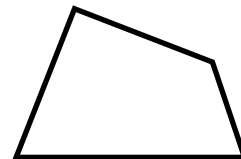
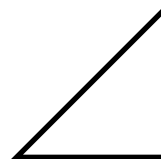
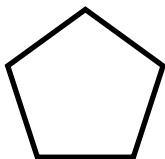
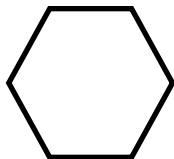
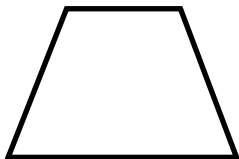


Name: _____



Math Buzz

Color the shapes that have at least one pair of parallel lines.



Last summer, the city zoo had 349,323 visitors.
This summer, the zoo had 398,234 visitors.
How many visitors did the zoo have last summer and this summer combined?

Complete the table.

Input	Output
18,833	24,797



Preview

Please log in to download the printable version of this worksheet.

Draw a line to match each number.

nine hundred sixty thousand, eighty

$$600,000 + 90,000 + 8$$

$$80,000 + 9,000 + 600$$

$$960,080$$


$$690,008$$

eighty-nine thousand, six hundred

Fill in the missing multiples of 8.

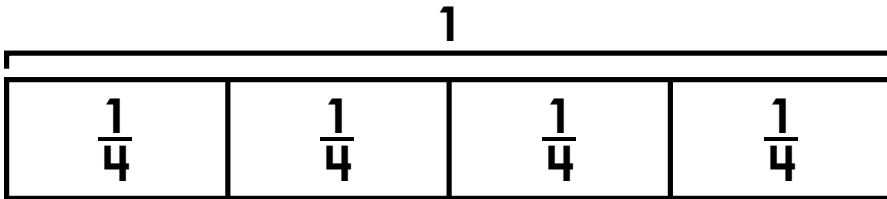
8, , , , 40, , , , , 80, ,

Name: _____



Math Buzz

Complete the number sentence to match the tape diagram.



$$1 = \frac{\square}{4} = \frac{1}{4} + \frac{1}{4} + \frac{1}{4} + \frac{1}{4}$$

Fill in the missing numbers.

$$350 = 5 \times \square$$

$$7 \times \square = 420$$

$$\square \times 9 = 720$$



Preview

Please log in to download the printable version of this worksheet.

Subtract
100,000

42,937

12,745

b

The Larchmont Public Library has 42,937 books. The Kenmore Public Library has 12,745 fewer books than Larchmont. How many books does the Kenmore Library have?

$$b = \underline{\hspace{2cm}}$$

Name: _____



Math Buzz

Find the sum.

$$595,880 + 623,759 + 865,412 = \underline{\hspace{2cm}}$$

$$\begin{array}{r} 711,549 \\ 432,860 \\ + 562,375 \\ \hline \end{array}$$

Circle the values of the underlined digits.

6,247,031

7,000 70,000 700,000


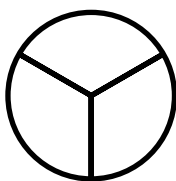




Complete the table.

Input	Output
32	



Preview


Please log in to download the printable version of this worksheet.

Shade each fraction, then compare using $>$, $<$, $=$.
 $\frac{3}{8}$

 $\frac{2}{3}$

 $\frac{9}{10}$

 $\frac{5}{6}$

 $\frac{3}{6}$

 $\frac{6}{12}$

Mr. Eichel separated his class into groups for their field trip to the museum. He made five groups with seven students in each group. There were also eight adult chaperones, including Mr. Eichel. How many people were there all together?

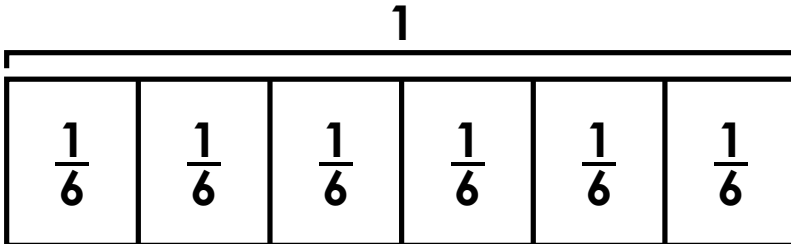
answer: _____ people Round your answer to the nearest ten. _____

Name: _____



Math Buzz

Complete the number sentence to match the tape diagram.



$$1 = \frac{\square}{6} = \frac{1}{6} + \frac{1}{6} + \frac{1}{6} + \frac{1}{6} + \frac{1}{6} + \frac{1}{6}$$

57 girls showed up to try out for the lacrosse team. Coach Byrne cut 9 of them in the first round. The rest were broken up into teams of 8 to practice drills. How many girls were on each team?


answer: _____ girls

Round your answer



Preview

Please log in to download the printable version of this worksheet.



$$(6 \times 10) + (6 \times 2) = \underline{\hspace{2cm}}$$

Area = _____ square units

Circle the numbers that round to **600,000**.

629,354 **536,941** **689,324**

651,234 **609,347** **597,324**

563,165 **574,394** **683,179**

Complete the chart.

3,523,158

Add 1,000	Add 10,000	Add 100,000

Name: _____



Math Buzz

Fill in the missing multiples of 9.

9, , , , 45, , , , , 90, ,

Complete the table.

Input	Output
54,349	
77,499	

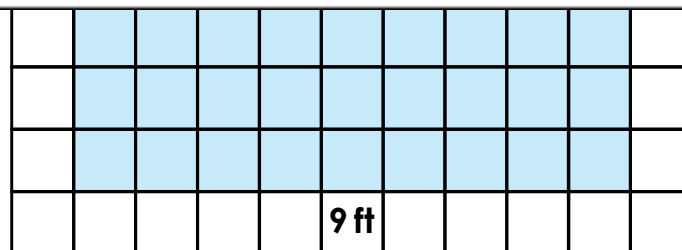
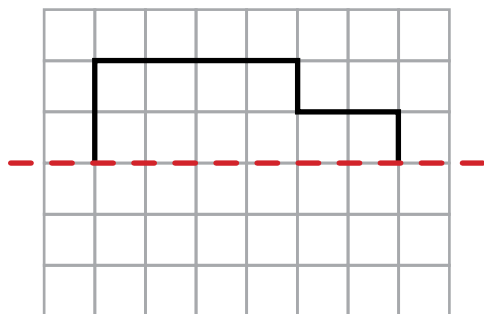
Below is a diagram of Amir's Bedroom and closet. Each square unit represents one square foot of space. What is the total area of Amir's bedroom and closet?



Preview

Please log in to download the printable version of this worksheet.

complete the shape.



Area = _____ square feet

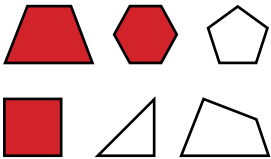
Compare each set of numbers using the words "is greater than", "is less than", or "is equal to".

$$56,685 + 38,465 \quad \underline{\hspace{2cm}} \quad 108,734 - 13,584$$

$$964,044 - 81,308 \quad \underline{\hspace{2cm}} \quad 148,641 + 488,306$$



Color the shapes that have at least one pair of parallel lines.



Last summer, the city zoo had 349,323 visitors. This summer, the zoo had 398,234 visitors. How many visitors did the zoo have last summer and this summer combined?

349,323	398,234
v	

$$349,323 + 398,234 = 747,557$$

$$v = 747,557$$

Complete the table.

Input	Output
18,833	24,797
26,388	32,352
31,384	37,348
47,245	53,209

Rule: Add 5,964

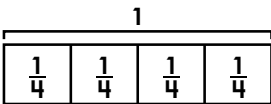
Draw a line to match each number.

~~nine hundred sixty thousand, eighty~~ $600,000 + 90,000 + 8$
~~80,000 + 9,000 + 600~~ $960,080$
~~690,008~~ $80,000 + 9,000 + 600$
 eighty-nine thousand, six hundred

Fill in the missing multiples of 8.

8, **16**, **24**, **32**, **40**,
48, **56**, **64**, **72**,
80, **88**, **96**

Complete the number sentence to match the tape diagram.



Fill in the missing numbers.

$$350 = 5 \times 70$$

$$7 \times 60 = 420$$

$$80 \times 9 = 720$$

Complete the chart.

5,461,169

Subtract 1,000	5,460,169
Subtract 10,000	5,451,169
Subtract	5,361,169

Order the numbers from greatest to least.

$$60,000 + 5,000 + 700 + 30 + 2$$

605,327

six hundred fifty-seven thousand, three hundred two

The Larchmont Public Library has 42,937 books. The Kenmore Public Library has 12,745 fewer books than Larchmont. How many books does the Kenmore Library have?

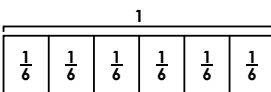
42,937	
12,745	b



Preview

Please log in to download the printable version of this worksheet.

Complete the number sentence to match the tape diagram.



$$1 = \frac{6}{6} = \frac{1}{6} + \frac{1}{6} + \frac{1}{6} + \frac{1}{6} + \frac{1}{6} + \frac{1}{6}$$

57 girls showed up to try out for the lacrosse team. Coach Byrne cut 9 of them in the first round. The rest were broken up into teams of 8 to practice drills. How many girls were on each team?

$$57 - 9 = 48 \quad 48 \div 8 = 6$$

answer: 6 girls

Round your answer to the nearest ten. 10

Use the distributive property to find the total area of the rectangles.

$$6 \times 12 = 72$$

$$6 \times (10 + 2) = 72$$

$$(6 \times 10) + (6 \times 2) = 72$$

Area = 72 square units

Circle the numbers that round to 600,000.

629,354 536,941 689,324

651,234 609,347 597,324

563,165 574,394 683,179

Complete the chart.

3,523,158

Add 1,000	Add 10,000	Add 100,000
3,524,158	3,533,158	3,623,158

Fill in the missing multiples of 9.

9, **18**, **27**, **36**, **45**,

54, **63**, **72**, **81**,

90, **99**, **108**

Complete the table.

Input	Output
54,349	47,391
77,499	70,541
84,566	77,608
93,425	86,467

Rule: Subtract 6,958

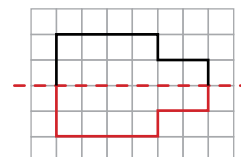
Below is a diagram of Amir's Bedroom and closet. Each square unit represents one square foot of space. What is the total area of Amir's bedroom and closet?

$$(3 \times 4) + (7 \times 9)$$

$$12 + 63 = 75$$

Area = 75 square feet

Use the line of symmetry to complete the shape.



Compare each set of numbers using the words "is greater than", "is less than", or "is equal to".

$$56,685 + 38,465$$

is equal to

$$108,734 - 13,584$$

$$964,044 - 81,308$$

is greater than

$$148,641 + 488,306$$