



Name: _____

Math Buzz

Continue the pattern.

802, _____, 806, _____, 810, _____

_____, 618, _____, 622, _____, 626

270, _____, 274, 276, _____, _____

Piper has a total of 43¢ in her purse. She has 4 dimes and 3 pennies. Show two other ways to make 43¢.

Write the time shown on the clock.



Preview

Please log in to download the printable version of this worksheet.

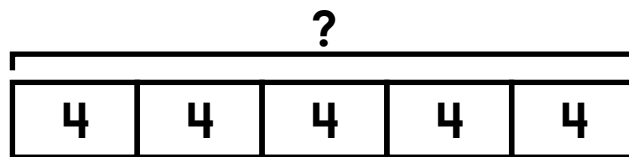
Add. Show your work

Find the sum of
904 and 546.

5,369 + 2,397 = _____

$$\begin{array}{r} 2,648 \\ + 352 \\ \hline \end{array}$$


desks in her classroom. She made 5 groups and put 4 desks in each group. How many desks are there in all?



$$\underline{\quad} \times \underline{\quad} = \underline{\quad}$$

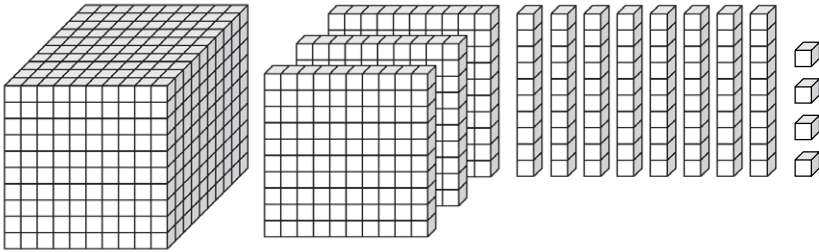
answer: _____ desks

Name: _____



Math Buzz

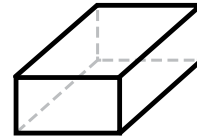
Count the blocks.



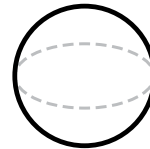
What number is shown?

Thousands	Hundreds	Tens	Ones

Draw a line to match each shape with its name.



sphere



pyramid





rectangular
prism




Preview

Please log in to download the printable version of this worksheet.



answer: _____ books

Fill in the number sentence that matches the array.



_____ X _____ = _____

Solve each side and compare using >, <, or =.

362 + 388 _____ **214 + 536**

321 - 142 _____ **389 - 201**

Name: _____



Math Buzz

Round each number.

	Nearest Ten	Nearest Hundred
683		
4,415		
7,862		

Subtract. *Show your work*

Find the difference between 912 and 357.

$$7,603 - 1,732 = \underline{\hspace{2cm}}$$

$$\begin{array}{r} 6,208 \\ - 544 \\ \hline \end{array}$$



Preview

Please log in to download the printable version of this worksheet.


300, _____, 306, 309, _____, 315

Show your work


615, 618, _____, 624, 627, _____

answer: _____ tickets

What fraction of the fruits are bananas?



Name: _____



Math Buzz

Compare each set of numbers using $>$, $<$, or $=$.

747 _____ 474

425 _____ 455

8,912 _____ 8,693

3,804 _____ 6,437

Max and Drew went to the lake. Max rented a kayak for an hour and Drew rented a paddle board. They paid together with a \$50 bill. How much change did they get back?

Show your work

Lake Rentals (per hour)

Canoe.....\$15

Kayak.....\$10

Paddle Board.....\$12



Preview

Please log in to download the printable version of this worksheet.

cone



cube




cylinder



sphere



rectangular prism



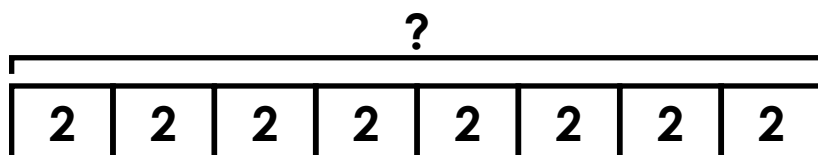
cups

gallons

Name: _____

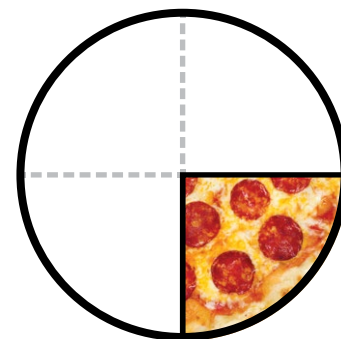
Math Buzz

Guillermo got on a subway train heading uptown. There were 8 rows of seats on his subway car, and 2 passengers can fit on each seat. How many passengers can the subway car hold?



$$\underline{\quad} \times \underline{\quad} = \underline{\quad}$$

How much of the pizza is left?



$$\frac{1}{4} \quad \frac{1}{2} \quad \frac{1}{4}$$



Preview

Please log in to download the printable version of this worksheet.

How many Tuesdays are in May?

12	13	14	15	16	17	18
19	20	21	22	23	24	25
26	27	28	29	30	31	

Fill in the missing number.

$$566 - \boxed{\quad} = 378$$

Continue the pattern.

400, 404, _____, 412, _____, 420

252, _____, 260, 264, 268, _____

328, 332, _____, _____, 344, 348




Continue the pattern.

802, 804, 806, 808, 810, 812

616, 618, 620, 622, 624, 626

270, 272, 274, 276, 278, 280

Piper has a total of 43¢ in her purse. She has 4 dimes and 3 pennies. Show two other ways to make 43¢.



(Note: answers may vary)

Write the time shown on the clock.



7:56

Add. *Show your work*

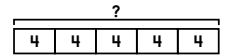
Find the sum of 904 and 546.

1,450

$$5,369 + 2,397 = \underline{7,766}$$

$$\begin{array}{r} 111 \\ 2,648 \\ + 352 \\ \hline 3,000 \end{array}$$

Ms. Hollingsworth set up groups of desks in her classroom. She made 5 groups and put 4 desks in each group. How many desks are there in all?

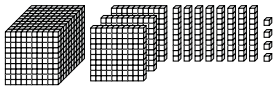


Show your work

$$5 \times 4 = 20$$

answer: 20 desks

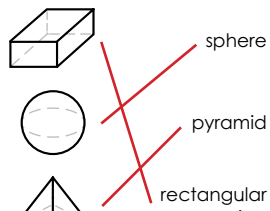
Count the blocks.



What number is shown?

Thousands	Hundreds	Tens	Ones
<u>1</u>	<u>3</u>	<u>8</u>	<u>4</u>

Draw a line to match each shape with its name.

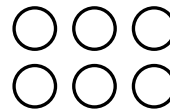


The Lakeview Public Library has 3,467 fiction books and 2,168 non-fiction books. How many fiction and non-fiction books are there all together?

Show your work

$$3,467 + 2,168 = 5,635$$

Fill in the number sentence that matches the array.



$$\underline{2} \times \underline{3} = \underline{6}$$

Solve each side and compare using >, <, or =.

$$362 + 388 = 750 \quad 214 + 536 = 750$$

$$321 - 142 = 179 \quad 389 - 201 = 188$$



Preview

Please log in to download the printable version of this worksheet.

Compare each set of numbers using >, <, or =.

$$747 > 474$$

$$425 < 455$$

$$8,912 > 8,693$$

$$3,804 < 6,437$$

Max and Drew went to the lake. Max rented a kayak for an hour and Drew rented a paddle board. They paid together with a \$50 bill. How much change did they get back?

Show your work

$$\begin{array}{l} \$12 + \$10 = \$22 \\ \$50 - \$22 = \$28 \end{array}$$

answer: \$28

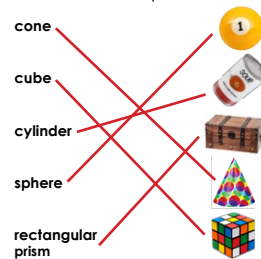
Lake Rentals (per hour)	
Canoe	\$15
Kayak	\$10
Paddle Board	\$12

Fill in the missing number.

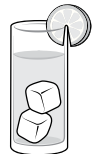
$$352 + \underline{356} = 708$$

$$708 - 352 = 356$$

Draw a line to match each name to its shape.



Choose the best unit to measure the capacity of a glass of lemonade.



cups gallons

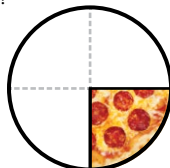
Guillermo got on a subway train heading uptown. There were 8 rows of seats on his subway car, and 2 passengers can fit on each seat. How many passengers can the subway car hold?

<u>2</u>	<u>2</u>	<u>2</u>	<u>2</u>	<u>2</u>	<u>2</u>	<u>2</u>	<u>2</u>	<u>2</u>	<u>2</u>
----------	----------	----------	----------	----------	----------	----------	----------	----------	----------

Show your work $8 \times 2 = 16$

answer: 16 passengers

How much of the pizza is left?



$\frac{1}{2}$ $\frac{1}{3}$ $\frac{1}{4}$

May						
Sunday	Monday	Tuesday	Wednesday	Thursday	Friday	Saturday
1	2	3	4	5	6	7
8	9	10	11	12	13	14
15	16	17	18	19	20	21
22	23	24	25	26	27	28
29	30	31				

What day of the week is May 17th? Friday

How many Tuesdays are in May? 4

Fill in the missing number.

$$566 - \underline{188} = 378$$

$$566 - 378 = 188$$

Continue the pattern.

400, 404, 408, 412, 416, 420

252, 256, 260, 264, 268, 272

328, 332, 336, 340, 344, 348