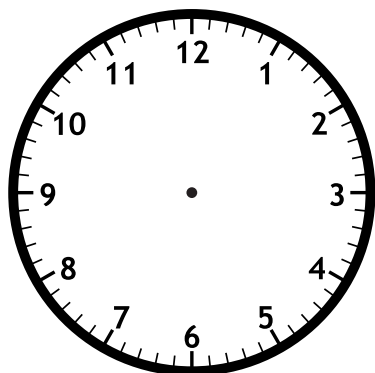


Name: \_\_\_\_\_

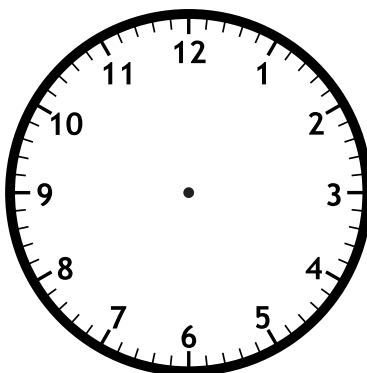


# Math Buzz

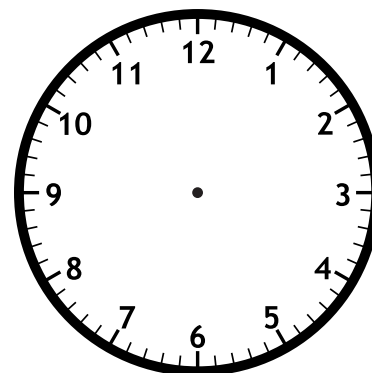
Draw hands on each clock to show the times.



5:10



3:45



9:25



# Preview

Please log in to download  
the printable version of this worksheet.

expanded. \_\_\_\_\_

Draw lines to divide each shape into equal parts.



halves



thirds




fourths

$$\begin{array}{r} 45 \\ + 32 \\ \hline \end{array}$$

Count on by tens.

770, \_\_\_\_\_, \_\_\_\_\_, 800, 810, \_\_\_\_\_, \_\_\_\_\_, \_\_\_\_\_

Name: \_\_\_\_\_



## Math Buzz

There are 72 second graders at Eagleton Elementary School. 58 of them take the bus to school. How many second graders do not take the bus?

?	58
72	

$$\underline{\quad} - \underline{\quad} = \underline{\quad}$$

Alexis has 348 followers on her social media account. What is the value of the 4 in the number 348?

- a. 4      b. 40      c. 400

Fill in the thermometer to show 20°C.



# Preview

Please log in to download the printable version of this worksheet.

$$\underline{\quad} + \underline{\quad} = \underline{\quad}$$

Sort the numbers.

<b>even</b>

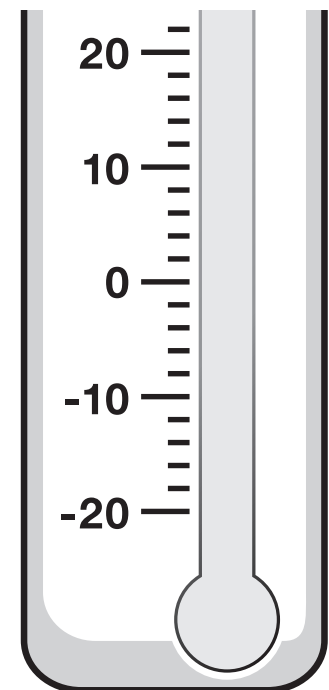
<b>odd</b>

17

6

9




14




Name: \_\_\_\_\_



# Math Buzz

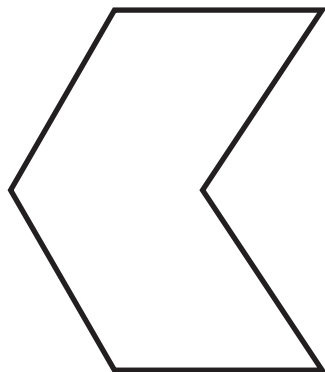
January						
Sunday	Monday	Tuesday	Wednesday	Thursday	Friday	Saturday
				1	2	3
4	5	6	7	8	9	10
11  Shopping	12	13	14	15	16	17
18	19	20  Doctor	21	22	23	24  Ski Lesson
25	26	27	28	29	30	31



## Preview

Please log in to download the printable version of this worksheet.

for the shape.



\_\_\_\_\_ sides

\_\_\_\_\_ corners

$$\begin{array}{r} 87 \\ - 49 \\ \hline \end{array}$$

$32 + 36 = \underline{\hspace{2cm}}$

$37 + 24 = \underline{\hspace{2cm}}$


Write the number in standard form and expanded form.

**six hundred forty-seven**

standard: \_\_\_\_\_

expanded: \_\_\_\_\_

Name: \_\_\_\_\_



# Math Buzz

Solve.

What is 10 more than 436? \_\_\_\_\_

What is 10 less than 848? \_\_\_\_\_

Compare. Write  $>$ ,  $<$ ,  $=$ .

362

263

Circle the coins to make \$1.00. Cross off the coins you do not need.



# Preview


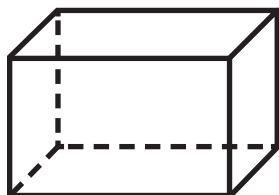
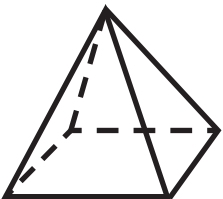
Please log in to download the printable version of this worksheet.



Solve.

$$\begin{array}{r} 9 \\ 4 \\ + 1 \\ \hline \end{array}$$

$$\begin{array}{r} 8 \\ 9 \\ 2 \\ + 3 \\ \hline \end{array}$$



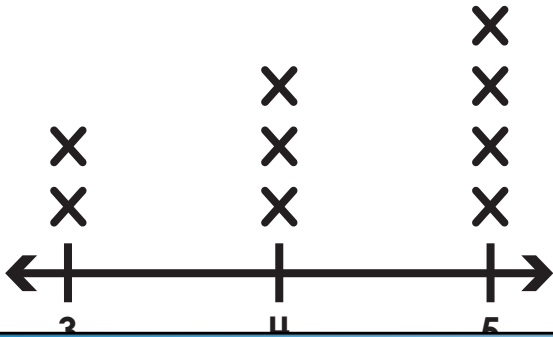


Name: \_\_\_\_\_

# Math Buzz

The line plot below shows the height, in feet, of everyone in the Miller family.

key: X = 1 person



Solve.

Add 42 and 47. \_\_\_\_\_

Find the sum of 19 and 26. \_\_\_\_\_

Subtract.

92

74

33



How many people are in the Miller family?

\_\_\_\_\_

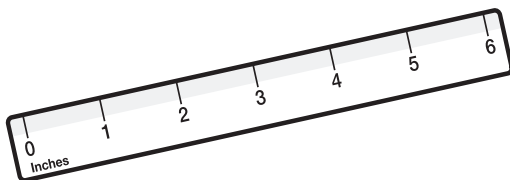
# Preview

Please log in to download the printable version of this worksheet.

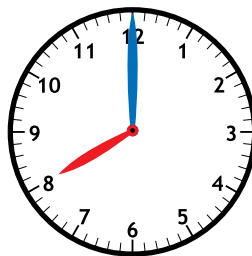
word: \_\_\_\_\_

standard: \_\_\_\_\_

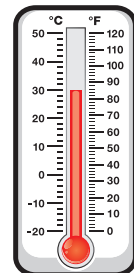
Which tool should Paige use to measure the temperature outside?



inch ruler



clock



thermometer



Draw hands on each clock to show the times.



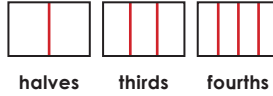
Write the number in word form and expanded form.

**572**

word: **five hundred seventy-two**

expanded: **500 + 70 + 2**

Draw lines to divide each shape into equal parts.



Add.

$$\begin{array}{r} 68 \\ + 13 \\ \hline 81 \end{array}$$

$$\begin{array}{r} 45 \\ + 32 \\ \hline 77 \end{array}$$

Count on by tens.

770, **780**, **790**, 800,

810, **820**, **830**, **840**

There are 72 second graders at Eagleton Elementary School. 58 of them take the bus to school. How many second graders do not take the bus?

?	58
72	

$$72 - 58 = 14$$

Alexis has 348 followers on her social media account. What is the value of the 4 in the number 348?

a. 4   **b. 40**   c. 400

Write a related subtraction fact using the numbers below.

$$21 - 6 = 15$$

$$15 + 6 = 21$$

or


$$6 + 15 = 21$$

Sort the numbers.

even
14 6

odd
17 9

Fill in the thermometer to show 20°C.



# Preview

Please log in to download the printable version of this worksheet.

Solve.

What is 10 more than 436?  
**446**

What is 10 less than 848?  
**838**

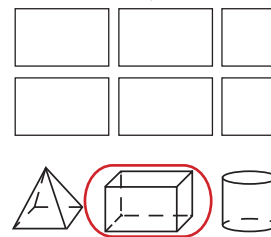
Compare. Write >, <, =.

362 **>** 263

Circle the coins to make \$1.00. Cross off the coins you do not need.



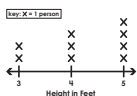
Which solid shape has these flat shapes as faces?



Solve.

$$\begin{array}{r} 9 \\ 4 \\ + 1 \\ \hline 14 \end{array}$$

$$\begin{array}{r} 8 \\ 9 \\ 2 \\ + 3 \\ \hline 22 \end{array}$$



How many people are taller than 4 feet?

**4**

How many people are in the Miller family?

**9**

Solve.

Add 42 and 47. **89**

Find the sum of 19 and 26. **45**

Subtract.

$$\begin{array}{r} 8 \ 12 \\ 92 \\ - 59 \\ \hline 33 \end{array}$$

$$\begin{array}{r} 6 \ 14 \\ 74 \\ - 48 \\ \hline 26 \end{array}$$

$$\begin{array}{r} 2 \ 13 \\ 33 \\ - 27 \\ \hline 6 \end{array}$$

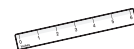
Write the number in word form and standard form.

$$800 + 50 + 1$$

word: **eight hundred fifty-one**

standard: **851**

Which tool should Paige use to measure the temperature outside?



inch ruler



clock



thermometer