

Name: _____



Math Buzz

Write the number in word form and expanded form.

138

word: _____

expanded: _____

Add.

$$\begin{array}{r} 87 \\ + 12 \\ \hline \end{array}$$

Match the rectangles to the word that describes the number of equal parts.



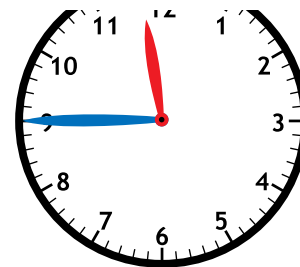
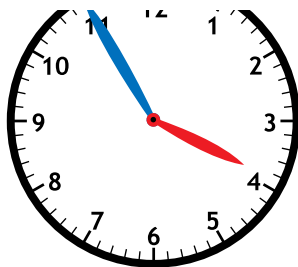
halves

59



Preview


Please log in to download the printable version of this worksheet.



Count on by tens.

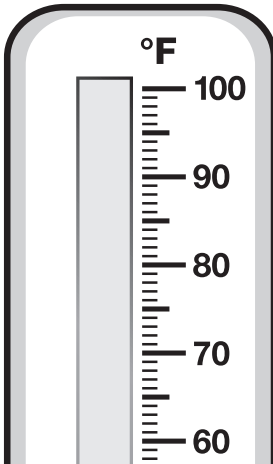
410, 420, _____, _____, **450,** _____, _____, _____

Name: _____



Math Buzz

Fill in the thermometer to show 70°F.



Write a related subtraction fact using the numbers below.

$$13 + 9 = 22$$

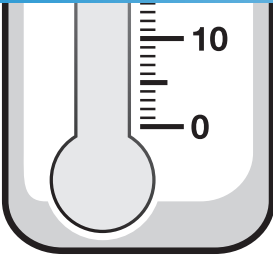
$$\underline{\quad\quad} - \underline{\quad\quad} = \underline{\quad\quad}$$

Describe each group of numbers. Write **even** or **odd**.



Preview

Please log in to download the printable version of this worksheet.



Milo's chapter book has 96 pages. So far, he has read 48 pages. How many pages does Milo have left to read?

48	?
96	

Circle the number that has the digit 3 in the hundreds place.

- a. 35 b. 237
c. 183 d. 346

$$\underline{\quad\quad} - \underline{\quad\quad} = \underline{\quad\quad}$$

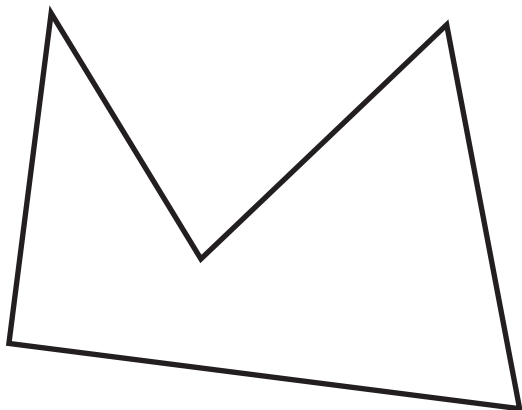
answer: _____ pages

Name: _____



Math Buzz

Write the number of sides and corners for the shape.



Subtract.

$$\begin{array}{r} 67 \\ - 43 \\ \hline \end{array}$$

Add.

$$\begin{array}{r} 18 \\ + 62 \\ \hline \end{array}$$

$$\begin{array}{r} 33 \\ + 24 \\ \hline \end{array}$$







Write the number in standard form and expanded form.

two hundred fifty-nine



Preview


Please log in to download the printable version of this worksheet.

		1  Library	2	3  Computer Lab	4	5
6	7	8  Library	9	10  Computer Lab	11	12
13	14	15  Library	16	17  Computer Lab	18	19
20	21 No School Winter Break	22	23	24	25	26
27	28 No School Winter Break	29	30	31		

What day of the week does Miss Ming's class go to Computer Lab? _____

How many times will Miss Ming's class go to Computer Lab in December? _____

Name: _____




Math Buzz

Circle the coins to make \$1.00. Cross off the coins you do not need.



Which solid shape has these flat shapes as faces?



Preview

Please log in to download the printable version of this worksheet.

Solve.

$$\begin{array}{r} 6 \\ 7 \\ + 2 \\ \hline \end{array} \qquad \begin{array}{r} 4 \\ 8 \\ 3 \\ + 5 \\ \hline \end{array}$$

Solve.

100 more than 174 is _____

100 less than 465 is _____

Compare. Write $>$, $<$, $=$.

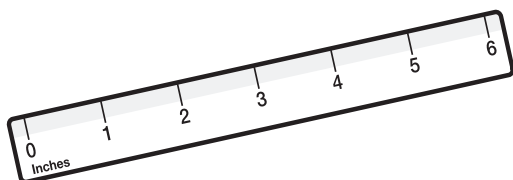
293 _____ 329

Name: _____

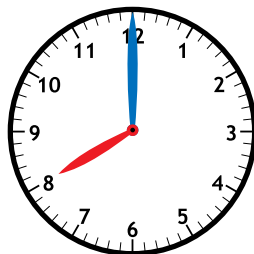


Math Buzz

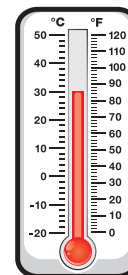
Which tool should Sam use to tell when karate class starts?



inch ruler



clock



thermometer

Solve.

Add 48 and 51. _____

The line plot shows the length, in centimeters, of the pieces of yarn Zuri cut for her art project.



Preview

Please log in to download the printable version of this worksheet.

$$\begin{array}{r} 79 \\ - 36 \\ \hline \end{array}$$

$$\begin{array}{r} 66 \\ - 44 \\ \hline \end{array}$$

$$\begin{array}{r} 87 \\ - 58 \\ \hline \end{array}$$



Length of Yarn in Centimeters

How many pieces of yarn were 8 centimeters long?

How many pieces of yarn were longer than 8 centimeters?

Write the number in word form and standard form.

$$300 + 80 + 5$$

word: _____

standard: _____



<p>Write the number in word form and expanded form.</p> <p>138</p> <p>word: one hundred thirty-eight</p> <p>expanded: 100 + 30 + 8</p>	<p>Add.</p> $\begin{array}{r} 87 \\ + 12 \\ \hline 99 \end{array}$ $\begin{array}{r} 59 \\ + 44 \\ \hline 103 \end{array}$	<p>Match the rectangles to the word that describes the number of equal parts.</p> <div style="display: flex; align-items: center;"> <div style="margin-right: 10px;"> </div> <div> <p>halves</p> <p>thirds</p> <p>fourths</p> </div> </div>	<p>Fill in the times shown.</p> <div style="display: flex; justify-content: space-around;"> </div> <p>7:20 3:55 11:45</p>	<p>Count on by tens.</p> <p>410, 420, 430, 440,</p> <p>450, 460, 470, 480</p>
---	--	---	--	---

<p>Fill in the thermometer to show 70°F.</p>	<p>Write a related subtraction fact using the numbers below.</p> $13 + 9 = 22$ $\underline{22} - \underline{13} = \underline{9}$ <p style="text-align: center;">or</p> $22 - 9 = 13$	<p>Describe each group of numbers. Write even or odd.</p> <table style="border: 1px solid black; width: 100%;"> <tr> <td style="padding: 5px;">15 3</td> <td style="padding: 5px;">10 4</td> </tr> <tr> <td style="padding: 5px;">7</td> <td style="padding: 5px;">16</td> </tr> </table> <p style="text-align: center;">odd even</p>	15 3	10 4	7	16	<p>Circle the number that has the digit 3 in the hundreds place.</p> <p>a. 35 b. 237</p> <p>c. 183 d. 346</p>	<p>Milo's chapter book has 96 pages. So far, he has read 48 pages. How many pages does Milo have left to read?</p> <table border="1" style="margin-left: auto; margin-right: auto;"> <tr> <td style="width: 50px; text-align: center;">48</td> <td style="width: 50px; text-align: center;">?</td> </tr> <tr> <td colspan="2" style="text-align: center;">96</td> </tr> </table> <p style="text-align: center;">96 - 48 = 48</p>	48	?	96	
15 3	10 4											
7	16											
48	?											
96												

Preview

Please log in to download the printable version of this worksheet.

<p>Circle the coins to make \$1.00. Cross off the coins you do not need.</p> <div style="display: flex; flex-wrap: wrap; justify-content: space-around;"> <div style="border: 1px solid red; border-radius: 50%; padding: 5px; margin: 5px;">25¢</div> <div style="border: 1px solid red; border-radius: 50%; padding: 5px; margin: 5px;">50¢</div> <div style="border: 1px solid red; border-radius: 50%; padding: 5px; margin: 5px;">75¢</div> <div style="border: 1px solid red; border-radius: 50%; padding: 5px; margin: 5px;">100¢</div> <div style="border: 1px solid red; border-radius: 50%; padding: 5px; margin: 5px;">1.00</div> </div>	<p>Which solid shape has these flat shapes as faces?</p> <div style="display: flex; flex-wrap: wrap; justify-content: space-around;"> <div style="border: 1px solid black; width: 40px; height: 40px; margin: 5px;"></div> <div style="border: 1px solid black; width: 40px; height: 40px; margin: 5px;"></div> <div style="border: 1px solid black; width: 40px; height: 40px; margin: 5px;"></div> <div style="border: 1px solid black; width: 40px; height: 40px; margin: 5px;"></div> <div style="border: 1px solid black; width: 40px; height: 40px; margin: 5px;"></div> <div style="border: 1px solid black; width: 40px; height: 40px; margin: 5px;"></div> </div> <div style="display: flex; justify-content: space-around; margin-top: 10px;"> </div>	<p>Solve.</p> <p>100 more than 174 is 274</p> <p>100 less than 465 is 365</p>	<p>Solve.</p> $\begin{array}{r} 6 \\ 7 \\ + 2 \\ \hline 15 \end{array}$ $\begin{array}{r} 4 \\ 8 \\ 3 \\ + 5 \\ \hline 20 \end{array}$	<p>Compare. Write >, <, =.</p> <p>293 < 329</p>
--	---	---	--	---

<p>Which tool should Sam use to tell when karate class starts?</p> <div style="display: flex; flex-direction: column; align-items: center;"> <p>inch ruler</p> <div style="border: 1px solid red; border-radius: 15px; padding: 5px; margin: 5px;"> <p>clock</p> </div> <p>thermometer</p> </div>	<p>Solve.</p> <p>Add 48 and 51. 99</p> <p>Find the sum of 96 and 26. 122</p>	<p>Subtract.</p> $\begin{array}{r} 79 \\ - 36 \\ \hline 43 \end{array}$ $\begin{array}{r} 66 \\ - 44 \\ \hline 22 \end{array}$ $\begin{array}{r} 7 \\ 17 \\ 87 \\ - 58 \\ \hline 29 \end{array}$	<p>Write the number in word form and standard form.</p> <p>300 + 80 + 5</p> <p>word: three hundred eighty-five</p> <p>standard: 385</p>	<p>How many pieces of yarn were 8 centimeters long?</p> <p style="text-align: center;">5</p> <p>How many pieces of yarn were longer than 8 centimeters?</p> <p style="text-align: center;">10</p>
---	--	--	--	---