

Name: _____



Math Buzz


Fill in the missing numbers.

10 less
56
10 more

Add.

	Tens	Ones
	2	5
+		4
<hr/>		

Which flat surface does a **cone** have?



Preview

Please log in to download the printable version of this worksheet.


7	8	9	10	11	12	13
14	15	16	17	18	19	20
21	22	23	24	25	26	27
28	29	30	31			

What is the month? _____

The first day of spring is March 20th.

Color the first day of spring on the calendar.

Name: _____



Math Buzz

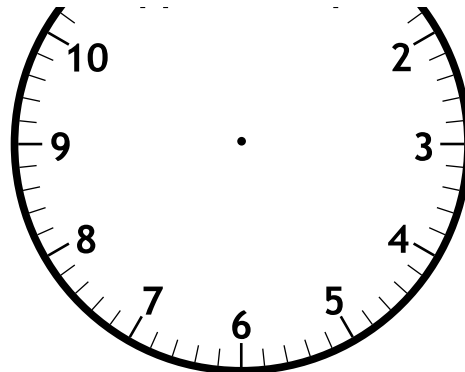
How many squares longer is the pencil than the crayon?



Preview

Please log in to download the printable version of this worksheet.

	3	/	
-		2	



Fill in the missing numbers.

$$\square + 8 = 12$$

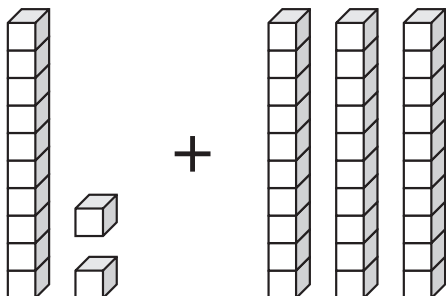
$$12 - \square = 8$$

Name: _____



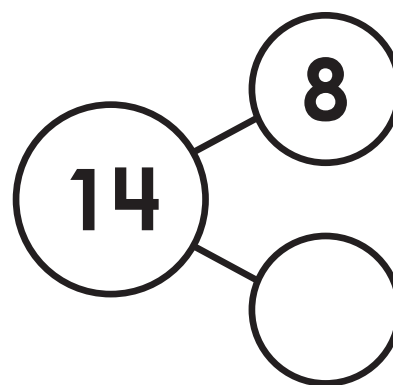
Math Buzz

Add.



$$\square + \square = \square$$

Fill in the missing number.
Write the fact family for the numbers in the number bond.



Preview


Please log in to download
the printable version of this worksheet.

$$\underline{\quad} - \underline{\quad} = \underline{\quad}$$

$$\underline{\quad} - \underline{\quad} = \underline{\quad}$$

answer: _____ **baseball cards**


Fill in the missing numbers.



The circle shows _____ quarters.

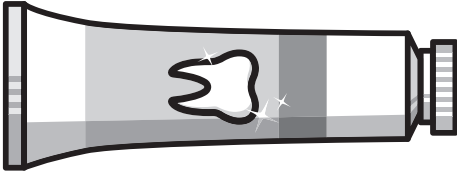
The _____ equal parts make 1 whole.

Name: _____

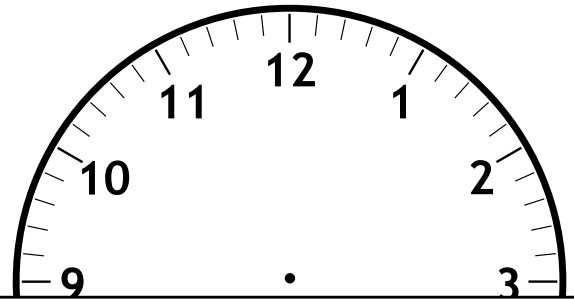


Math Buzz

How many paperclips shorter is the toothpaste than the toothbrush?



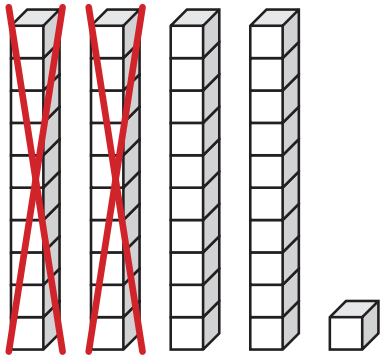
Rio goes to bed at 8:00. Draw the hands on the clock to show 8:00.



Preview

Please log in to download the printable version of this worksheet.

Subtract.



$$\square - \square = \square$$

Write how many tens and ones make this number.

fifty-four	
tens	ones



Name: _____

Math Buzz

Compare the numbers using words.

45 _____ 41

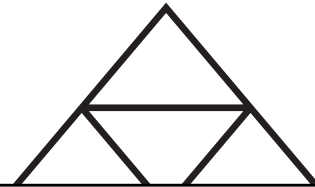

is greater than

is less than

Compare the numbers using $<$ or $>$.

45 ○ 41

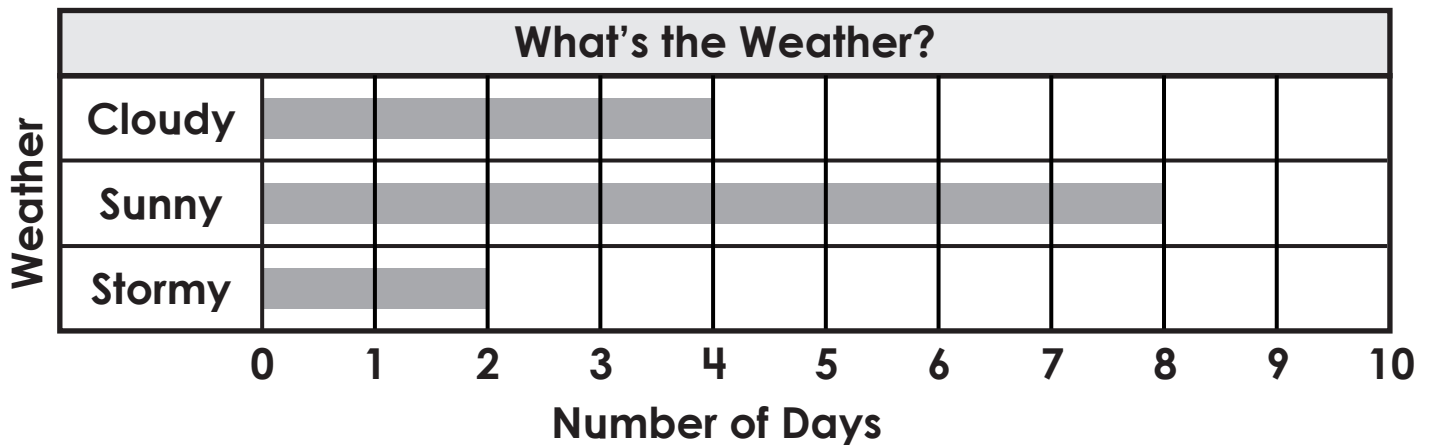
Circle the shape that has equal **halves**.



Preview

Please log in to download the printable version of this worksheet.

Use the graph to answer the questions.



How many days were sunny? _____

How many days were not sunny? _____




Fill in the missing numbers.

10 less	46
56	
10 more	66

Add.

Tens	Ones
2	5
+	4
2	9

Which flat surface does a **cone** have?

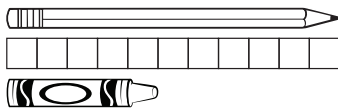


March						
Sunday	Monday	Tuesday	Wednesday	Thursday	Friday	Saturday
	1	2	3	4	5	6
7	8	9	10	11	12	13
14	15	16	17	18	19	20
21	22	23	24	25	26	27
28	29	30	31			

What is the month? March

The first day of spring is March 20th. Color the first day of spring on the calendar.

How many squares longer is the pencil than the crayon?

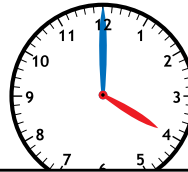


$$11 - 5 = 6$$

Subtract.

Tens	Ones
3	7
-	2
3	5

Ella gets home from school at 4:00. Draw the hands on the clock to show 4:00.



Fill in the missing numbers.

$$\boxed{4} + 8 = 12$$

$$12 - \boxed{4} = 8$$



Preview

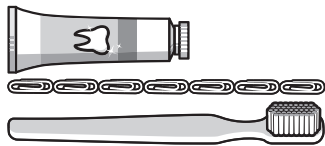
Please log in to download the printable version of this worksheet.

$$14 - 6 = 8$$

answer: baseball cards

the equal parts make 1 whole.

How many paperclips shorter is the toothpaste than the toothbrush?



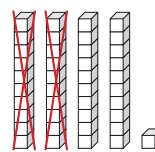
$$7 - 4 = 3$$

3 paperclips 4 paperclips 7 paperclips

Rio goes to bed at 8:00. Draw the hands on the clock to show 8:00.



Subtract.



$$\boxed{41} - \boxed{20} = \boxed{21}$$

Write how many tens and ones make this number.

fifty-four	
tens	ones
5	4

Compare the numbers using words.

45 is greater than 41

is greater than

is less than

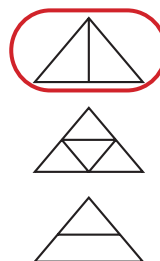
Compare the numbers using < or >.

45 **>** 41

Add.

$$10 + 6 + 7 = \underline{23}$$

Circle the shape that has equal halves.



Use the graph to answer the questions.

What's the Weather?	
Weather	Number of Days
Cloudy	1
Sunny	8
Stormy	6

How many days were sunny? 8

How many days were not sunny? 6