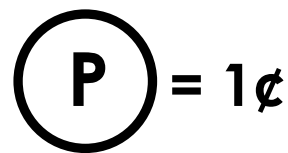
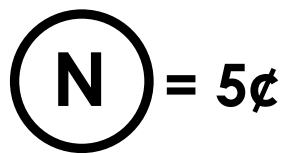
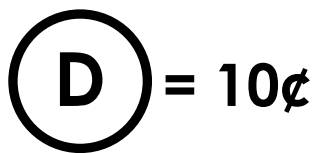
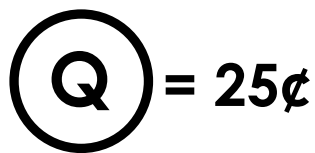


Name: _____

Drawing Coins

Draw coins to show each money amount.



3¢

10¢

5¢

7¢

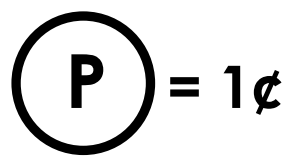
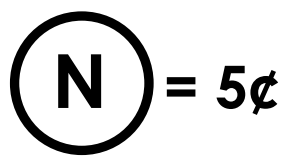
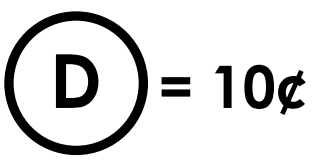
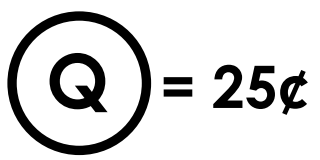
25¢

12¢

ANSWER KEY

Drawing Coins

Draw coins to show each money amount.



3¢



10¢



5¢



7¢



25¢



12¢

