

Name: _____

Twenty-Three

Special Number

23

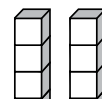
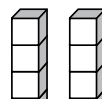
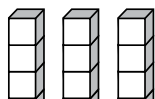
Trace and write.

23
twenty-three

odd

even

Which set of blocks shows 23? (Circle one.)




tens



Preview

Please log in to download
the printable version of this worksheet.



Show 23 with tally marks.