






Name: _____

Counting by 3s

a. Find the total number of fish by counting by 3s.



3

6







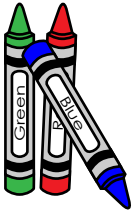
b. Find the total number of flowers by counting by 3s.





PREVIEW

Please log in or register to download the printable version of this worksheet.

c. Find the total number of crayons by counting by 3s.




d. Find the total number of snails by counting by 3s.




ANSWER KEY

Counting by 3s


a. Find the total number of fish by counting by 3s.




3




6



9



12



15

b. Find the total number of flowers by counting by 3s.




3

PREVIEW


Please log in or register to download the printable version of this worksheet.

21

c. Find the total number of crayons by counting by 3s.




3



6




9



12




15




18



21




24




27

d. Find the total number of snails by counting by 3s.



3



6



9



12