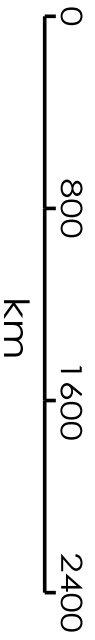
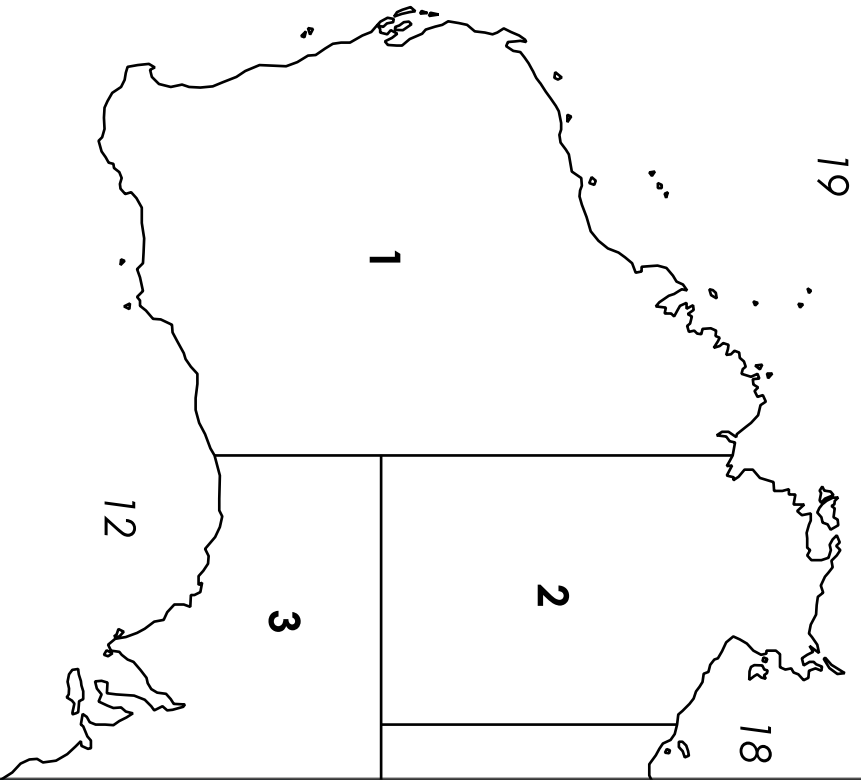
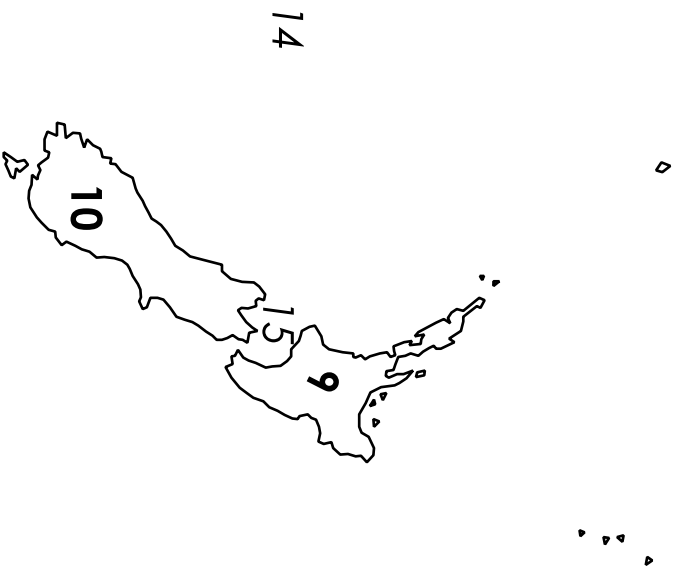
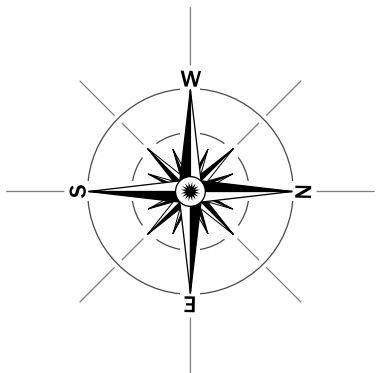


# Australia and New Zealand



**Preview**  
Please log in to download the printable version of this worksheet.



Name: \_\_\_\_\_

# Australia and New Zealand

Write down the name of the state, territory, region, or body of water for each number on the map.

1. \_\_\_\_\_

2. \_\_\_\_\_

3. \_\_\_\_\_

4. \_\_\_\_\_

5. \_\_\_\_\_

6. \_\_\_\_\_

7. \_\_\_\_\_

8. \_\_\_\_\_



15. \_\_\_\_\_

16. \_\_\_\_\_

17. \_\_\_\_\_

18. \_\_\_\_\_

19. \_\_\_\_\_

Super Teacher Worksheets - [www.superteacherworksheets.com](http://www.superteacherworksheets.com)

Australian Capital Territory	Great Australian Bight	North Island	South Australia	Timor Sea
Bass Strait	Gulf of Carpentaria	Northern Territory	South Island	Victoria
Cook Strait	Indian Ocean	Pacific Ocean	Tasmania	Western Australia
Coral Sea	New South Wales	Queensland	Tasman Sea	

## ANSWER KEY

# Australia and New Zealand

Write down the name of the state, territory, region, or body of water for each number on the map.

# Preview

Please log in to download  
the printable version of this worksheet.

