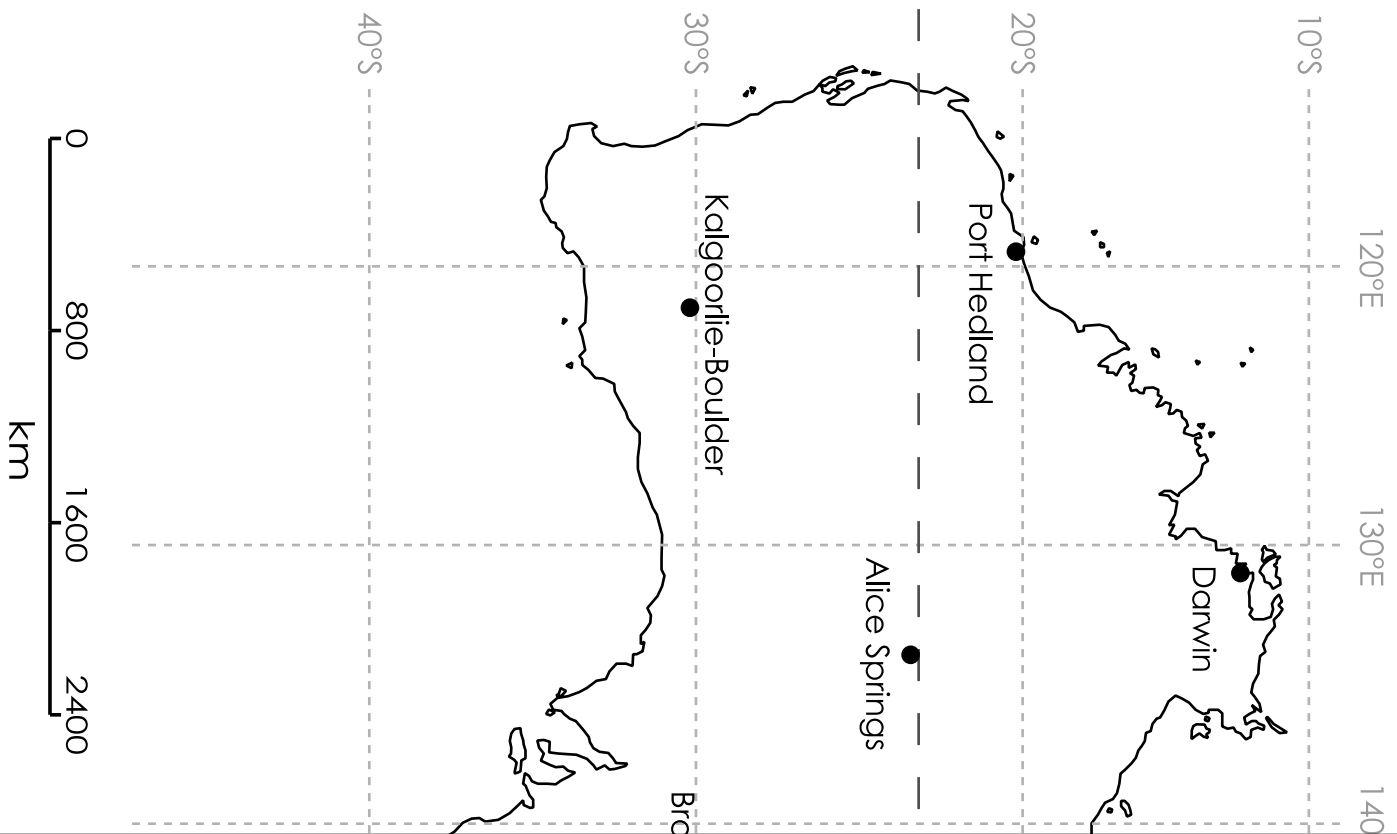
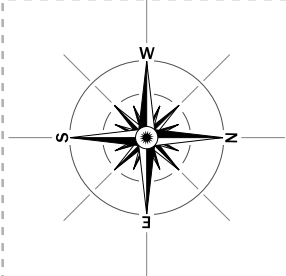
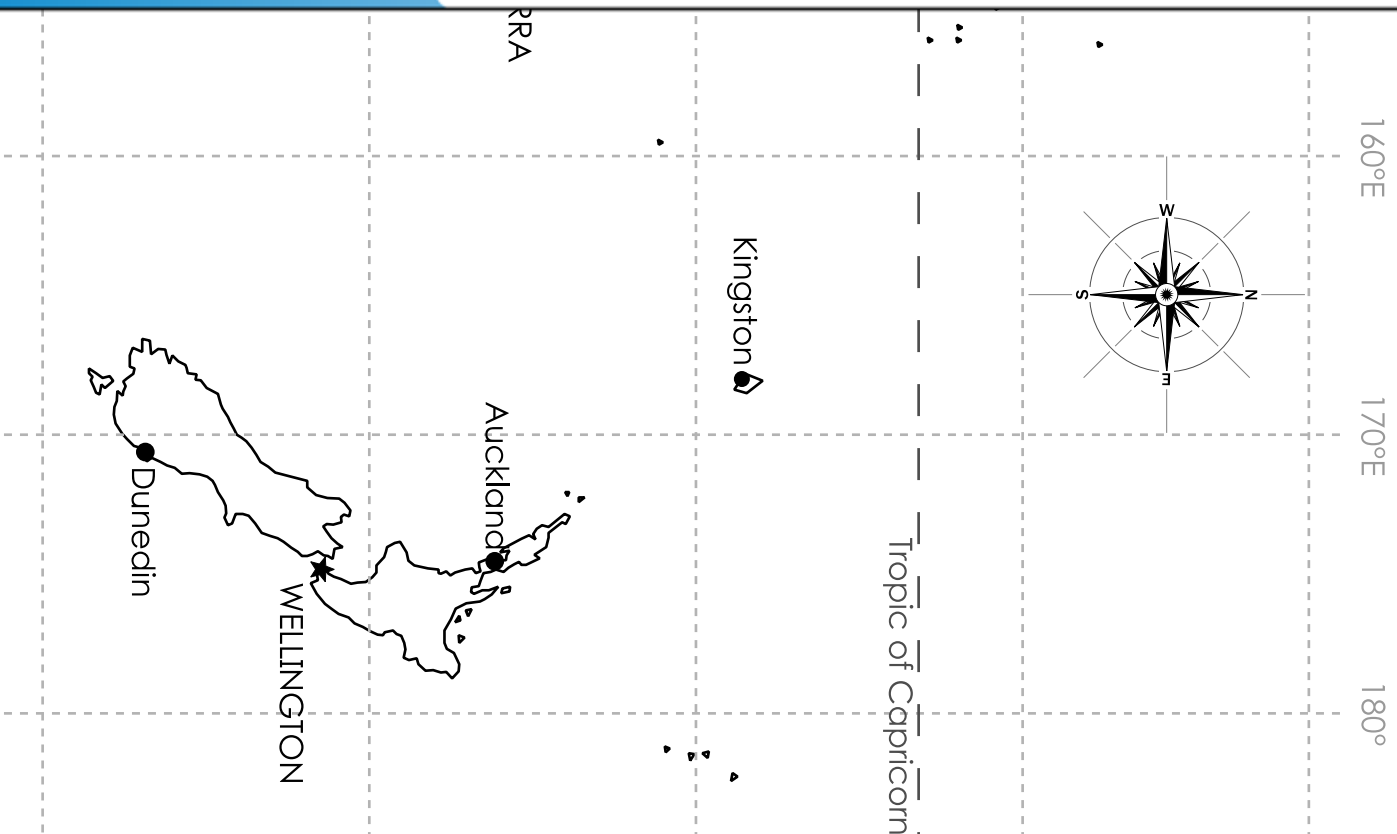


Australia and New Zealand



Preview

Please log in to download the printable version of this worksheet.



Name: _____

Australia & New Zealand Latitude and Longitude

Using the map, tell which cities of Australia and New Zealand can be found at each latitude and longitude coordinates.

Alice Springs	Canberra	Hobart	Mackay	Sydney
Auckland	Darwin	Kalgoorlie-Boulder	Melbourne	Townsville
Broken Hill	Dunedin	Kingston	Port Hedland	Wellington

a. 48°S, 147°E _____ b. 32°S, 141°E _____

c. 41°S, 174°E _____ d. 23°S, 134°E _____



i. 12°S, 131°E _____ j. 35°S, 149°E _____

k. 21°S, 149°E _____ l. 20°S, 118°E _____

m. 46°S, 170°E _____ n. 37°S, 145°E _____

o. 30°S, 121°E _____

ANSWER KEY

Australia & New Zealand Latitude and Longitude

Using the map, tell which cities of Australia and New Zealand can be found at each latitude and longitude coordinates.

Alice Springs	Canberra	Hobart	Mackay	Sydney
Auckland	Darwin	Kalgoorlie-Boulder	Melbourne	Townsville
Broken Hill	Dunedin	Kingston	Port Hedland	Wellington

Preview

Please log in to download
the printable version of this worksheet.



o. 30°S, 121°E Kalgoorlie-Boulder