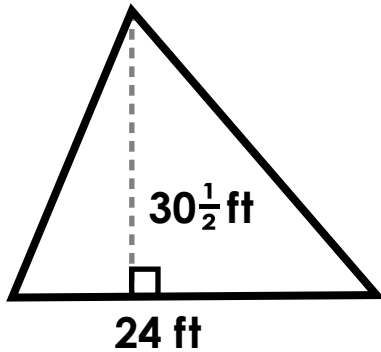


1.

Area of a Triangle

Calculate the area of the triangle.



2.

Area of a Triangle

Find the area of a triangle with the dimension below.

base = 16.3 cm

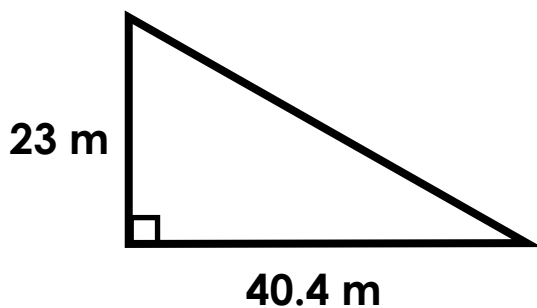
height = 21 cm



Preview

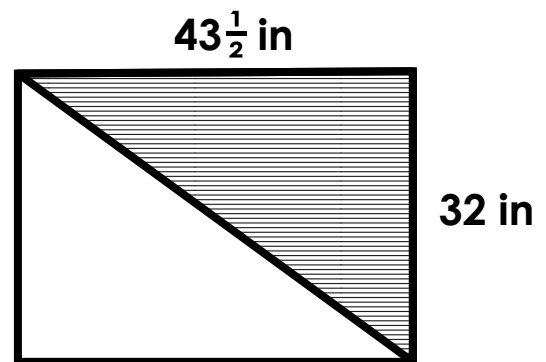
Please log in to download the printable version of this worksheet.

Calculate the area of the triangle.



Formula: $A = \frac{1}{2} \times b \times h$

Calculate the area of the shaded triangle.

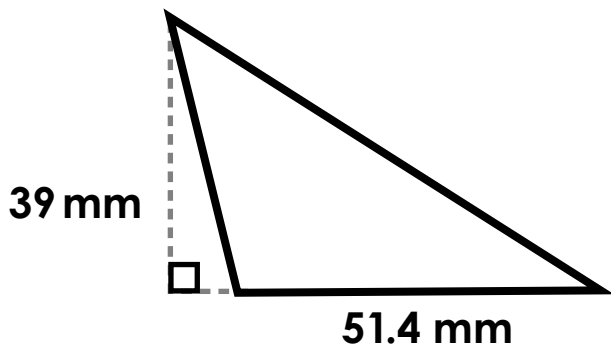


Formula: $A = \frac{1}{2} \times b \times h$

5.

Area of a Triangle

Calculate the area of the triangle.



6.

Area of a Triangle

Find the area of a triangle with the dimension below.

base = 17 in

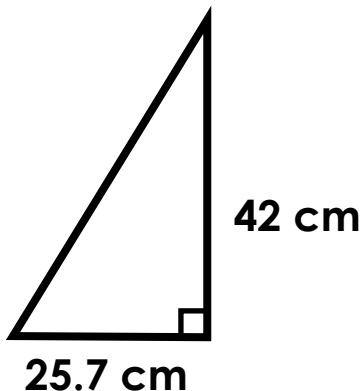
height = $14\frac{1}{2}$ in



Preview

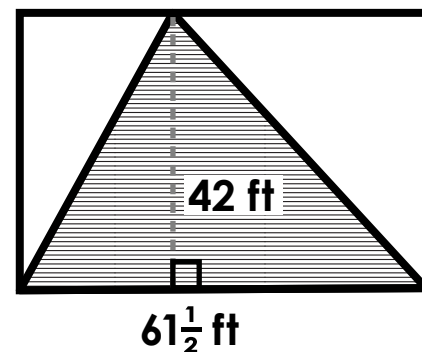
Please log in to download the printable version of this worksheet.

Calculate the area of the triangle.



Formula: $A = \frac{1}{2} \times b \times h$

Calculate the area of the shaded triangle.



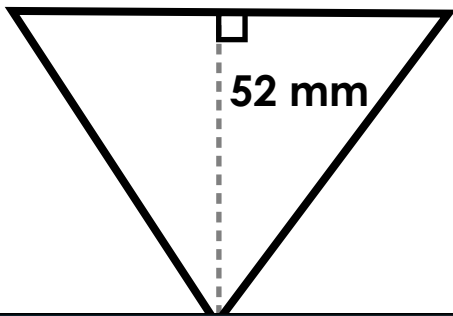
Formula: $A = \frac{1}{2} \times b \times h$

9.

Area of a Triangle

Calculate the area of the triangle.

72.6 mm



10.

Area of a Triangle

Find the area of a triangle with the dimension below.

base = $35\frac{1}{2}$ in

height = 16 in

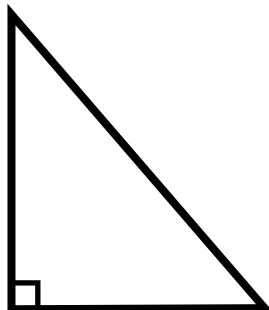


Preview

Please log in to download the printable version of this worksheet.

Calculate the area of the triangle.

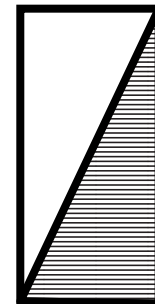
39 in



$33\frac{1}{2}$ in

Formula: $A = \frac{1}{2} \times b \times h$

Calculate the area of the shaded triangle.



46 cm

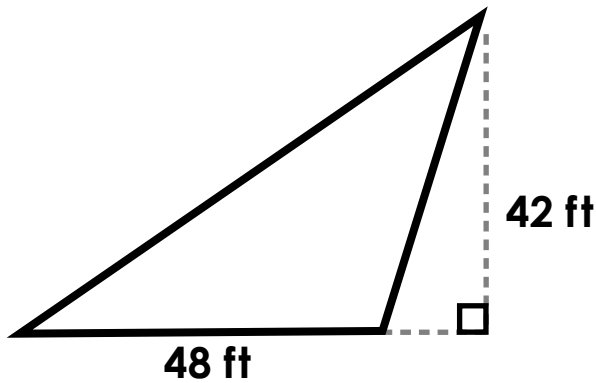
21.6 cm

Formula: $A = \frac{1}{2} \times b \times h$

13.

Area of a Triangle

Calculate the area of the triangle.

**14.**

Area of a Triangle

Find the area of a triangle with the dimension below.

base = 28 cm

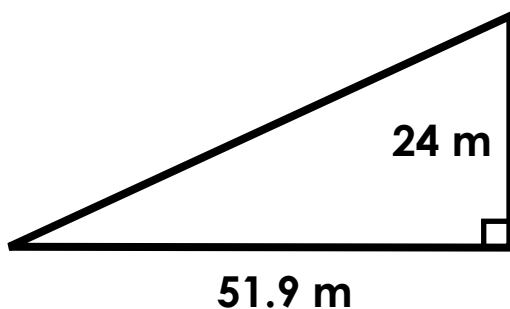
height = 19.2 cm



Preview

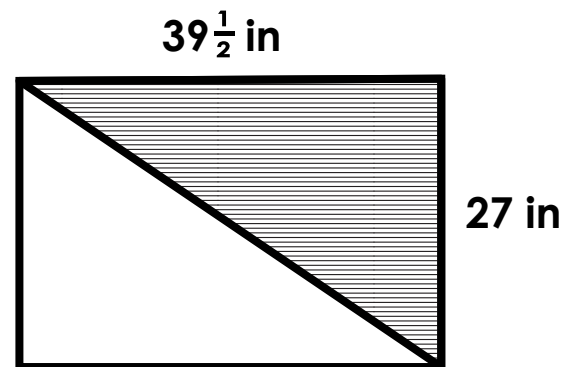
Please log in to download the printable version of this worksheet.

Calculate the area of the triangle.



Formula: $A = \frac{1}{2} \times b \times h$

Calculate the area of the shaded triangle.

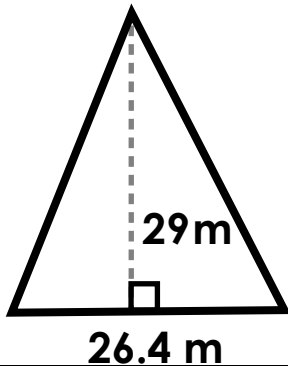


Formula: $A = \frac{1}{2} \times b \times h$

17.

Area of a Triangle

Calculate the area of the triangle.

**18.**

Area of a Triangle

Find the area of a triangle with the dimension below.

base = 22 ft

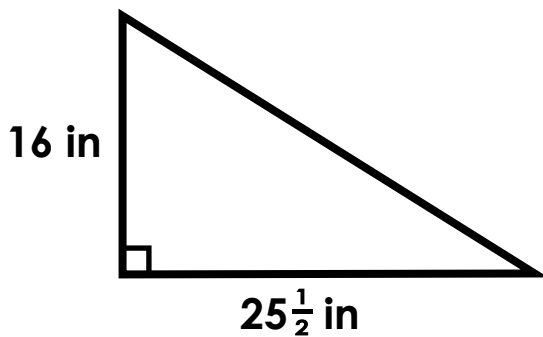
height = 45 ft



Preview

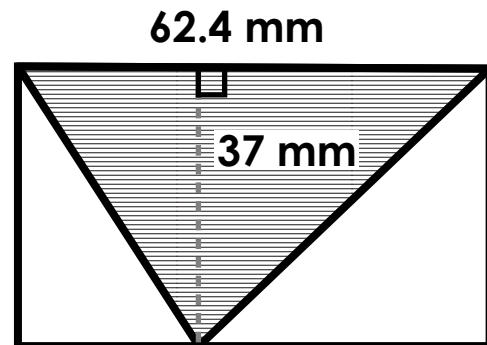
Please log in to download the printable version of this worksheet.

Calculate the area of the triangle.



Formula: $A = \frac{1}{2} \times b \times h$

Calculate the area of the shaded triangle.

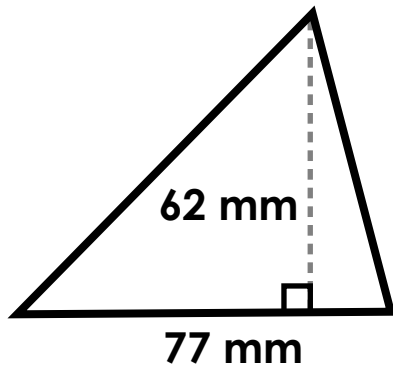


Formula: $A = \frac{1}{2} \times b \times h$

21.

Area of a Triangle

Calculate the area of the triangle.

**22.**

Area of a Triangle

Find the area of a triangle with the dimension below.

base = 32 in

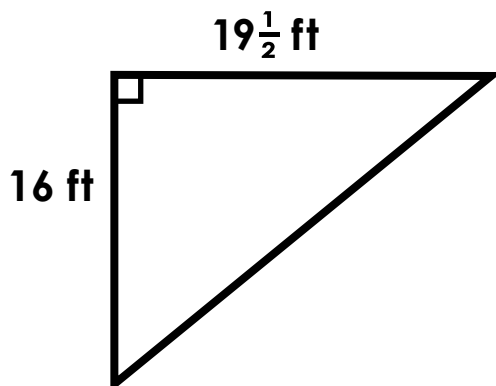
height = 27 in



Preview

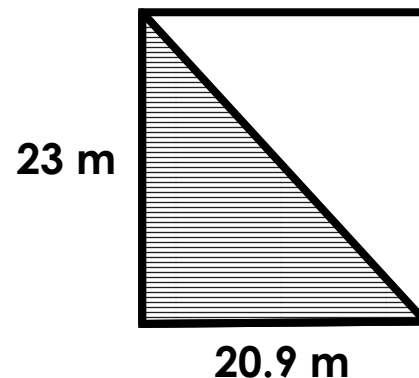
Please log in to download the printable version of this worksheet.

Calculate the area of the triangle.



Formula: $A = \frac{1}{2} \times b \times h$

Calculate the area of the shaded triangle.

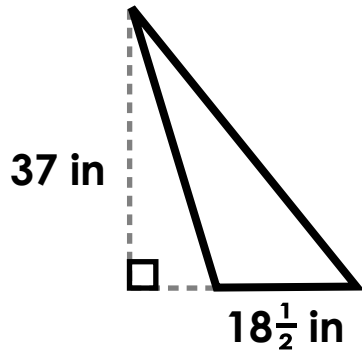


Formula: $A = \frac{1}{2} \times b \times h$

25.

Area of a Triangle

Calculate the area of the triangle.



26.

Area of a Triangle

Find the area of a triangle with the dimension below.

base = 10.6 m

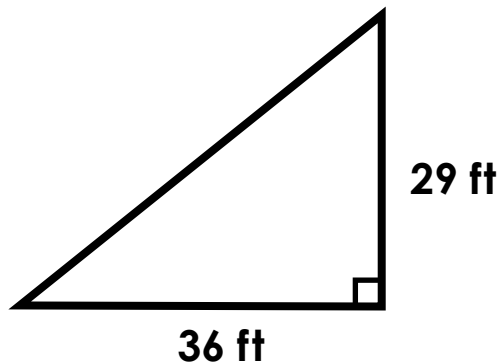
height = 33 m



Preview

Please log in to download the printable version of this worksheet.

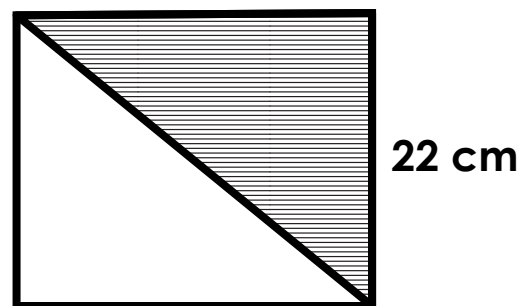
Calculate the area of the triangle.



Formula: $A = \frac{1}{2} \times b \times h$

Calculate the area of the shaded triangle.

26.7 cm



Formula: $A = \frac{1}{2} \times b \times h$

29.

Area of a Triangle

Calculate the area of the triangle.

30.

Area of a Triangle

Find the area of a triangle with



Preview

Please log in to download the printable version of this worksheet.

Formula: $A = \frac{1}{2} \times b \times h$

Formula: $A = \frac{1}{2} \times b \times h$

Name: _____

Task Cards: Area of a Triangle

1. area = _____

16. area = _____

2. area = _____

17. area = _____



13. area = _____

28. area = _____

14. area = _____

29. area = _____

15. area = _____

30. area = _____

ANSWER KEY

Task Cards: Area of a Triangle

1. area = 366 ft²

16. area = 533 $\frac{1}{4}$ in²

2. area = 171.15 cm²

17. area = 382.8 m²



13. area = 1,008 ft²

28. area = 293.7 cm²

14. area = 268.8 cm²

29. area = 862.6 m²

15. area = 622.8 m²

30. area = 540 $\frac{1}{2}$ in²