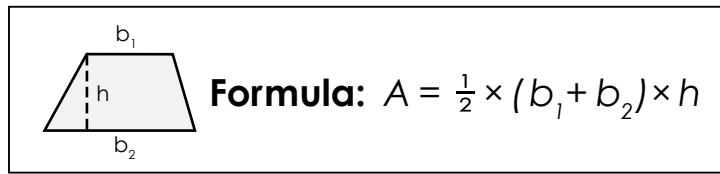


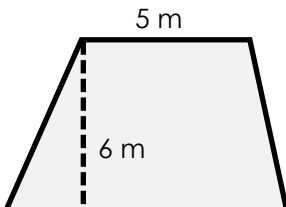
Name: \_\_\_\_\_

# Area of a Trapezoid

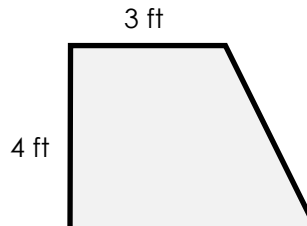


Find the area of each trapezoid.

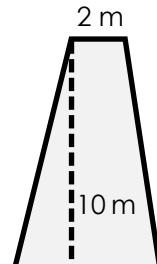
a.



b.

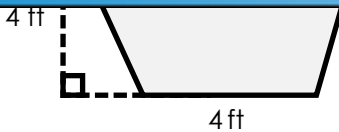


c.

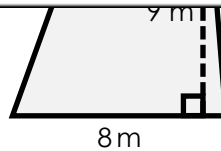


# Preview

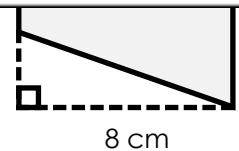
Please log in to download the printable version of this worksheet.



area = \_\_\_\_\_

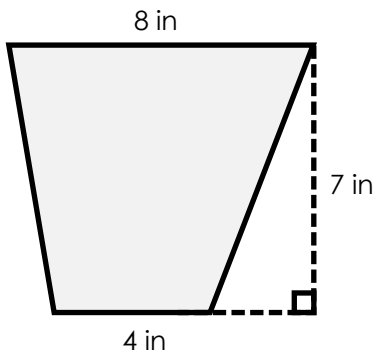


area = \_\_\_\_\_



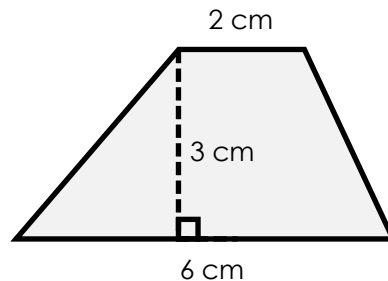
area = \_\_\_\_\_

g.



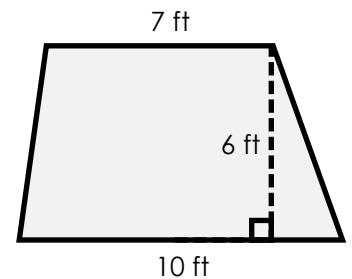
area = \_\_\_\_\_

h.



area = \_\_\_\_\_

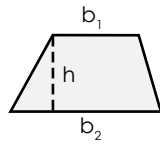
i.



area = \_\_\_\_\_

## ANSWER KEY


### Area of a Trapezoid



Formula:  $A = \frac{1}{2} \times (b_1 + b_2) \times h$

Find the area of each trapezoid.

a.



b.



c.



# Preview

Please log in to download  
the printable version of this worksheet.

