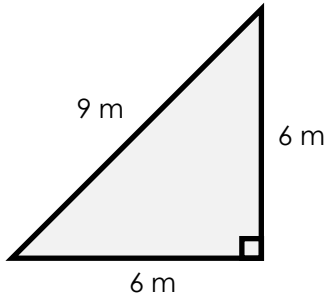


Name: _____

Area and Perimeter of a Triangle

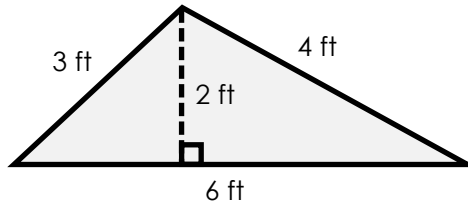
Find the area and perimeter of each triangle.

a.



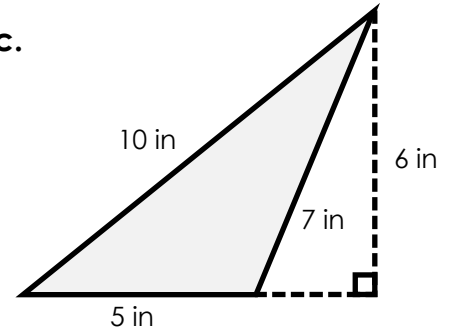
area = _____

b.



area = _____

c.



area = _____



Preview

Please log in to download the printable version of this worksheet.

area = _____

area = _____

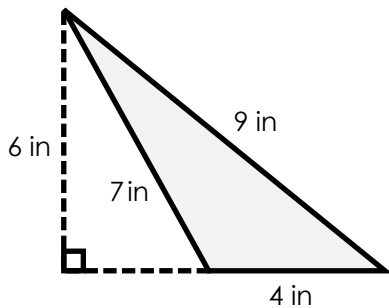
area = _____

perimeter = _____

perimeter = _____

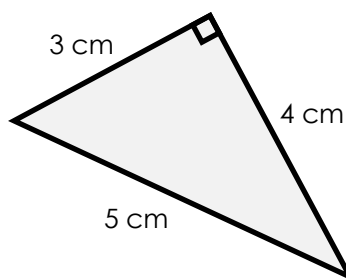
perimeter = _____

g.



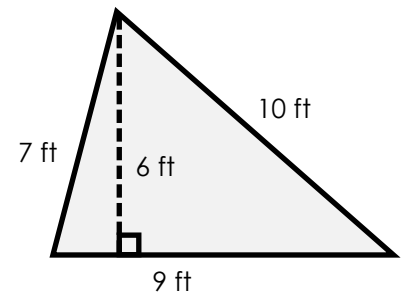
area = _____

h.



area = _____

i.



area = _____

perimeter = _____

perimeter = _____

perimeter = _____

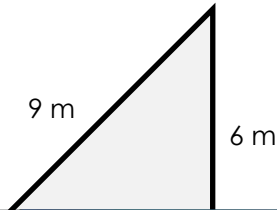
ANSWER KEY

Area and Perimeter of a Triangle

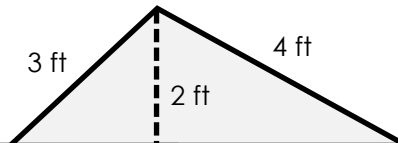
NOTE: The measurements of the triangles have been rounded to the nearest whole number. Triangles are not drawn to scale.

Find the area and perimeter of each triangle.

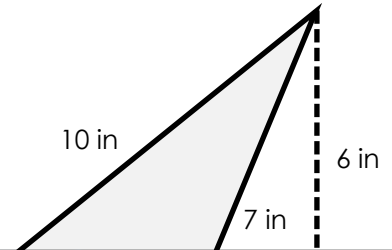
a.



b.



c.



Preview

Please log in to download the printable version of this worksheet.



area = 12 in²

area = 6 cm²

area = 21 ft²

perimeter = 20 in

perimeter = 12 cm

perimeter = 26 ft