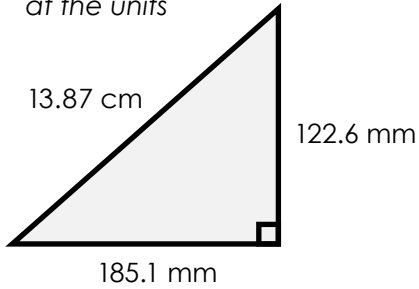


Name: _____

Area and Perimeter of a Triangle

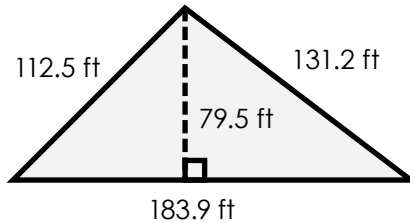
Find the area and perimeter of each triangle.

a. *Hint: Look carefully at the units*



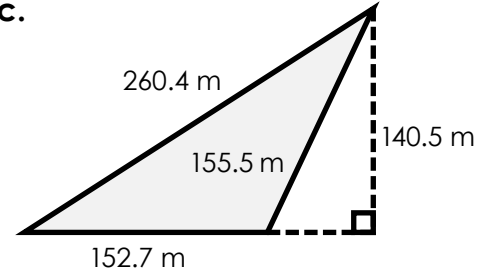
area = _____

b.



area = _____

c.



area = _____



Preview

Please log in to download the printable version of this worksheet.

area = _____

area = _____

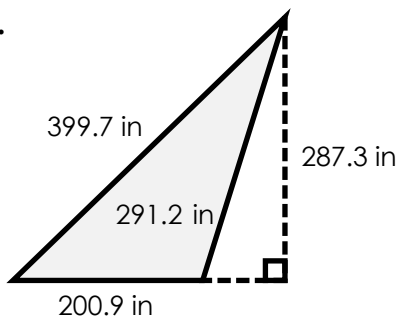
area = _____

perimeter = _____

perimeter = _____

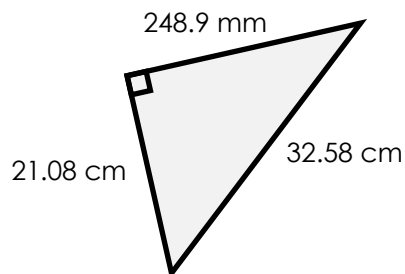
perimeter = _____

g.



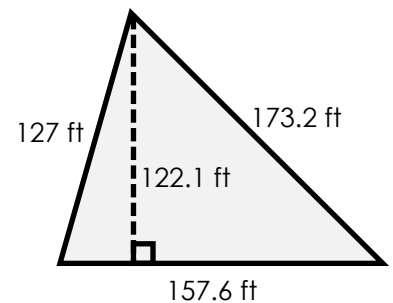
area = _____

h. *Hint: Look carefully at the units*



area = _____

i.



area = _____

perimeter = _____

perimeter = _____

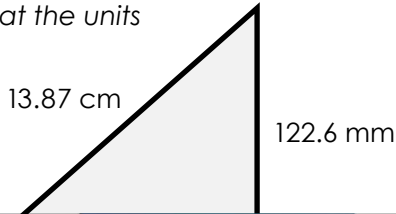
perimeter = _____

ANSWER KEY

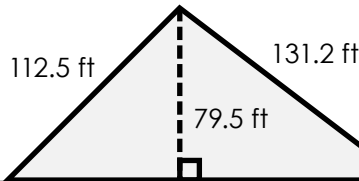
Area and Perimeter of a Triangle

Find the area and perimeter of each triangle.

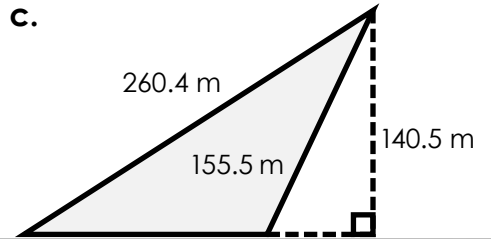
a. *Hint: Look carefully at the units*



b.



c.



Preview

Please log in to download
the printable version of this worksheet.



area = 20,007.200 in

area = 7,020.100 cm

area = 7,021.100 m

perimeter = 891.8 in

perimeter = 785.5 mm or 78.55 cm

perimeter = 457.8 ft