

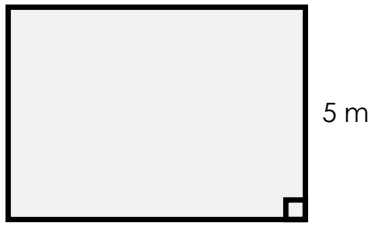
Name: _____

Area of a Parallelogram

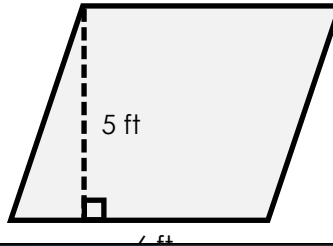
Formula: $A = b \times h$

Find the area of each parallelogram.

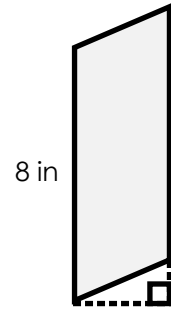
a.



b.

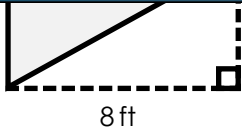


c.



Preview

Please log in to download the printable version of this worksheet.



area = _____

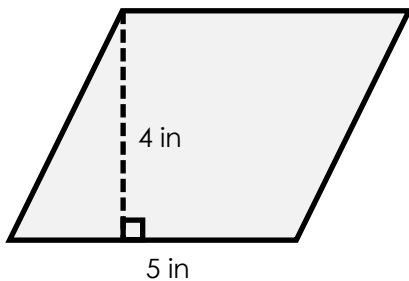


area = _____



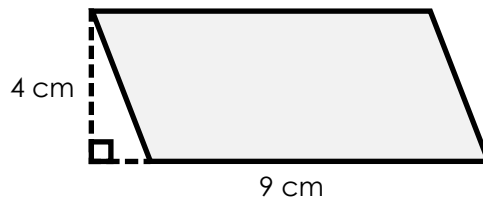
area = _____

g.



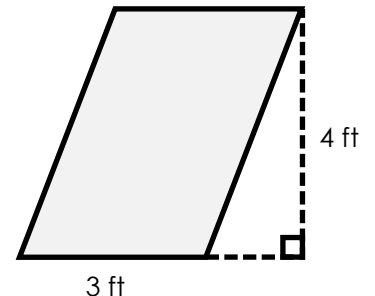
area = _____

h.



area = _____

i.



area = _____


ANSWER KEY

Area of a Parallelogram

$$\text{Formula: } A = b \times h$$

Find the area of each parallelogram.

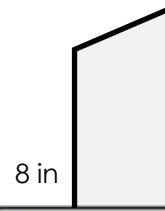
a.



b.



c.



Preview

Please log in to download
the printable version of this worksheet.

