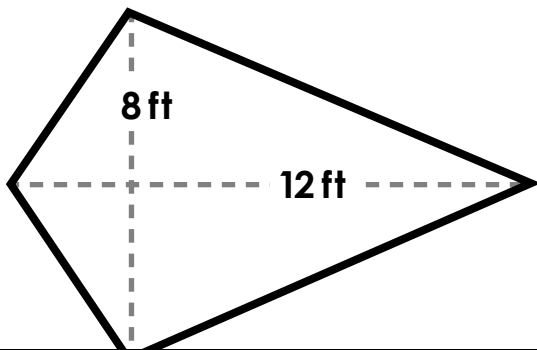


1.

Area of Kites and Rhombuses

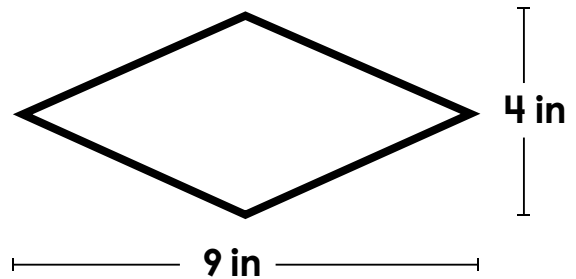
Find the **area** of the kite.
Remember to include the units
in your answer.



2.

Area of Kites and Rhombuses

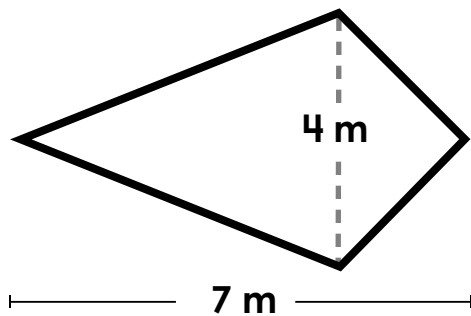
Find the **area** of the rhombus.
Remember to include the units
in your answer.



Preview

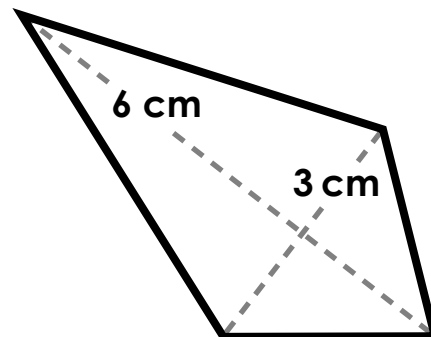
Please log in to download
the printable version of this worksheet.

Find the **area** of the kite.
Remember to include the units
in your answer.



area: _____

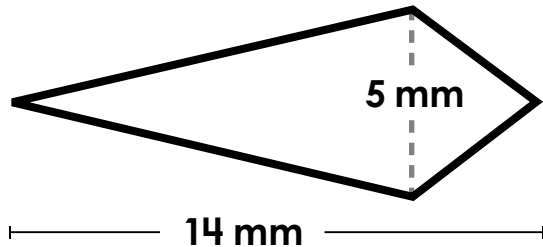
Find the **area** of the kite.
Remember to include the units
in your answer.



area: _____

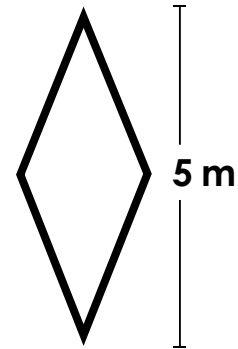
5. Area of Kites and Rhombuses

Find the **area** of the kite.
Remember to include the units
in your answer.



6. Area of Kites and Rhombuses

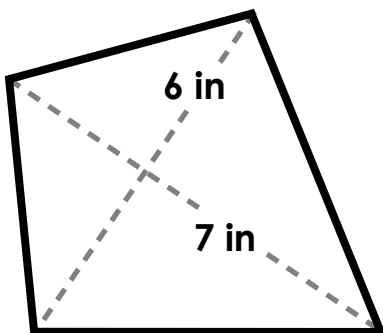
Find the **area** of the rhombus.
Remember to include the units
in your answer.



Preview

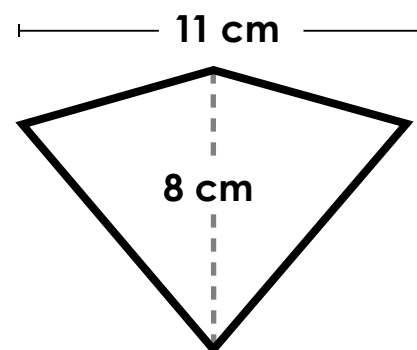
Please log in to download
the printable version of this worksheet.

Find the **area** of the kite.
Remember to include the units
in your answer.



area: _____

Find the **area** of the kite.
Remember to include the units
in your answer.

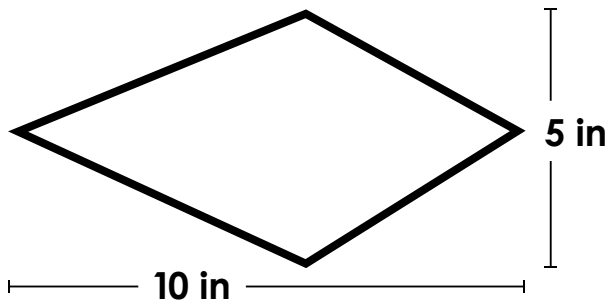


area: _____

9.

Area of Kites and Rhombuses

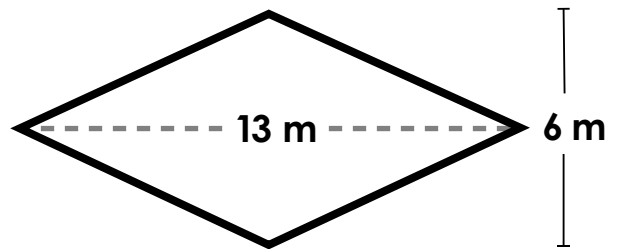
Find the **area** of the kite.
Remember to include the units
in your answer.



10.

Area of Kites and Rhombuses

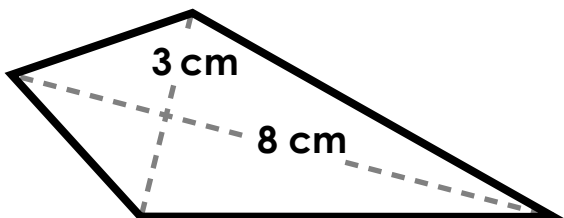
Find the **area** of the rhombus.
Remember to include the units
in your answer.



Preview

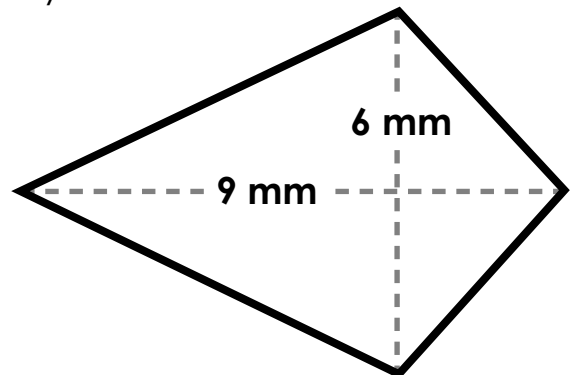
Please log in to download
the printable version of this worksheet.

Find the **area** of the kite.
Remember to include the units
in your answer.



area: _____

Find the **area** of the kite.
Remember to include the units
in your answer.

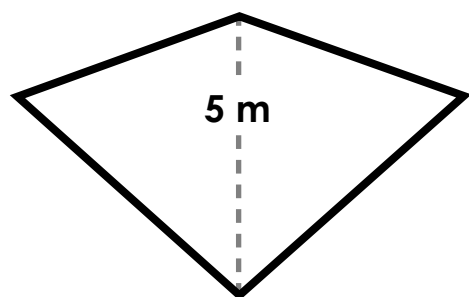


area: _____

13.

Area of Kites and Rhombuses

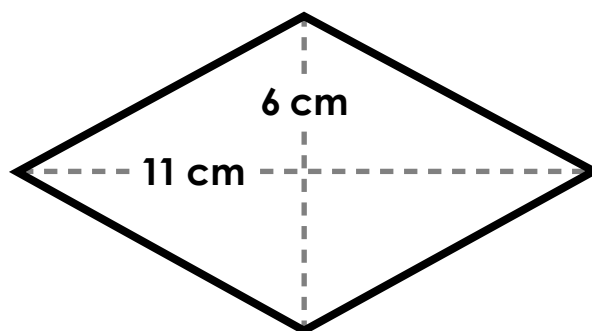
Find the **area** of the kite.
Remember to include the units
in your answer.



14.

Area of Kites and Rhombuses

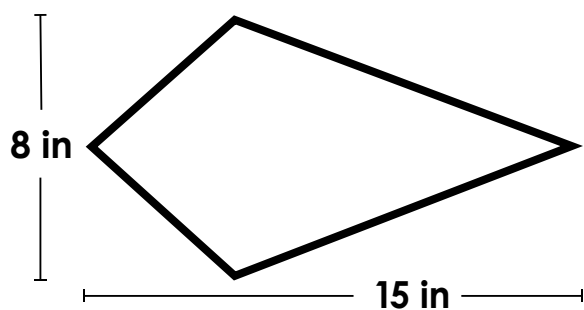
Find the **area** of the rhombus.
Remember to include the units
in your answer.



Preview

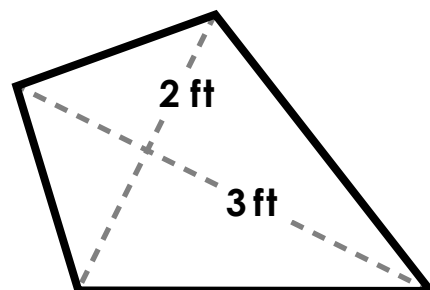
Please log in to download
the printable version of this worksheet.

Find the **area** of the kite.
Remember to include the units
in your answer.



area: _____

Find the **area** of the kite.
Remember to include the units
in your answer.

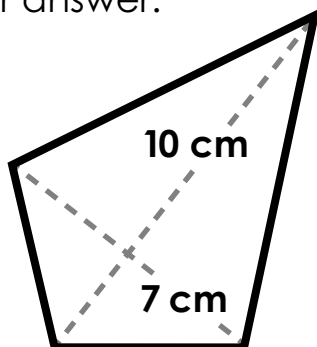


area: _____

17.

Area of Kites and Rhombuses

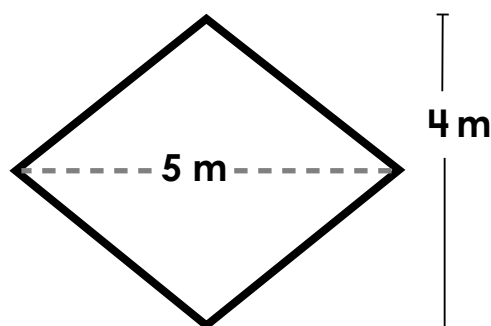
Find the **area** of the kite.
Remember to include the units
in your answer.



18.

Area of Kites and Rhombuses

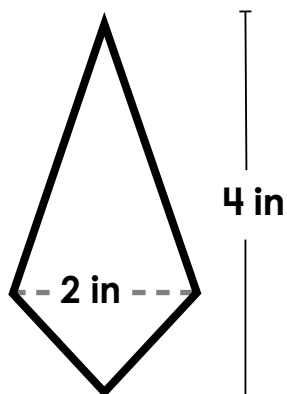
Find the **area** of the rhombus.
Remember to include the units
in your answer.



Preview

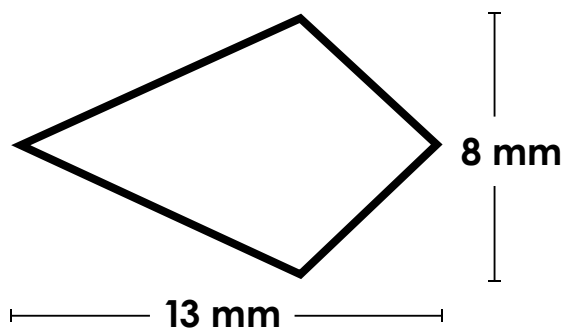
Please log in to download
the printable version of this worksheet.

Find the **area** of the kite.
Remember to include the units
in your answer.



area: _____

Find the **area** of the kite.
Remember to include the units
in your answer.

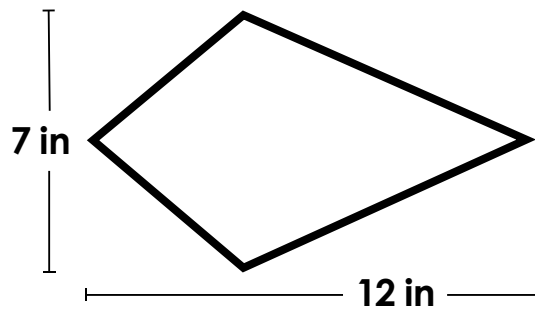


area: _____

21.

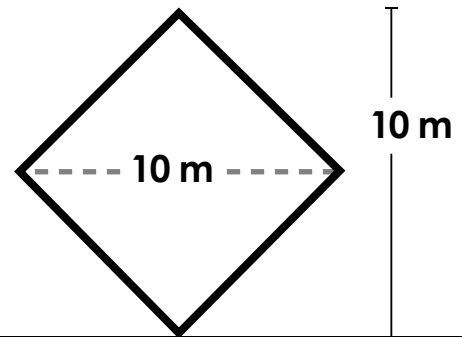
Area of Kites and Rhombuses

Find the **area** of the kite.
Remember to include the units
in your answer.

**22.**

Area of Kites and Rhombuses

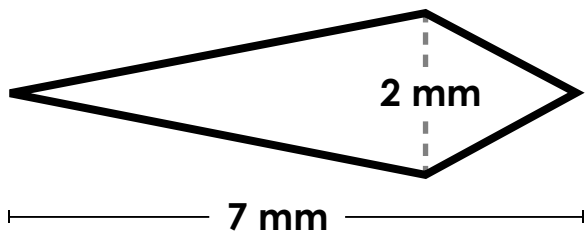
Find the **area** of the rhombus.
Remember to include the units
in your answer.



Preview

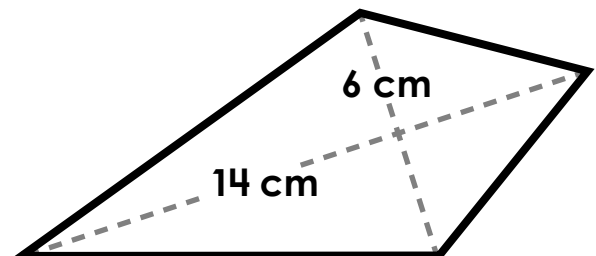
Please log in to download
the printable version of this worksheet.

Find the **area** of the kite.
Remember to include the units
in your answer.



area: _____

Find the **area** of the kite.
Remember to include the units
in your answer.

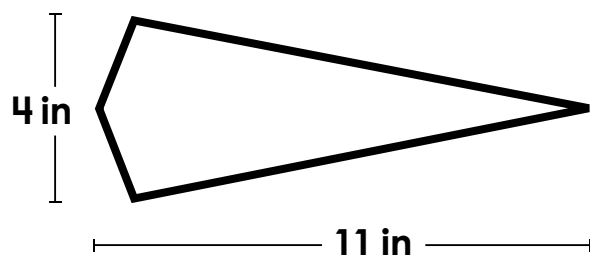


area: _____

25.

Area of Kites and Rhombuses

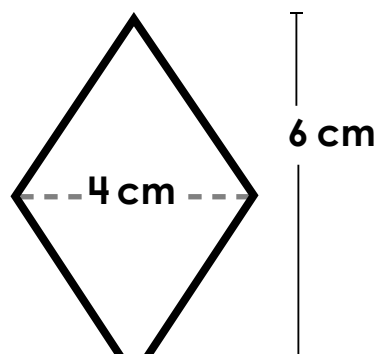
Find the **area** of the kite.
Remember to include the units
in your answer.



26.

Area of Kites and Rhombuses

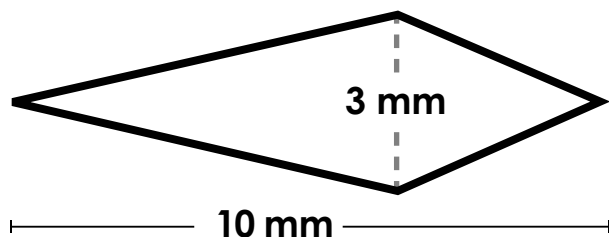
Find the **area** of the rhombus.
Remember to include the units
in your answer.



Preview

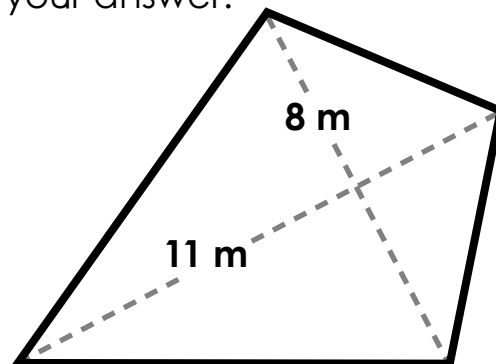
Please log in to download
the printable version of this worksheet.

Find the **area** of the kite.
Remember to include the units
in your answer.



area: _____

Find the **area** of the kite.
Remember to include the units
in your answer.



area: _____

29.

Area of Kites and Rhombuses

Find the **area** of the kite.
Remember to include the units
in your answer.

30.

Area of Kites and Rhombuses

Find the **area** of the rhombus.
Remember to include the units
in your answer.



Preview

Please log in to download
the printable version of this worksheet.

area: _____

area: _____

Name: _____

Task Cards: Area of Kites and Rhombuses

1. area = _____

16. area = _____

2. area = _____

17. area = _____



13. area = _____

28. area = _____

14. area = _____

29. area = _____

15. area = _____

30. area = _____

ANSWER KEY

Task Cards: Area of Kites and Rhombuses

1. area = 48 ft²

16. area = 3 ft²

2. area = 18 in²

17. area = 35 cm²

Preview

Please log in to download
the printable version of this worksheet.



13. area = 20 m²

28. area = 44 m²

14. area = 33 cm²

29. area = 70 in²

15. area = 60 in²

30. area = 40 cm²