

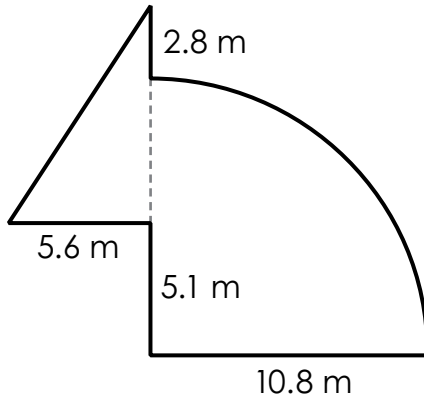
Name: _____

Advanced

Area of an Irregular Shape

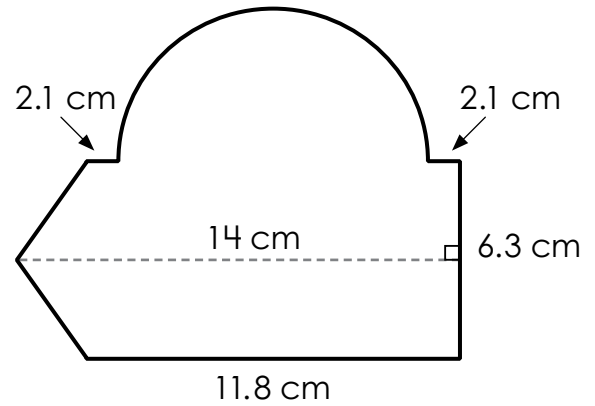
Find the area of each shape. Use 3.14 for pi. Round answers to the nearest hundredth. Include units.

1.



answer = _____

2.



answer = _____



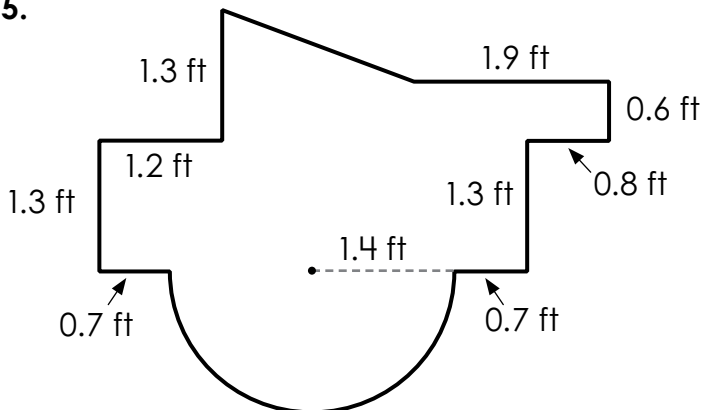
Preview

Please log in to download
the printable version of this worksheet.

answer = _____

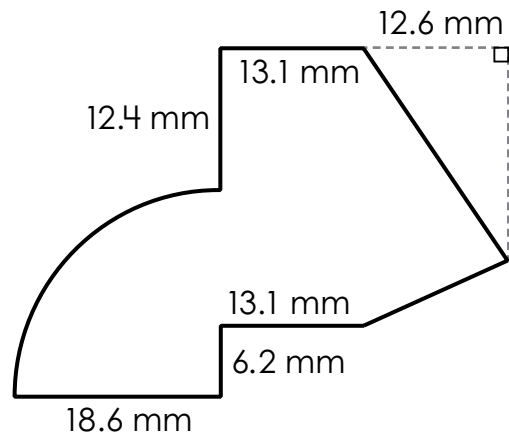
answer = _____

5.



answer = _____

6.



answer = _____

ANSWER KEY

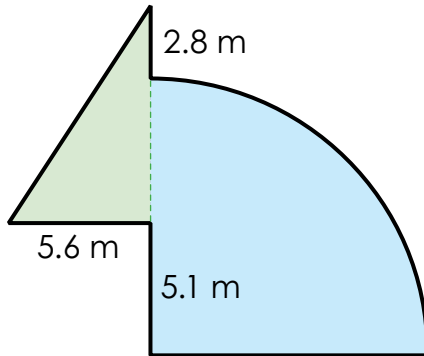
Advanced

Note to teacher: shapes may be divided differently.

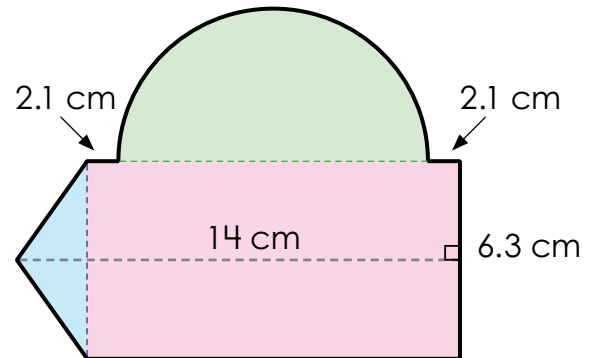
Area of an Irregular Shape

Find the area of each shape. Use 3.14 for pi. Round answers to the nearest hundredth. Include units.

1.



2.



Preview

Please log in to download
the printable version of this worksheet.

