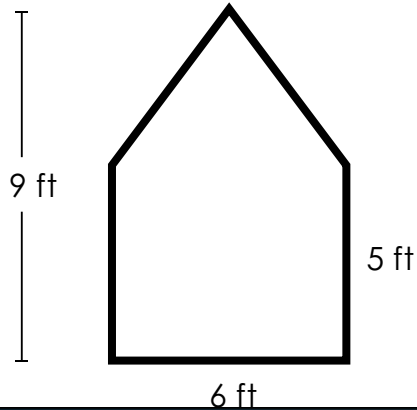


1.

Area of an Irregular Shape

(Rectangles and Triangles)

Find the area of the shape.
Include units in your answer.

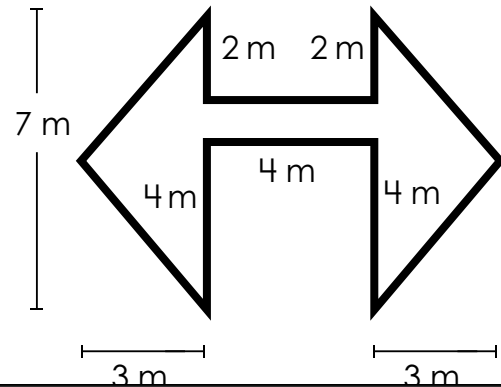


2.

Area of an Irregular Shape

(Rectangles and Triangles)

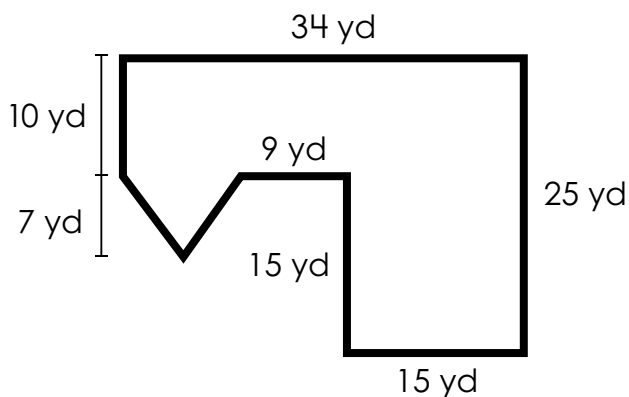
Find the area of the shape.
Include units in your answer.



Preview

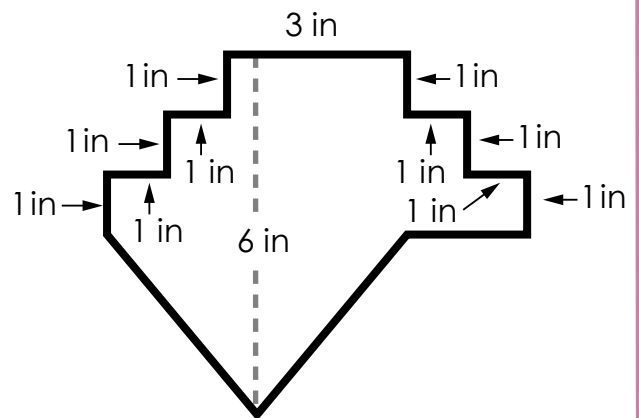
Please log in to download
the printable version of this worksheet.

Find the area of the shape.
Include units in your answer.



Area: _____

Find the area of the shape.
Include units in your answer.



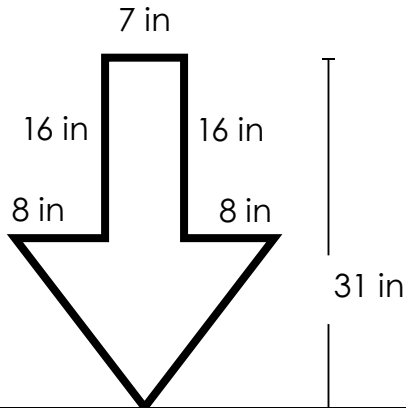
Area: _____

5.

Area of an Irregular Shape

(Rectangles and Triangles)

Find the area of the shape.
Include units in your answer.

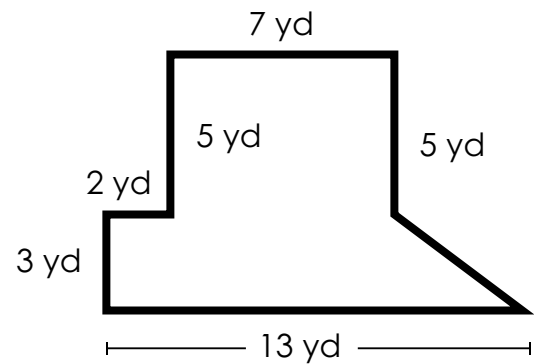


6.

Area of an Irregular Shape

(Rectangles and Triangles)

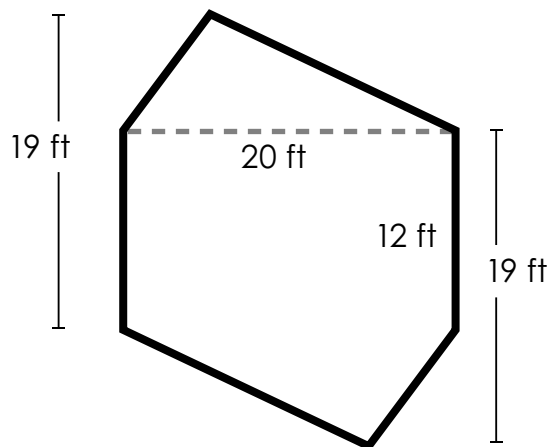
Find the area of the shape.
Include units in your answer.



Preview

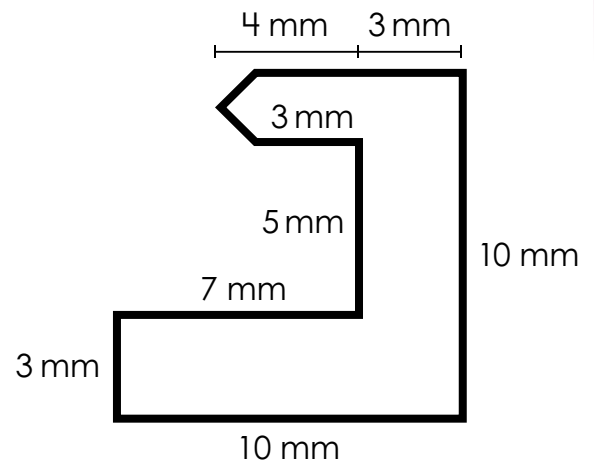
Please log in to download
the printable version of this worksheet.

Find the area of the shape.
Include units in your answer.



Area: _____

Find the area of the shape.
Include units in your answer.



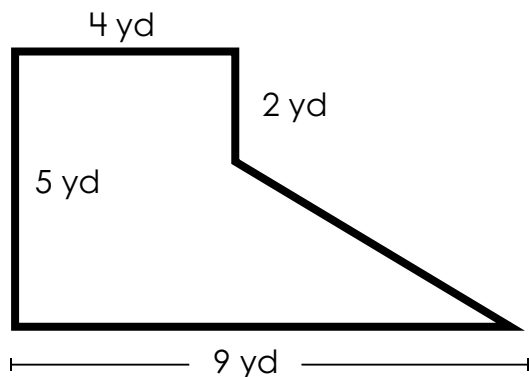
Area: _____

9.

Area of an Irregular Shape

(Rectangles and Triangles)

Find the area of the shape.
Include units in your answer.

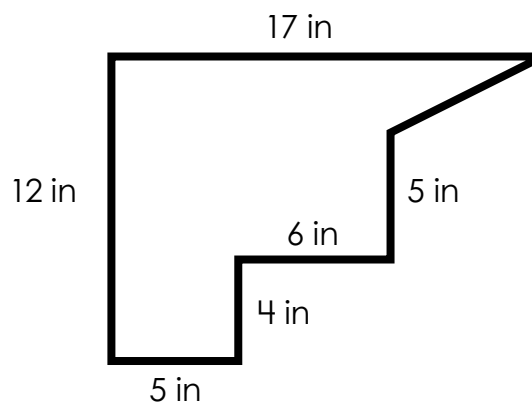


10.

Area of an Irregular Shape

(Rectangles and Triangles)

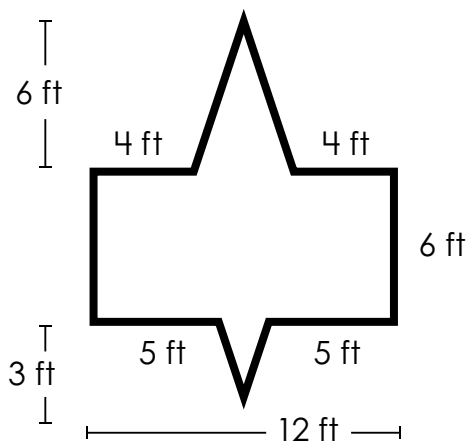
Find the area of the shape.
Include units in your answer.



Preview

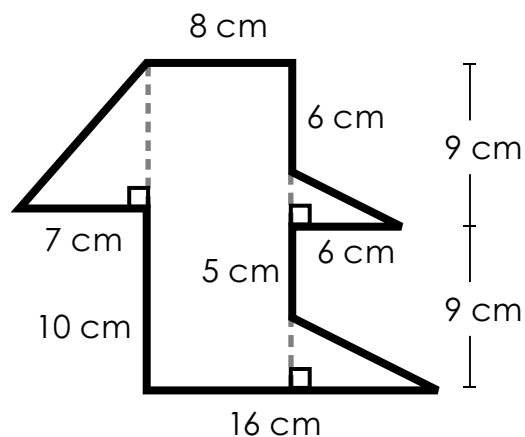
Please log in to download
the printable version of this worksheet.

Find the area of the shape.
Include units in your answer.



Area: _____

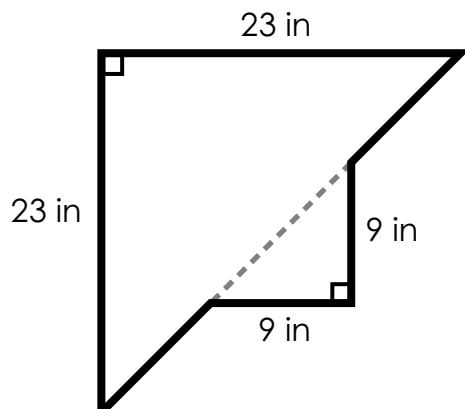
Find the area of the shape.
Include units in your answer.



Area: _____

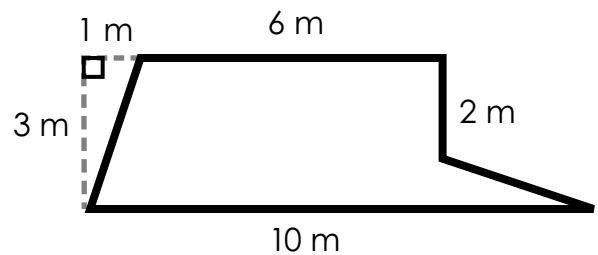
13. Area of an Irregular Shape (Rectangles and Triangles)

Find the area of the shape.
Include units in your answer.



14. Area of an Irregular Shape (Rectangles and Triangles)

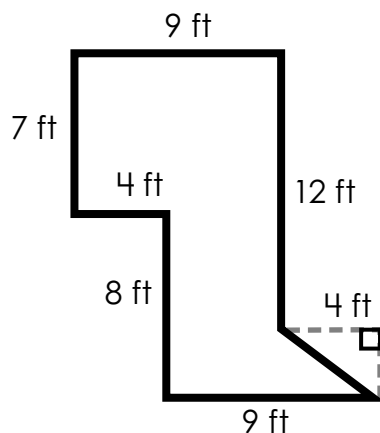
Find the area of the shape.
Include units in your answer.



Preview

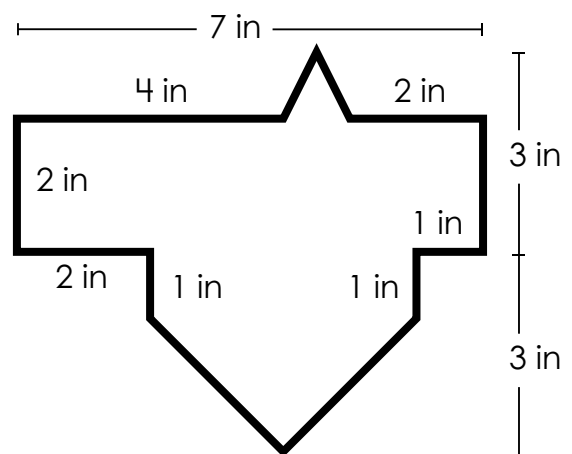
Please log in to download
the printable version of this worksheet.

Find the area of the shape.
Include units in your answer.



Area: _____

Find the area of the shape.
Include units in your answer.

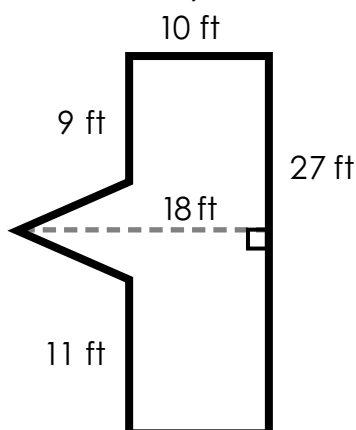


Area: _____

17.

Area of an Irregular Shape (Rectangles and Triangles)

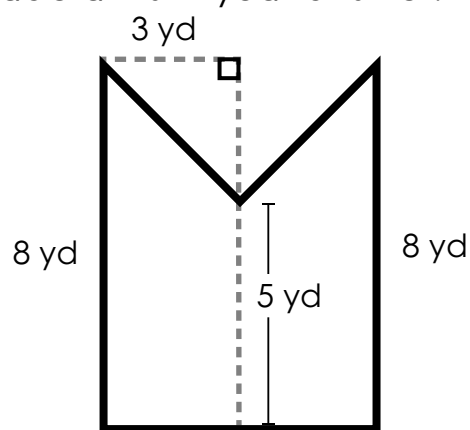
Find the area of the shape.
Include units in your answer.



18.

Area of an Irregular Shape (Rectangles and Triangles)

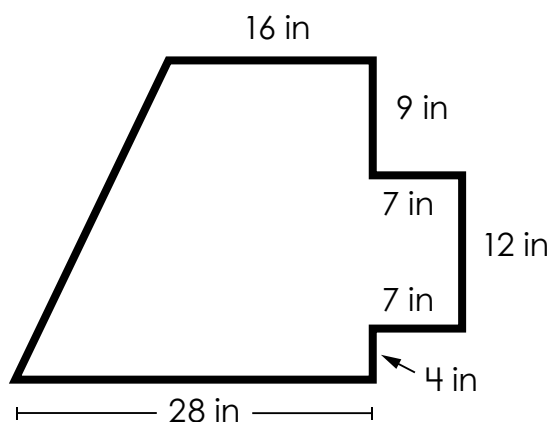
Find the area of the shape.
Include units in your answer.



Preview

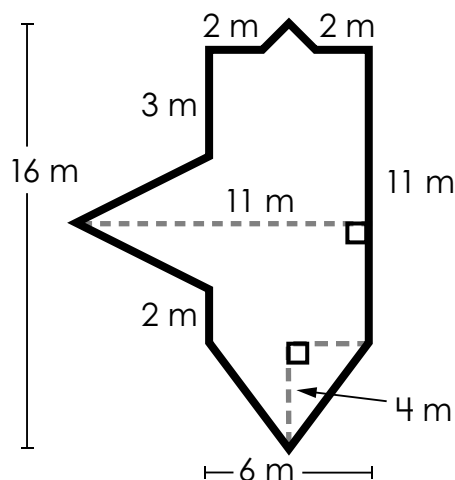
Please log in to download
the printable version of this worksheet.

Find the area of the shape.
Include units in your answer.



Area: _____

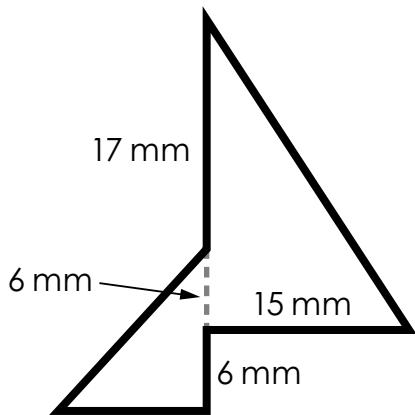
Find the area of the shape.
Include units in your answer.



Area: _____

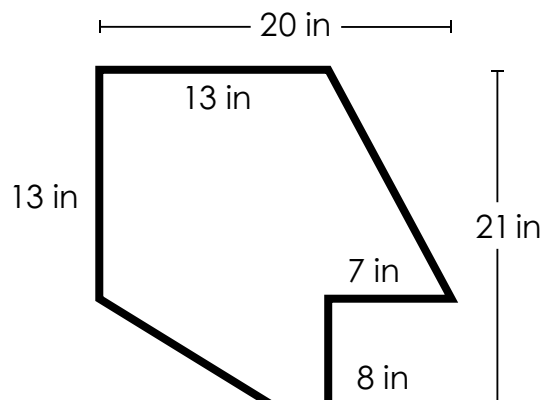
21. Area of an Irregular Shape (Rectangles and Triangles)

Find the area of the shape.
Include units in your answer.



22. Area of an Irregular Shape (Rectangles and Triangles)

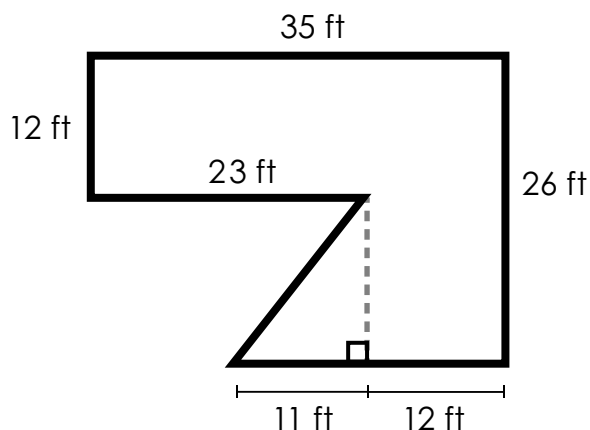
Find the area of the shape.
Include units in your answer.



Preview

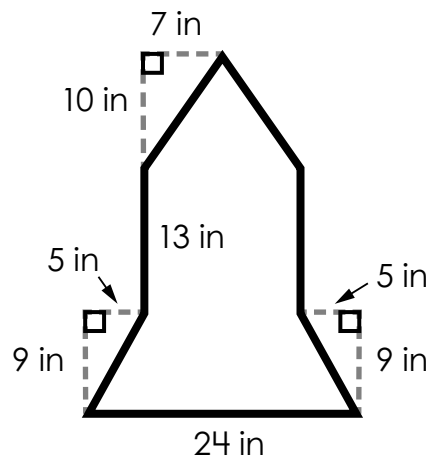
Please log in to download
the printable version of this worksheet.

Find the area of the shape.
Include units in your answer.



Area: _____

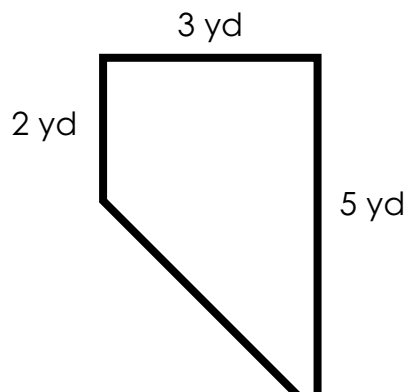
Find the area of the shape.
Include units in your answer.



Area: _____

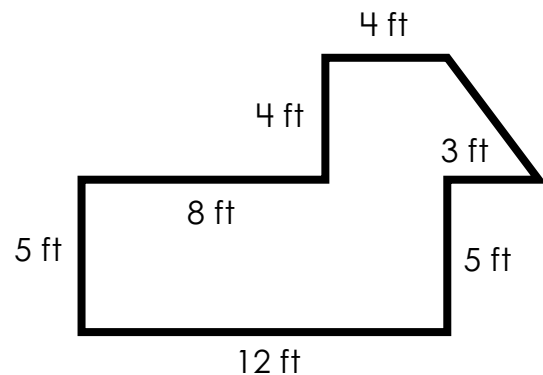
25. Area of an Irregular Shape (Rectangles and Triangles)

Find the area of the shape.
Include units in your answer.



26. Area of an Irregular Shape (Rectangles and Triangles)

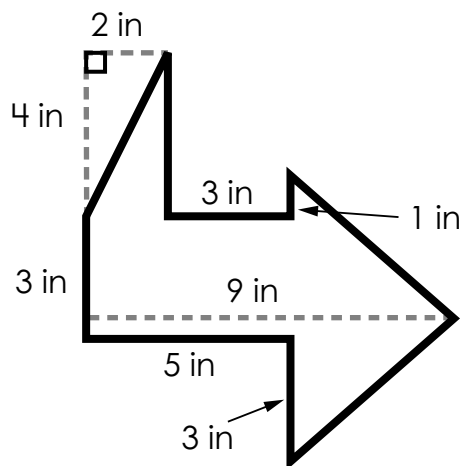
Find the area of the shape.
Include units in your answer.



Preview

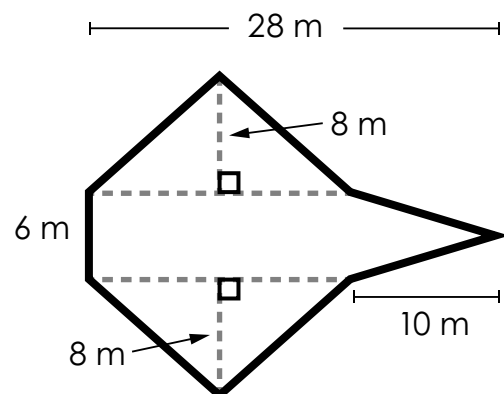
Please log in to download
the printable version of this worksheet.

Find the area of the shape.
Include units in your answer.



Area: _____

Find the area of the shape.
Include units in your answer.



Area: _____

29.

Area of an Irregular Shape

(Rectangles and Triangles)

Find the area of the shape.
Include units in your answer.

30.

Area of an Irregular Shape

(Rectangles and Triangles)

Find the area of the shape.
Include units in your answer.

6 in



Preview

Please log in to download
the printable version of this worksheet.

Area: _____

Area: _____

Name: _____

Area of an Irregular Shape (Rectangles and Triangles)

1. Area = _____

16. Area = _____

2. Area = _____

17. Area = _____



13. Area = _____

28. Area = _____

14. Area = _____

29. Area = _____

15. Area = _____

30. Area = _____

ANSWER KEY

Area of an Irregular Shape (Rectangles and Triangles)

1. Area = 42 ft²

16. Area = 22.5 in²

2. Area = 25 m²

17. Area = 298 ft²



13. Area = 305 in²

28. Area = 282 m²

14. Area = 21 m²

29. Area = 212 ft²

15. Area = 109 ft²

30. Area = 90.5 in²