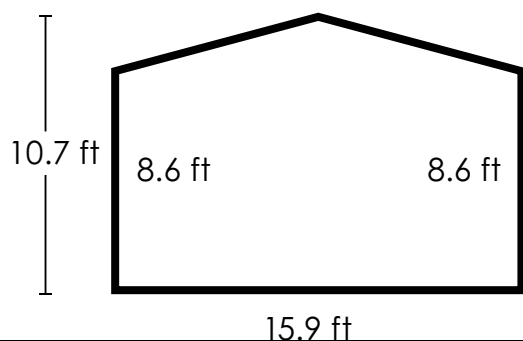


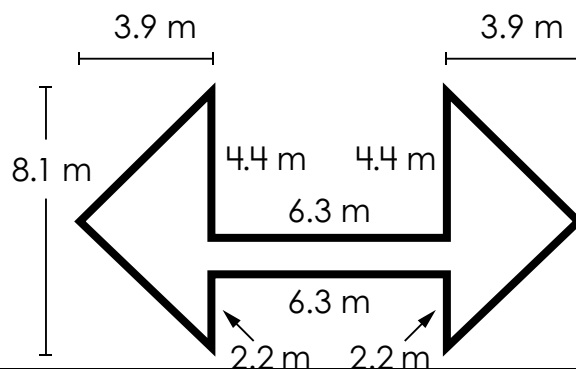
## 1. Area of an Irregular Shape (Rectangles and Triangles)

Find the area of the shape.  
Do not round. Include units  
in your answer.



## 2. Area of an Irregular Shape (Rectangles and Triangles)

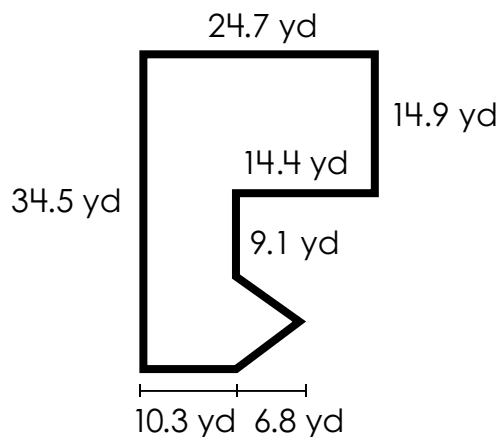
Find the area of the shape.  
Do not round. Include units  
in your answer.



# Preview

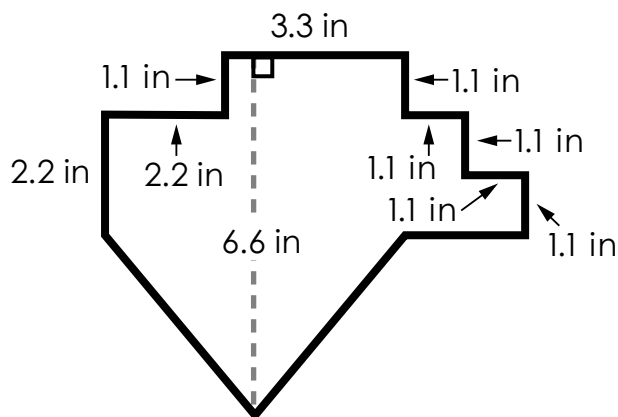
Please log in to download  
the printable version of this worksheet.

Find the area of the shape.  
Do not round. Include units  
in your answer.



Area: \_\_\_\_\_

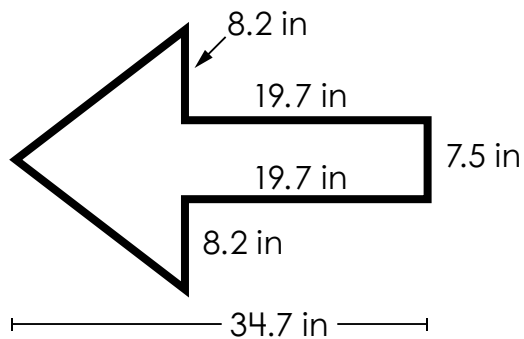
Find the area of the shape.  
Do not round. Include units  
in your answer.



Area: \_\_\_\_\_

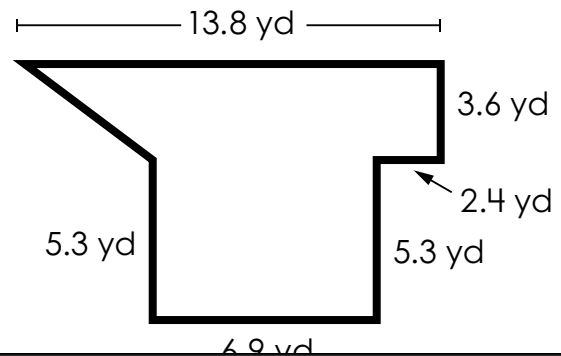
## 5. Area of an Irregular Shape (Rectangles and Triangles)

Find the area of the shape.  
Do not round. Include units  
in your answer.



## 6. Area of an Irregular Shape (Rectangles and Triangles)

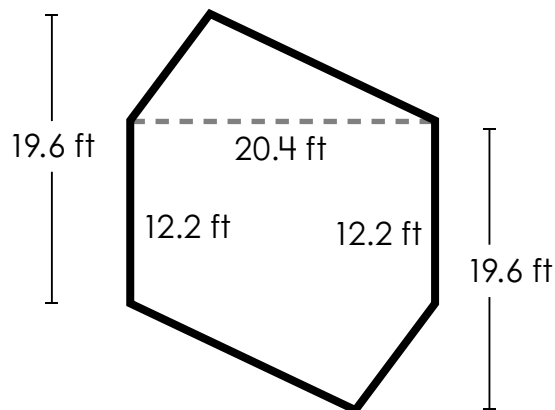
Find the area of the shape.  
Do not round. Include units  
in your answer.



# Preview

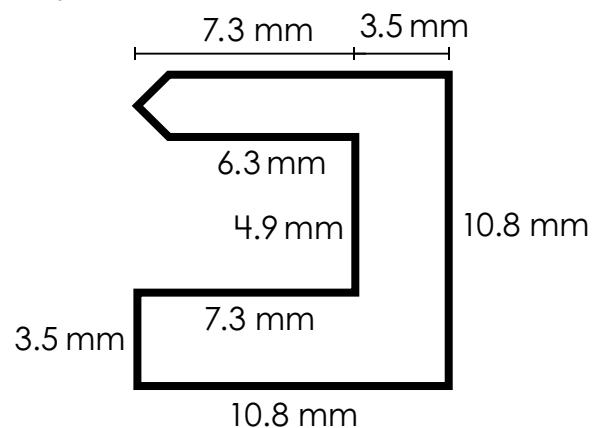
Please log in to download  
the printable version of this worksheet.

Find the area of the shape.  
Do not round. Include units  
in your answer.



Area: \_\_\_\_\_

Find the area of the shape.  
Do not round. Include units  
in your answer.



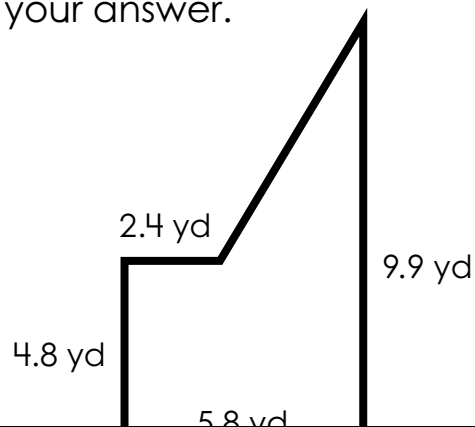
Area: \_\_\_\_\_

9.

## Area of an Irregular Shape

(Rectangles and Triangles)

Find the area of the shape.  
Do not round. Include units  
in your answer.

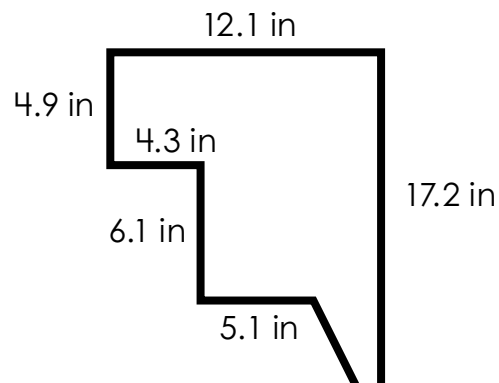


10.

## Area of an Irregular Shape

(Rectangles and Triangles)

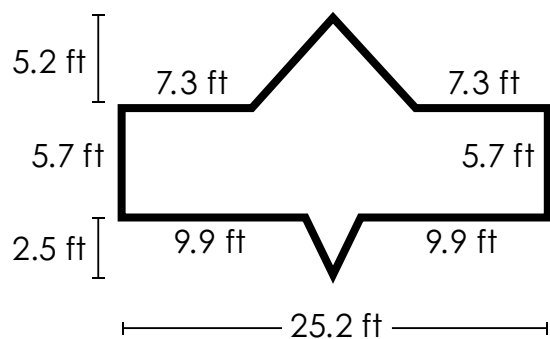
Find the area of the shape.  
Do not round. Include units  
in your answer.



# Preview

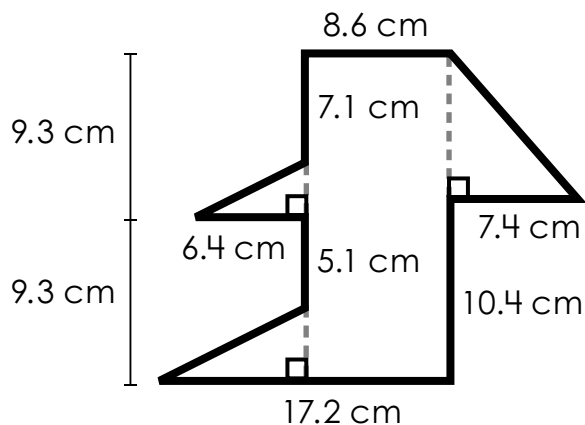
Please log in to download  
the printable version of this worksheet.

Find the area of the shape.  
Do not round. Include units  
in your answer.



Area: \_\_\_\_\_

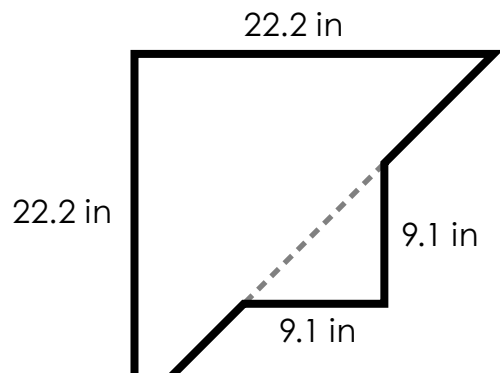
Find the area of the shape.  
Do not round. Include units  
in your answer.



Area: \_\_\_\_\_

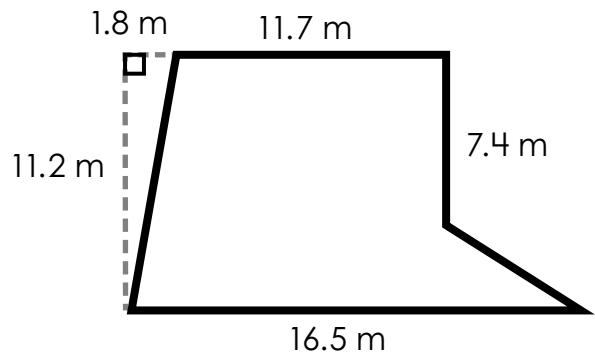
### 13. Area of an Irregular Shape (Rectangles and Triangles)

Find the area of the shape.  
Do not round. Include units  
in your answer.



### 14. Area of an Irregular Shape (Rectangles and Triangles)

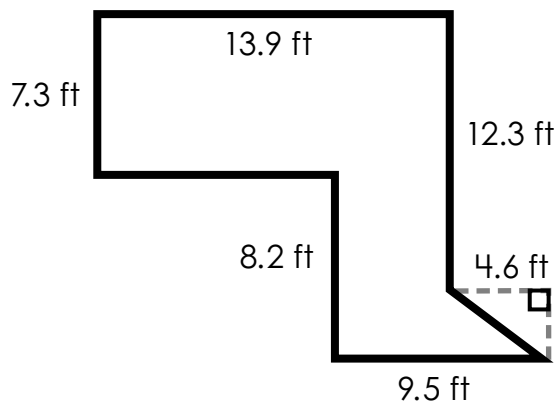
Find the area of the shape.  
Do not round. Include units  
in your answer.



# Preview

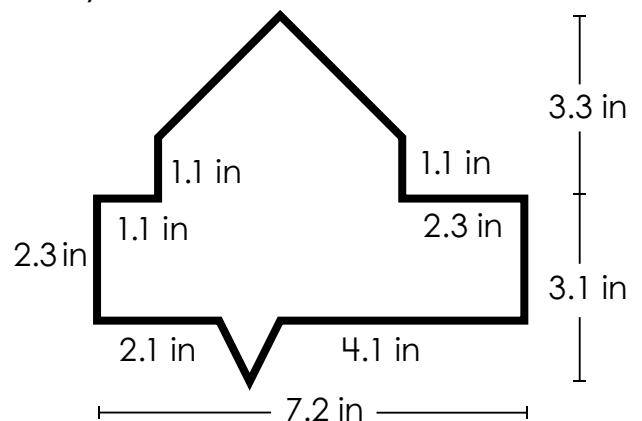
Please log in to download  
the printable version of this worksheet.

Find the area of the shape.  
Do not round. Include units  
in your answer.



Area: \_\_\_\_\_

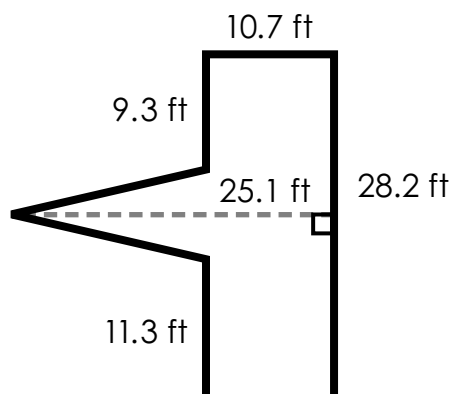
Find the area of the shape.  
Do not round. Include units  
in your answer.



Area: \_\_\_\_\_

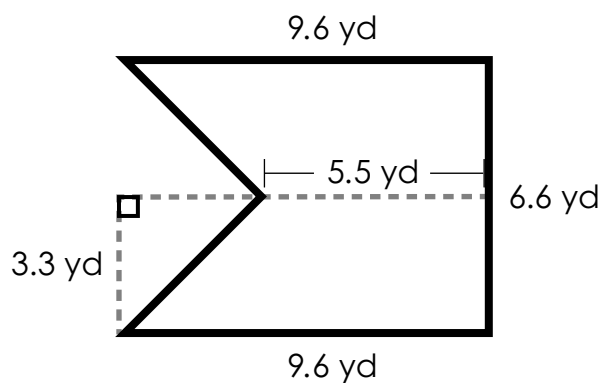
## 17. Area of an Irregular Shape (Rectangles and Triangles)

Find the area of the shape.  
Do not round. Include units  
in your answer.



## 18. Area of an Irregular Shape (Rectangles and Triangles)

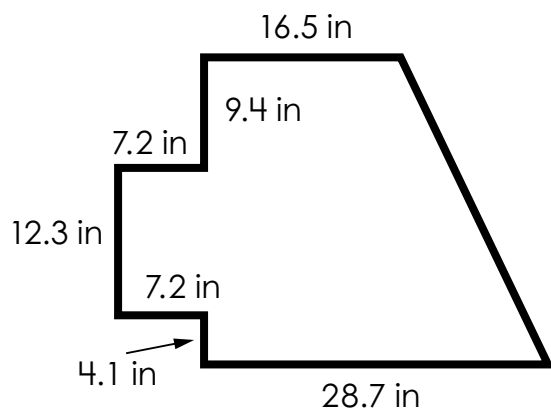
Find the area of the shape.  
Do not round. Include units  
in your answer.



# Preview

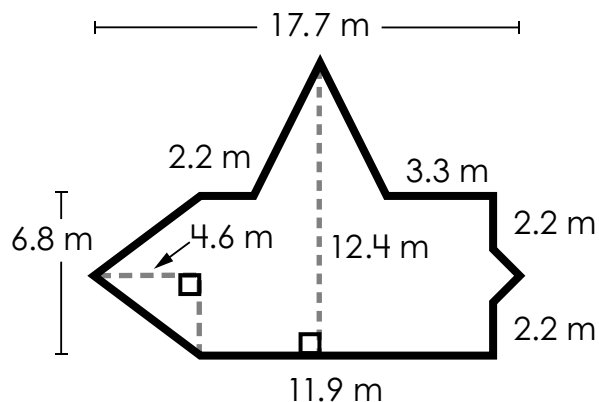
Please log in to download  
the printable version of this worksheet.

Find the area of the shape.  
Do not round. Include units  
in your answer.



Area: \_\_\_\_\_

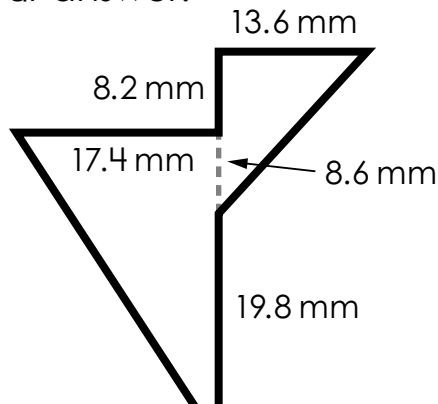
Find the area of the shape.  
Do not round. Include units  
in your answer.



Area: \_\_\_\_\_

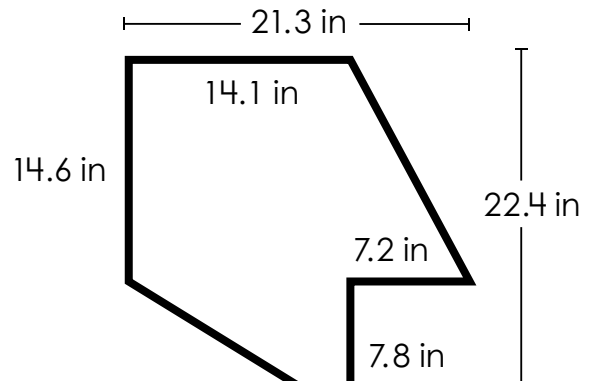
## 21. Area of an Irregular Shape (Rectangles and Triangles)

Find the area of the shape.  
Do not round. Include units  
in your answer.



## 22. Area of an Irregular Shape (Rectangles and Triangles)

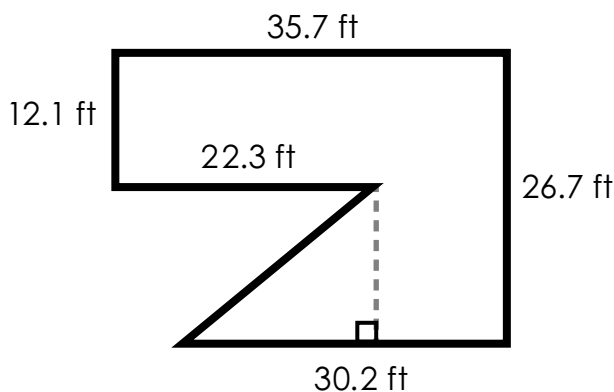
Find the area of the shape.  
Do not round. Include units  
in your answer.



# Preview

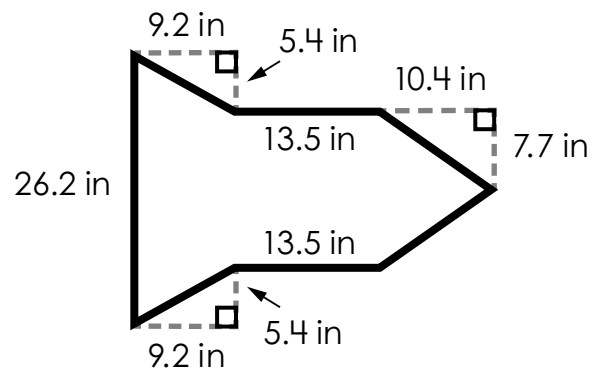
Please log in to download  
the printable version of this worksheet.

Find the area of the shape.  
Do not round. Include units  
in your answer.



Area: \_\_\_\_\_

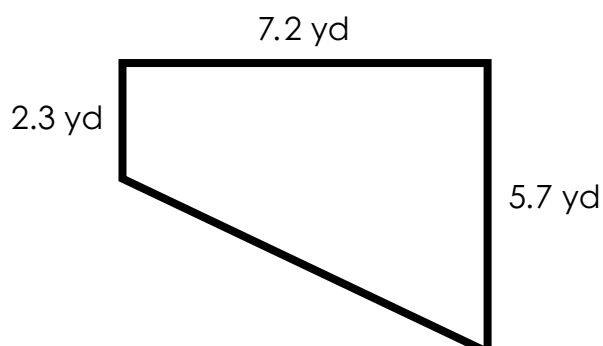
Find the area of the shape.  
Do not round. Include units  
in your answer.



Area: \_\_\_\_\_

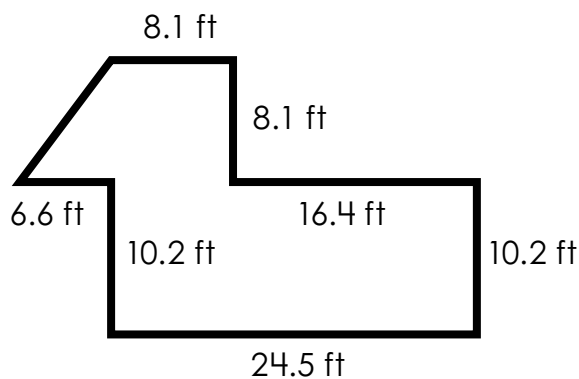
## 25. Area of an Irregular Shape (Rectangles and Triangles)

Find the area of the shape.  
Do not round. Include units  
in your answer.



## 26. Area of an Irregular Shape (Rectangles and Triangles)

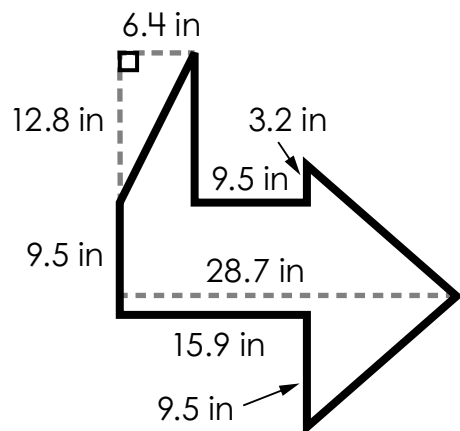
Find the area of the shape.  
Do not round. Include units  
in your answer.



# Preview

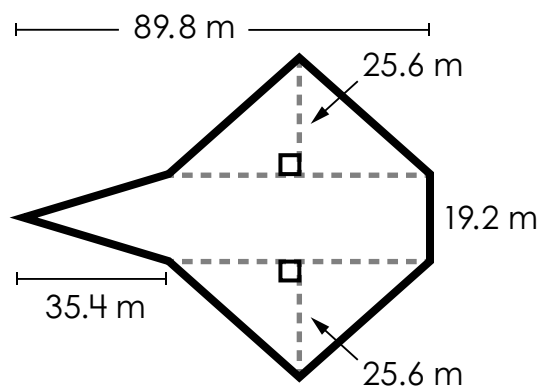
Please log in to download  
the printable version of this worksheet.

Find the area of the shape.  
Do not round. Include units  
in your answer.



Area: \_\_\_\_\_

Find the area of the shape.  
Do not round. Include units  
in your answer.



Area: \_\_\_\_\_

**29. Area of  
an Irregular Shape**  
(Rectangles and Triangles)

Find the area of the shape.  
Do not round. Include units  
in your answer.

**30. Area of  
an Irregular Shape**  
(Rectangles and Triangles)

Find the area of the shape.  
Do not round. Include units  
in your answer.



**Preview**

Please log in to download  
the printable version of this worksheet.

Area: \_\_\_\_\_

Area: \_\_\_\_\_



Name: \_\_\_\_\_

## Area of an Irregular Shape (Rectangles and Triangles)

1. Area = \_\_\_\_\_

16. Area = \_\_\_\_\_

2. Area = \_\_\_\_\_

17. Area = \_\_\_\_\_



13. Area = \_\_\_\_\_

28. Area = \_\_\_\_\_

14. Area = \_\_\_\_\_

29. Area = \_\_\_\_\_

15. Area = \_\_\_\_\_

30. Area = \_\_\_\_\_

# ANSWER KEY

## Area of an Irregular Shape (Rectangles and Triangles)

1. Area = 153.435 ft<sup>2</sup>

16. Area = 25.32 in<sup>2</sup>

2. Area = 41.04 m<sup>2</sup>

17. Area = 356.46 ft<sup>2</sup>



13. Area = 287.825 in<sup>2</sup>

28. Area = 2,776.96 m<sup>2</sup>

14. Area = 146.82 m<sup>2</sup>

29. Area = 191.52 ft<sup>2</sup>

15. Area = 149.01 ft<sup>2</sup>

30. Area = 153.32 in<sup>2</sup>