

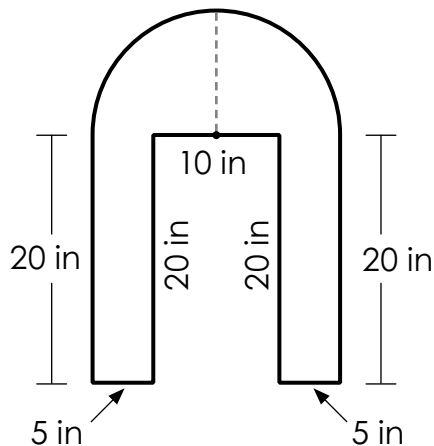
Name: _____

Basic

Area of an Irregular Shape

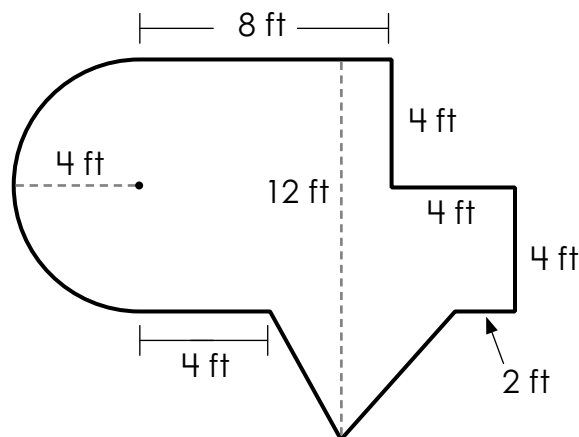
Find the area of each shape. Use 3.14 for pi, but do not round your answers. Include units.

1.



answer = _____

2.



answer = _____



6 m

answer = _____

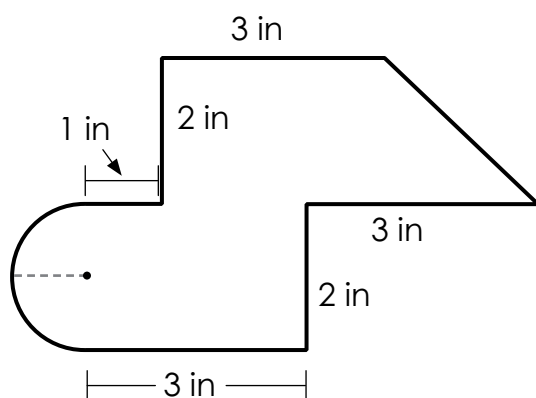
Preview

Please log in to download
the printable version of this worksheet.

14 yd

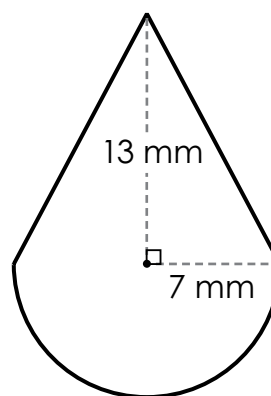
answer = _____

5.



answer = _____

6.



answer = _____

ANSWER KEY

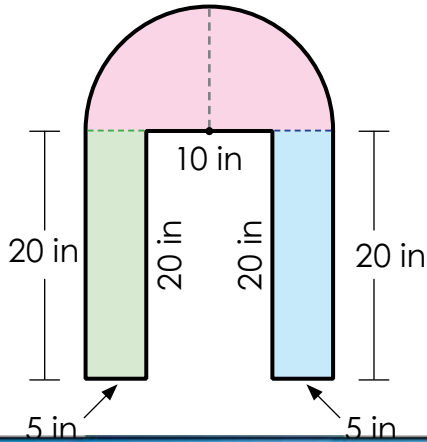
Basic

Note to teacher: shapes may be divided differently.

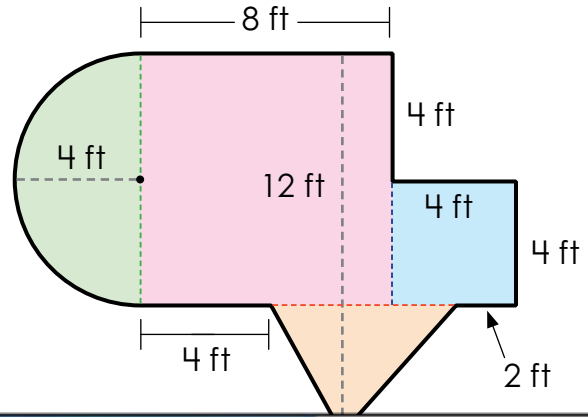
Area of an Irregular Shape

Find the area of each shape. Use 3.14 for pi, but do not round your answers. Include units.

1.



2.



Preview

Please log in to download
the printable version of this worksheet.

