

Name: _____

Area

area

the number of square units
that can fit inside of a shape

$$\text{area} = 5 \times 3$$

$$\text{area} = 15 \text{ square units}$$

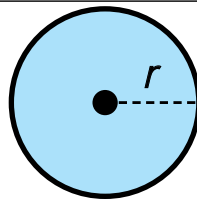


Preview

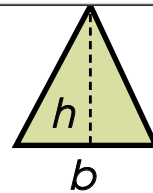
Please log in to download
the printable version of this worksheet.



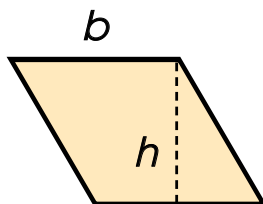
$$A = l \times w$$



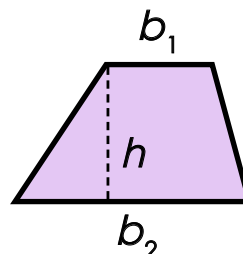
$$A = \pi r^2$$



$$A = \frac{1}{2} b \times h$$



$$A = b \times h$$



$$A = \frac{1}{2} (b_1 + b_2) \times h$$