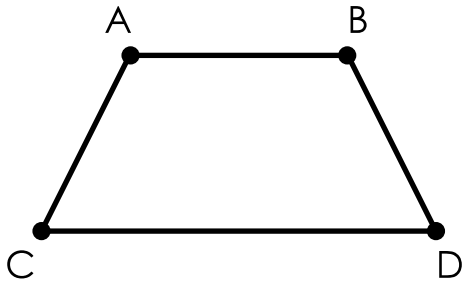


1.

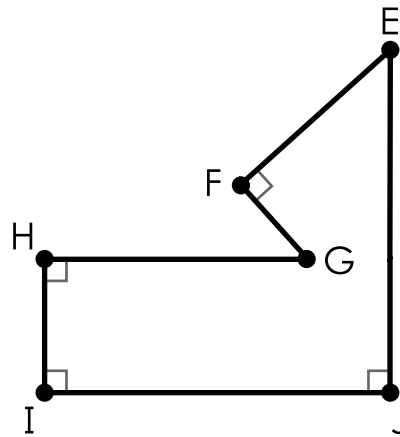
Types of Angles



Tell whether the angles are acute, right, or obtuse.

2.

Types of Angles



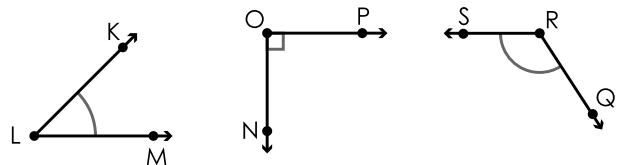
Tell whether the angles are acute, right, or obtuse.



Preview

Please log in to download the printable version of this worksheet.

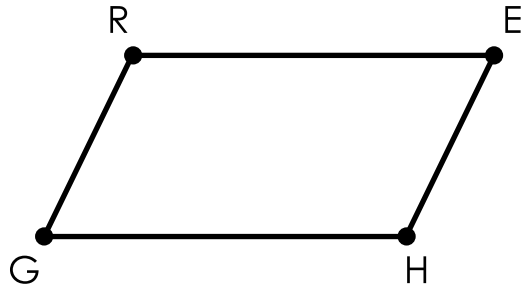
An angle measures 57° . Is it acute, right, or obtuse?



Which angle is obtuse?

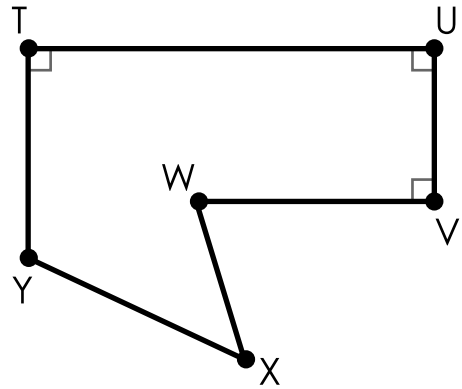
\sphericalangle _____

5. Types of Angles



Tell whether the angles are acute, right, or obtuse.

6. Types of Angles



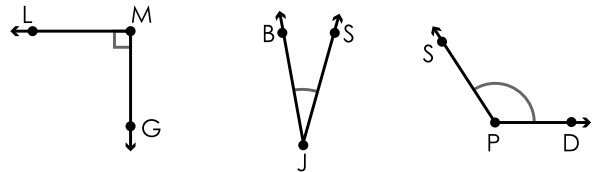
Tell whether the angles are acute, right, or obtuse.



Preview

Please log in to download the printable version of this worksheet.

An angle measures 90° . Is it acute, right, or obtuse?

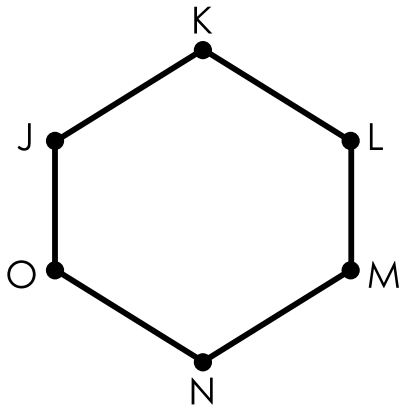


Which angle is right?

\angle _____

9.

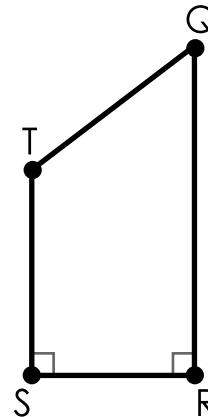
Types of Angles



Tell whether the angles are acute, right, or obtuse.

10.

Types of Angles



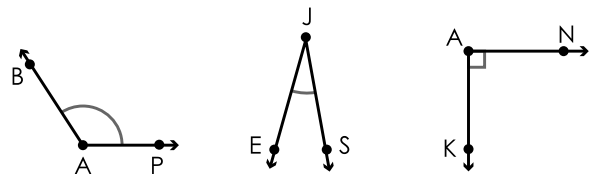
Tell whether the angles are acute, right, or obtuse.



Preview

Please log in to download the printable version of this worksheet.

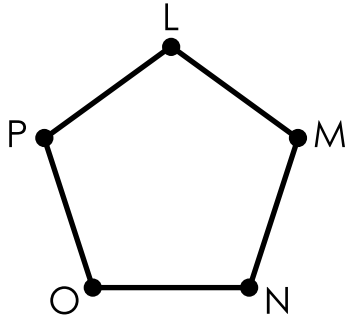
An angle measures 134° . Is it acute, right, or obtuse?



Which angle is acute?

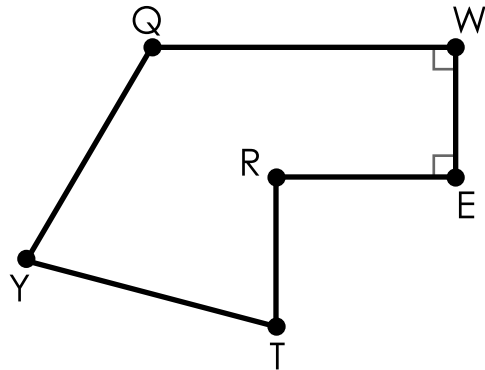
\angle _____

13. Types of Angles



Tell whether the angles are acute, right, or obtuse.

14. Types of Angles



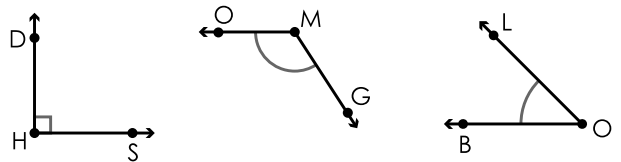
Tell whether the angles are acute, right, or obtuse.



Preview

Please log in to download the printable version of this worksheet.

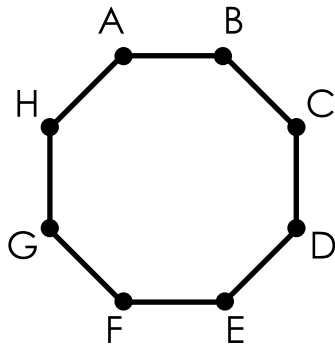
An angle measures 36° . Is it acute, right, or obtuse?



Which angle is obtuse?

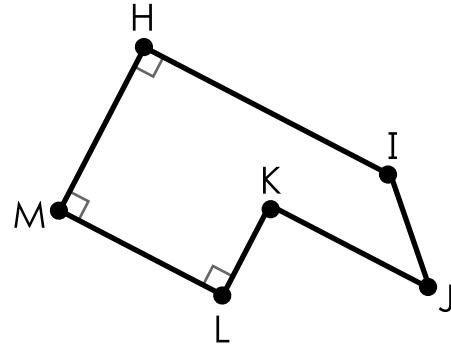
\angle _____

17. Types of Angles



Tell whether the angles are acute, right, or obtuse.

18. Types of Angles



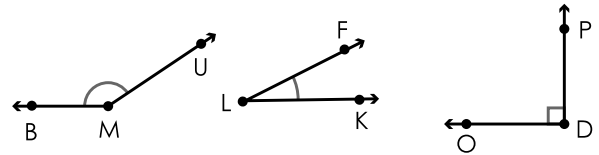
Tell whether the angles are acute, right, or obtuse.



Preview

Please log in to download the printable version of this worksheet.

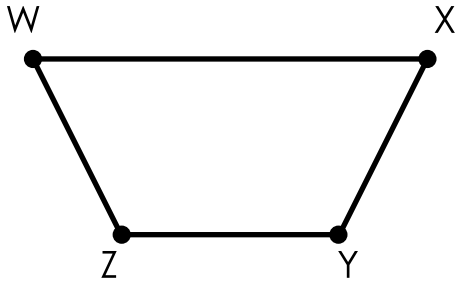
An angle measures 90° . Is it acute, right, or obtuse?



Which angle is right?

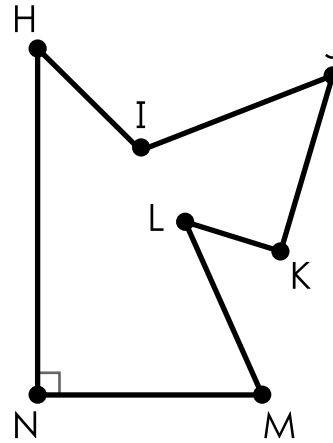
\angle _____

21. Types of Angles



Tell whether the angles are acute, right, or obtuse.

22. Types of Angles



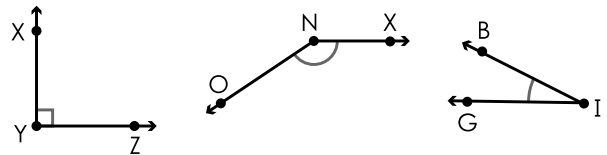
Tell whether the angles are acute, right, or obtuse.



Preview

Please log in to download the printable version of this worksheet.

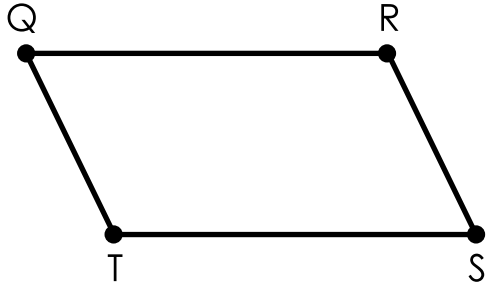
An angle measures 162° . Is it acute, right, or obtuse?



Which angle is acute?

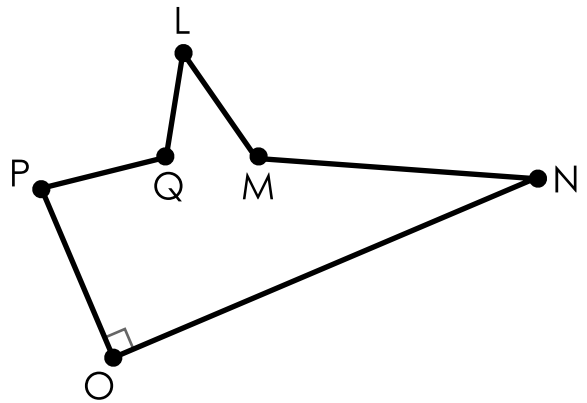
\angle _____

25. Types of Angles



Tell whether the angles are acute, right, or obtuse.

26. Types of Angles



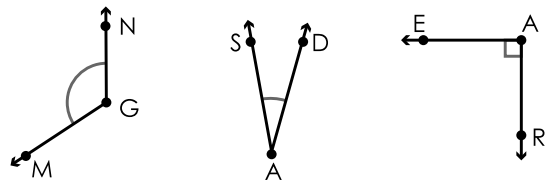
Tell whether the angles are acute, right, or obtuse.



Preview

Please log in to download the printable version of this worksheet.


An angle measures 18° . Is it acute, right, or obtuse?



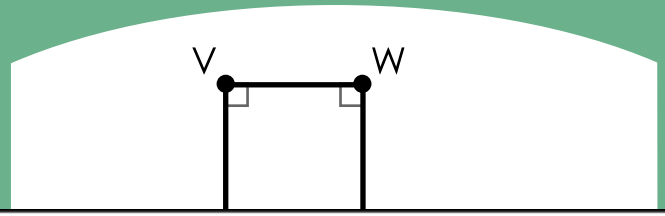
Which angle is obtuse?

\angle _____

29. Types of Angles



30. Types of Angles



Preview

Please log in to download
the printable version of this worksheet.

$\angle CDA$ _____

$\angle XYZ$ _____

Name: _____

Task Cards: Types of Angles

1. $\angle BAC =$ _____

$\angle BDC =$ _____

2. $\angle HGF =$ _____

$\angle GFE =$ _____

3. _____

Preview

Please log in to download
the printable version of this worksheet.



27. _____

28. \angle _____

29. $\angle ABC =$ _____

$\angle WVZ =$ _____

30. $\angle WVZ =$ _____

$\angle XYZ =$ _____

ANSWER KEY

Task Cards: Types of Angles

1. $\angle BAC =$ obtuse

$\angle BDC =$ acute

2. $\angle HGF =$ acute

$\angle GFE =$ right

3. acute

Preview

Please log in to download
the printable version of this worksheet.



27. acute

28. \angle MGN

29. $\angle ABC =$ right

$\angle WVZ =$ right

30. $\angle WVZ =$ right

$\angle XYZ =$ acute

Task Cards: Types of Angles

This file contains 30 task cards.

There are countless ways to use task cards in your classroom.
Here are a few ideas:

Preview

Please log in to download
the printable version of this worksheet.



Have a parent, friend, or volunteer sit with individual students who need extra help. They can practice by solving the problems on the task cards together.