



Name: \_\_\_\_\_

# Shape Addition



Find the sum of the numbers in the squares.

Find the sum of the numbers in the circles.

Find the sum of the numbers in the hexagons.



# Preview



Please log in to download the printable version of this worksheet.

Find the sum of the numbers in the triangles.

Find the sum of the numbers in the trapezoids.

Find the sum of the numbers in the octagons.

## Shape Addition



Find the sum of the numbers in the squares.

Find the sum of the numbers in the circles.

Find the sum of the numbers in the hexagons.



# Preview

Please log in to download the printable version of this worksheet.

\$12.91

\$1.88

\$8.65

Find the sum of the numbers in the triangles.

$$\begin{array}{r}
 \triangle \\
 \quad \$3.78 \\
 \hline
 \triangle \\
 \quad \$8.39 \\
 \hline
 + \\
 \hline
 \$12.17
 \end{array}$$

Find the sum of the numbers in the trapezoids.

$$\begin{array}{r}
 \text{trapezoid} \\
 \quad \$2.18 \\
 \hline
 \text{trapezoid} \\
 \quad \$1.29 \\
 \hline
 + \\
 \hline
 \$3.47
 \end{array}$$

Find the sum of the numbers in the octagons.

$$\begin{array}{r}
 \text{octagon} \\
 \quad \$4.84 \\
 \hline
 \text{octagon} \\
 \quad 56¢ \\
 \hline
 + \\
 \hline
 \$5.40
 \end{array}$$