


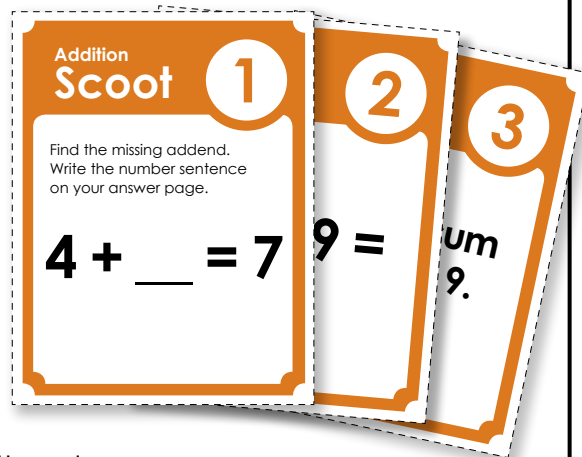
Basic Addition Scoot

Objective: This game will give students an opportunity to review basic addition.

Materials: Grid Worksheet (one per student)
Scoot Question Cards (one per desk)

Preparation: Place a Scoot Question Card on each desk. Attach them to the desk with tape.

How to Play: Students will move from desk to desk around the classroom. At each desk, students will read the addition card and write the answer on the grid worksheet. When the teacher says "SCOOT," they move to the next desk. Students visit each desk in the classroom and answer all of the question cards.



Preview

Please log in to download the printable version of this worksheet.

Management Suggestions:

Practice moving from desk to desk before playing the actual game. Have them "Scoot" four or five times before you begin the actual game.

Some teachers like to spread out the desks a bit so students do not look at the cards to the right or left of them before they arrive at the desks.

Watch your timing. If you tell the students to scoot too soon, they may not be able to finish writing answers to their question cards. If you wait too long before telling students to scoot, they may get bored and restless.

Use only as many question cards as you need. This version of the game has 30 cards. However, if you have only 18 desks in your classroom, only use 18 cards and 18 squares on the grid.

(This file has 20, 25, and 30 square grids. Use whichever one best meets your needs.)

Addition Scoot

1

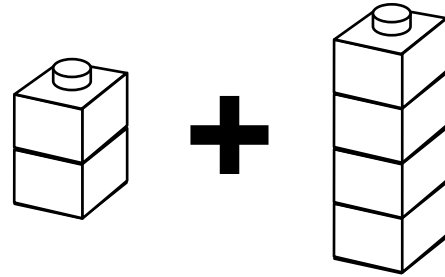
Find the missing addend.
Write the number sentence
on your answer page.

$$4 + \underline{\quad} = 7$$

Addition Scoot

2

Write the number sentence
for the picture below.



Preview

Please log in to download
the printable version of this worksheet.

What is the sum
of **1** and **9**?

Ella reads **2** books.
Then she reads **3**
more. How many
books did she read
in all?

Addition
 Scoot

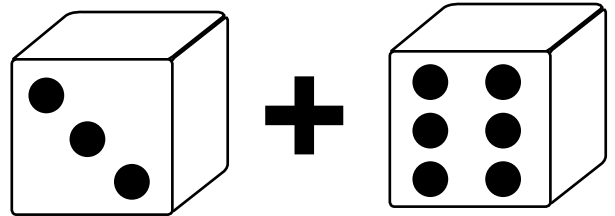
5

Adam eats **1** grape.
Then he eats **3**
more. How many
grapes did he eat
in all?

Addition
 Scoot

6

Write the number sentence
for the picture below.



Preview

*Please log in to download
the printable version of this worksheet.*

Find the missing addend.
Write the number sentence
on your answer page.

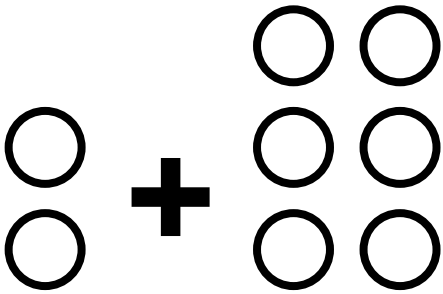
$$\underline{\quad} + 1 = 5$$

What is the sum
of **6** and **2**?

Addition
 Scoot

9

Write the number sentence
for the picture below.



Addition
 Scoot

10

Find the missing addend.
Write the number sentence
on your answer page.

$$3 + \underline{\quad} = 6$$



Preview

*Please log in to download
the printable version of this worksheet.*

What is the sum
of **1** and **1**?

Sara has **2** pencils.
She finds **1** more.
How many pencils
does she have now?

Addition
 Scoot


13

What is the sum
of **6** and **3**?

Addition
 Scoot

14

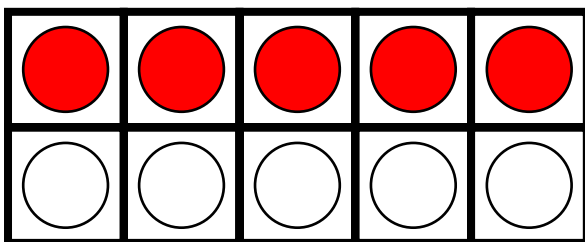
Max decorates
4 cookies. He
decorates **2** more.
How many cookies
did Max decorate?



Preview

Please log in to download
the printable version of this worksheet.

Write a number sentence
for the picture below.



_____ + _____ = _____
red white total
counters counters counters

Find the missing addend.
Write the number sentence
on your answer page.

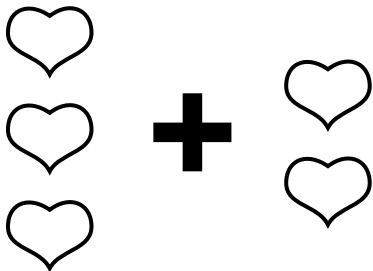
$$6 + \underline{\quad} = 10$$

Addition

Scoot

17

Write the number sentence
for the picture below.



Addition

Scoot

18

What is the sum
of **4** and **4**?



Preview

Please log in to download
the printable version of this worksheet.

Find the missing addend.
Write the number sentence
on your answer page.

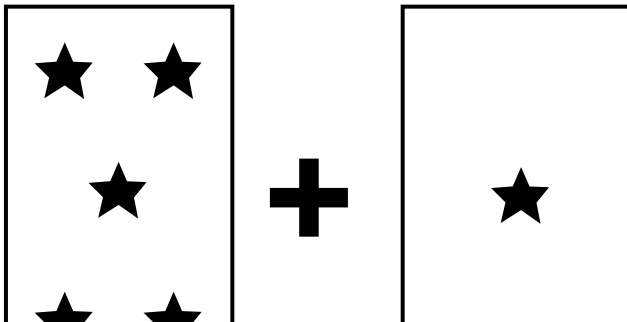
$$\underline{\quad} + 1 = 4$$

Leo has **5** toy cars.
His brother gives him
2 more. How many
cars does he have
in all?

Addition
 Scoot

21

Write the number sentence
for the picture below.




Addition
 Scoot

22

Find the missing addend.
Write the number sentence
on your answer page.

$$\underline{\quad} + 2 = 9$$



Preview

Please log in to download
the printable version of this worksheet.

Jill plays with **2**
kittens. **2** more
kittens come over.
How many kittens is
Jill playing with?

What is the sum
of **0** and **3**?

Addition
 Scoot

25

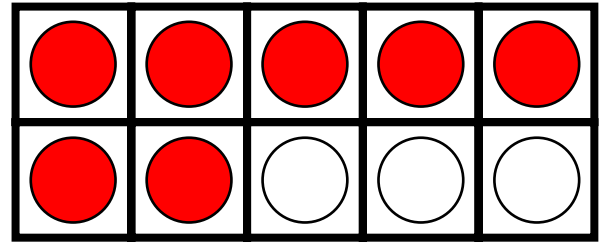
Find the missing addend.
Write the number sentence
on your answer page.

$$6 + \underline{\quad} = 8$$

Addition
 Scoot

26

Write a number sentence
for the picture below.



Preview

Please log in to download
the printable version of this worksheet.

What is the sum
of **3** and **4**?

I buy **1** green apple
and **4** red apples.
How many apples
did I buy in all?

Addition
 Scoot

29

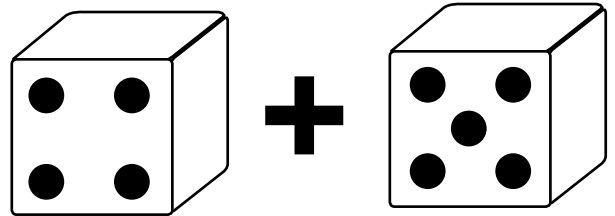
Find the missing addend.
Write the number sentence
on your answer page.

$$\underline{\quad} + 2 = 10$$

Addition
 Scoot

30

Write the number sentence
for the picture below.



Preview

Please log in to download
the printable version of this worksheet.

Name: _____

Basic Addition Scoot

Answer Grid:
20 Squares

①	②	③	④	⑤
⑥	⑦	⑧	⑨	⑩



Preview

Please log in to download
the printable version of this worksheet.

⑪	⑫	⑬	⑭	⑮
⑯	⑰	⑱	⑲	⑳

Name: _____

Basic Addition Scoot

Answer Grid:
25 Squares

①	②	③	④	⑤
⑥	⑦	⑧	⑨	⑩



Preview

Please log in to download
the printable version of this worksheet.

⑪	⑫	⑬	⑭	⑮
⑯	⑰	⑱	⑲	⑳

Name: _____

Basic Addition Scoot

Answer Grid:
30 Squares

①	②	③	④	⑤
⑥	⑦	⑧	⑨	⑩
⑪	⑫	⑬	⑭	⑮



Preview
Please log in to download
the printable version of this worksheet.

⑰	⑱	⑲	⑳	㉑
㉒	㉓	㉔	㉕	㉖

Basic Addition Scoot

Answer
Sheet

①

$4 + 3 = 7$

②

$2 + 4 = 6$

③

10

④

5

⑤

$1 + 3 = 4$

⑥

$3 + 6 = 9$

⑦

$4 + 1 = 5$

⑧

8

⑨

$2 + 8 = 10$

⑩

$3 + 3 = 6$

⑪

⑫

⑬

⑭

⑮



Preview

Please log in to download
the printable version of this worksheet.

⑰

$5 + 1 = 6$

⑱

$7 + 2 = 9$

⑳

$2 + 2 = 4$

㉑

3

㉒

$6 + 2 = 8$

㉓

$7 + 3 = 10$

㉔

7

㉕

$1 + 4 = 5$

㉖

$8 + 2 = 10$

㉗

$4 + 5 = 9$